

Right Triangles And Trigonometry Worksheet

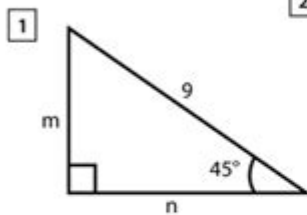
Name : _____

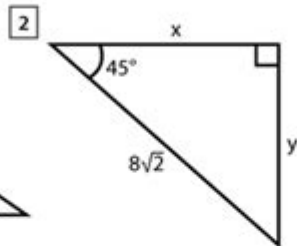
Score : _____ Date : _____

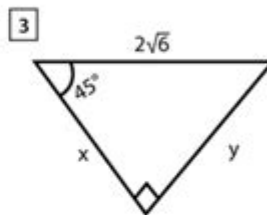


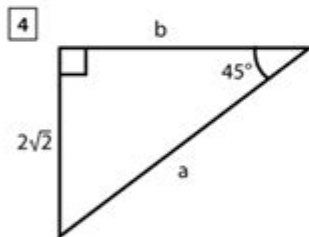
Right Triangle Worksheet

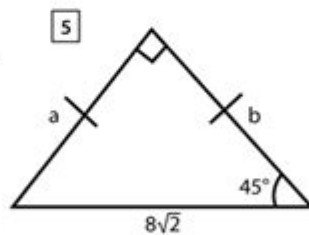
Find the missing side lengths and angles in the given right triangles.

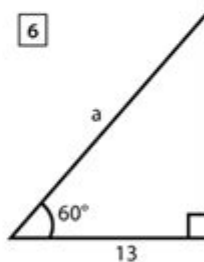


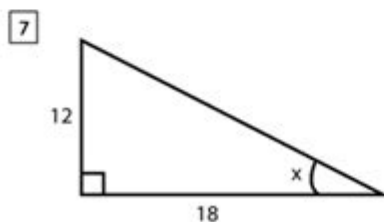


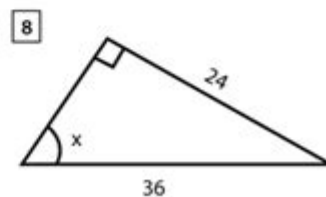












Right triangles and trigonometry worksheets are essential tools for students and educators alike, serving as a bridge between geometry and trigonometry. Right triangles, characterized by one angle measuring 90 degrees, are foundational in various mathematical applications. The study of these triangles leads to the introduction of trigonometric ratios, which provide valuable insights into the relationships between the angles and sides of triangles. This article will delve into the intricacies of right triangles, the principles of trigonometry, and how worksheets can enhance learning and comprehension.

Understanding Right Triangles

Right triangles play a crucial role in geometry and trigonometry. They have unique properties that make them easier to analyze compared to other types of triangles.

Definition and Properties

A right triangle is defined as a triangle that contains one right angle (90 degrees). The sides of a right triangle are known as:

1. Hypotenuse: The longest side, opposite the right angle.
2. Opposite: The side opposite the angle of interest.
3. Adjacent: The side next to the angle of interest and adjacent to the right angle.

Key properties of right triangles include:

- The Pythagorean Theorem, which states that $a^2 + b^2 = c^2$, where c is the hypotenuse and a and b are the other two sides.
- The sum of the angles in any triangle is always 180 degrees. In a right triangle, this means the two acute angles must sum to 90 degrees.

Types of Right Triangles

Right triangles can be classified based on their side lengths:

1. Isosceles Right Triangle: Two sides are of equal length. The angles are 45°, 45°, and 90°.
2. Scalene Right Triangle: All sides have different lengths, and the angles are not equal.

Trigonometric Ratios

Trigonometry studies the relationships between the angles and sides of triangles. For right triangles, three primary trigonometric ratios are defined:

1. Sine (sin): The ratio of the length of the opposite side to the length of the hypotenuse.

$$\sin(\theta) = \frac{\text{Opposite}}{\text{Hypotenuse}}$$

2. Cosine (cos): The ratio of the length of the adjacent side to the length of the hypotenuse.

$$\cos(\theta) = \frac{\text{Adjacent}}{\text{Hypotenuse}}$$

3. Tangent (tan): The ratio of the length of the opposite side to the length of the adjacent side.

$$\tan(\theta) = \frac{\text{Opposite}}{\text{Adjacent}}$$

These ratios are fundamental for solving various problems involving right triangles.

Applications of Trigonometric Ratios

Trigonometric ratios have a wide range of applications, including:

- Finding Unknown Sides: If two sides are known, the lengths of the third side can be determined using trigonometric ratios.
- Finding Angles: If the lengths of two sides are known, the angles can be calculated using inverse trigonometric functions (e.g., arcsin, arccos, arctan).
- Real-World Applications: Trigonometry is used in fields such as architecture, engineering, physics, and even navigation.

Creating and Using Right Triangles and Trigonometry Worksheets

Worksheets are vital in reinforcing the concepts of right triangles and trigonometry. They allow students to practice and apply their knowledge in various scenarios.

Types of Problems in Worksheets

A well-designed worksheet might include various types of problems, such as:

1. Finding Unknown Sides: Given one side and an angle, calculate the lengths of the other sides using trigonometric ratios.
2. Calculating Angles: Using given side lengths, determine the angles of the triangle using inverse trigonometric functions.
3. Pythagorean Theorem Problems: Solve problems where the lengths of two sides are given, and the student must find the length of the hypotenuse.
4. Word Problems: Real-life scenarios where students must apply their knowledge of right triangles and trigonometry to find solutions. For example, determining the height of a tree using the shadow it casts.
5. Identifying Triangle Types: Classify a triangle based on its sides and angles.

Creating Effective Worksheets

To create effective right triangles and trigonometry worksheets, consider the following tips:

- Vary the Difficulty: Include problems of varying difficulty levels to cater to different learning paces.
- Include Diagrams: Visual aids help students understand the relationships between angles and sides better. Ensure each problem has a corresponding diagram.
- Provide Clear Instructions: Each question should have explicit instructions to avoid confusion.
- Incorporate Real-World Context: Use scenarios from everyday life to make problems relatable and interesting.
- Solution Keys: Always provide solutions at the end of the worksheet to allow students to check their work.

Benefits of Using Worksheets

Worksheets offer numerous advantages in the learning process:

1. Reinforcement of Concepts: They provide opportunities for students to practice and reinforce their understanding of right triangles and trigonometric principles.
2. Assessment Tool: Educators can use worksheets to assess students' understanding and identify areas that need further clarification.
3. Promotes Independent Learning: Worksheets encourage students to work independently, promoting self-confidence in their problem-solving skills.
4. Variety of Learning Styles: Worksheets can cater to various learning styles, whether visual, auditory, or kinesthetic, by incorporating different types of questions and diagrams.
5. Preparation for Exams: Regular practice with worksheets helps students prepare for tests by familiarizing them with the types of questions they might encounter.

Conclusion

Right triangles and trigonometry worksheets are invaluable resources in mathematics education. They facilitate a deeper understanding of the relationships between the sides and angles of right triangles while providing essential practice for students. By mastering the concepts of right triangles and trigonometric ratios, students gain skills that are not only crucial for academic success but also applicable in real-world scenarios. With well-structured worksheets, learners can develop their mathematical abilities, preparing them for more advanced studies in geometry, trigonometry, and beyond.

Frequently Asked Questions

What is a right triangle?

A right triangle is a triangle that has one angle measuring 90 degrees.

What are the main trigonometric ratios used in right triangles?

The main trigonometric ratios are sine, cosine, and tangent, which relate the angles of the triangle to the lengths of its sides.

How can I find the length of a side in a right triangle using trigonometry?

You can use the sine, cosine, or tangent functions depending on which angles and sides you know. For example, if you know an angle and the length of one side, you can use these ratios to find the lengths of the other sides.

What is the Pythagorean theorem, and how does it relate to right triangles?

The Pythagorean theorem states that in a right triangle, the square of the length of the hypotenuse (the side opposite the right angle) is equal to the sum of the squares of the lengths of the other two sides.

How do you solve for an angle in a right triangle using trigonometric functions?

To solve for an angle, you can use the inverse trigonometric functions: arcsine, arccosine, or arctangent, depending on which sides are known.

What is the relationship between the angles in a right triangle?

The sum of the two non-right angles in a right triangle always equals 90 degrees.

How can a trigonometry worksheet help in learning about right triangles?

A trigonometry worksheet provides practice problems that reinforce concepts such as calculating side lengths, finding angles, and applying the Pythagorean theorem in right triangles.

What is the sine of a 30-degree angle in a right triangle?

The sine of a 30-degree angle is 0.5, meaning in a right triangle, the opposite side is half the length of the hypotenuse.

What are the common mistakes to avoid when solving right triangle problems?

Common mistakes include mislabeling sides, forgetting to use the correct trigonometric ratio, and miscalculating the angles or sides using the Pythagorean theorem.

Can you explain the concept of the unit circle in relation to right triangles?

The unit circle is a circle with a radius of 1 centered at the origin of a coordinate plane. Right triangles can be formed using angles from the unit circle, where the x-coordinate represents the cosine and the y-coordinate represents the sine of the angle.

Find other PDF article:

<https://soc.up.edu.ph/04-ink/files?docid=vft92-6496&title=adding-two-two-digit-numbers-worksheet.pdf>

Right Triangles And Trigonometry Worksheet

2025-7-22 00:00:00 Openwrt x86 6.12 ...

Jun 24, 2025 · 1. 2. 3. ...

AX3000T 1.0.90 OpenWrt 24.10.0

2025-02-01 1.0.90 OpenWrt 24.10.0 - First Stable Release - 6. February 2025 [OpenWrt Wiki] Xiaomi AX3000T ...

https://qos -

Apr 28, 2025 · TLS lz A: ...

Cudy TR3000 256MB -OPENWRT

Jun 3, 2025 ·

oes -PCDN

Jun 22, 2025 ·

2024 X86 () -

Oct 27, 2024 · X86 G7505 N1

[N1] -

Nov 6, 2024 · N1 W 1.

Enhance your understanding of right triangles and trigonometry with our comprehensive worksheet. Perfect for students and educators. Learn more today!

[Back to Home](#)