

Right Triangle Congruence Worksheet

Name : _____

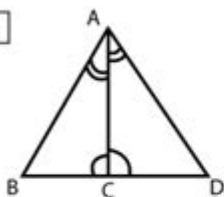
Score : _____ Date : _____



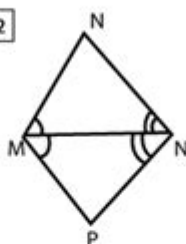
Triangle Congruence Theorem Worksheet

For each pair of triangles, state the theorem that can be used to conclude that the triangles are congruent

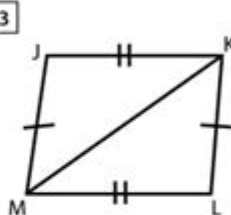
1



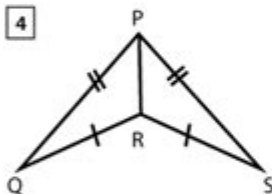
2



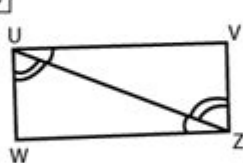
3



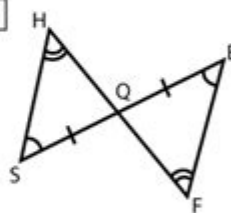
4



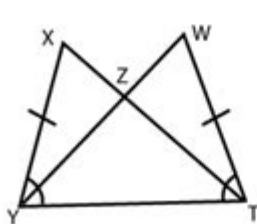
5



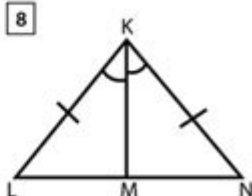
6



7



8



Right triangle congruence worksheet is an essential tool for students learning about the properties and applications of right triangles in geometry. Understanding congruence in triangles is crucial not only for academic success but also for practical applications in fields like engineering, architecture, and various scientific disciplines. This article will explore what right triangle congruence is, the importance of worksheets in learning this concept, and how to effectively use a right triangle congruence worksheet for practice and mastery.

Understanding Right Triangle Congruence

Right triangle congruence refers to the idea that two right triangles are congruent if they have the same size and shape. This means that all corresponding sides and angles of the triangles are equal. The most common criteria for establishing the congruence of right triangles are:

- **Hypotenuse-Leg (HL) Congruence:** If the hypotenuse and one leg of a right triangle are equal to the hypotenuse and one leg of another right triangle, then the triangles are congruent.
- **Leg-Leg (LL) Congruence:** If both legs of one right triangle are equal to both legs of another right triangle, then the triangles are congruent.
- **Angle-Side-Angle (ASA) Congruence:** If one angle and the sides forming that angle of one triangle are equal to the corresponding angle and sides of another triangle, then the triangles are congruent.

The Importance of Right Triangle Congruence Worksheets

Worksheets are an effective educational tool that can facilitate the learning process in various ways. Here's why right triangle congruence worksheets are particularly beneficial:

1. Reinforcement of Concepts

Worksheets allow students to apply what they have learned in class. By working through problems involving right triangle congruence, students can reinforce their understanding of the criteria and properties of right triangles.

2. Skill Development

Completing a right triangle congruence worksheet helps students develop important skills such as problem-solving, critical thinking, and analytical reasoning. These skills are not only necessary for geometry but also for other subjects and real-world situations.

3. Assessment and Feedback

Worksheets provide a means for teachers to assess student understanding and identify areas where students may be struggling. Feedback from completed worksheets can guide further instruction and help tailor lesson plans to meet student needs.

4. Preparation for Exams

Regular practice with worksheets can help students prepare for quizzes and exams. By becoming familiar with various types of problems, students build confidence in their ability to tackle similar questions in a testing environment.

How to Use a Right Triangle Congruence Worksheet Effectively

To maximize the benefits of a right triangle congruence worksheet, students should follow a structured approach:

1. Review the Theoretical Concepts

Before diving into the worksheet, students should review the key concepts related to right triangle congruence, including definitions and criteria. This foundational knowledge will make solving problems much easier.

2. Approach Problems Methodically

When working through the worksheet, students should approach each problem methodically:

1. Read the problem carefully and identify the given information.
2. Determine which congruence criteria apply to the triangles in question.
3. Draw diagrams if necessary to visualize the triangles.
4. Write out the steps taken to establish congruence clearly.

3. Check Work and Understand Mistakes

After completing the worksheet, students should review their answers. Checking work helps reinforce correct methods and provides insight into any mistakes made. Understanding errors is crucial for improvement and mastery of the subject.

4. Seek Help When Needed

If students encounter persistent difficulties, they should not hesitate to seek help from teachers, tutors, or peers. Collaborative learning can provide different perspectives and strategies for understanding right triangle congruence.

Examples of Right Triangle Congruence Problems

To illustrate how a right triangle congruence worksheet might be structured, here are some sample problems:

Example 1: Hypotenuse-Leg Congruence

Given two right triangles, Triangle A with a hypotenuse of 10 cm and one leg of 6 cm, and Triangle B with a hypotenuse of 10 cm and one leg of 6 cm. Are the triangles congruent? Explain your reasoning.

Example 2: Leg-Leg Congruence

Triangle C has legs measuring 5 cm and 12 cm, while Triangle D has legs measuring 5 cm and 12 cm. Are the triangles congruent? Justify your answer using the appropriate congruence criterion.

Example 3: Angle-Side-Angle Congruence

Triangle E has an angle measuring 30 degrees and adjacent sides of 5 cm and 6 cm, while Triangle F has an angle measuring 30 degrees and adjacent sides of 5 cm and 6 cm. Are the triangles congruent? Provide a detailed explanation.

Conclusion

In summary, a **right triangle congruence worksheet** serves as a valuable resource for students to deepen their understanding of this fundamental geometric concept. By reinforcing learning through practice, developing problem-solving skills, and preparing for assessments, students can gain confidence in their ability to work with triangles. By adopting a structured approach to using these worksheets, students will not only improve their geometry skills but also enhance their overall mathematical proficiency.

Frequently Asked Questions

What are the main criteria for determining the congruence of right triangles?

The main criteria for right triangle congruence are the Hypotenuse-Leg (HL) Theorem, Leg-Leg (LL) Theorem, and Angle-Hypotenuse (AH) Theorem.

How can a right triangle congruence worksheet be used in a classroom setting?

A right triangle congruence worksheet can be used for practice in identifying congruent triangles, applying congruence postulates, and solving real-world problems involving right triangles.

What types of problems might be included in a right triangle congruence worksheet?

Problems may include finding missing side lengths, proving triangles are congruent using postulates, and applying the Pythagorean theorem.

What is the Hypotenuse-Leg (HL) Theorem?

The HL Theorem states that if the hypotenuse and one leg of one right triangle are equal to the hypotenuse and one leg of another right triangle, then the triangles are congruent.

What is the purpose of including diagrams in a right triangle congruence worksheet?

Diagrams help students visualize the triangles, understand the relationships between sides and angles, and apply congruence criteria effectively.

How does the Pythagorean theorem relate to right triangle congruence?

The Pythagorean theorem can be used to calculate the lengths of sides, which can then help in determining if two right triangles are congruent.

What are common mistakes students make when working on right triangle congruence problems?

Common mistakes include misapplying congruence postulates, overlooking the right angle, and incorrect calculations of side lengths.

Can right triangle congruence be applied in real-world scenarios?

Yes, right triangle congruence can be applied in various fields such as architecture, engineering, and physics to solve problems involving distances and angles.

What resources can enhance understanding of right triangle congruence?

Resources may include online tutorials, interactive geometry software, instructional videos, and additional practice worksheets.

How can teachers assess student understanding of right triangle congruence?

Teachers can assess understanding through quizzes, homework assignments, group activities, and by reviewing completed worksheets for accuracy and method.

Find other PDF article:
<https://soc.up.edu.ph/07-post/files?trackid=stM05-4869&title=are-dogs-colorblind-science-project.pdf>

Right Triangle Congruence Worksheet

2025-7-22

Openwrt x86 6.12

Jun 24, 2025 ·

1.2.3.

AX3000T 1.0.90

OpenWrt 24.10.0

2025-02

1.0.90OpenWrt

OpenWrt 24.10.0 - First Stable Release - 6. February 2025

[OpenWrt Wiki] Xiaomi AX3000T

https

qos

Apr 28, 2025 ·

TL

lz

A:

Cudy TR3000 256MB

OPENWRT

Jun 3, 2025 ·

oes

PCDN

Jun 22, 2025 ·

2024

X86

Oct 27, 2024 ·

X86

G7505

N1

N1

Nov 6, 2024 ·

N1

W

1.

Plus

