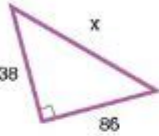
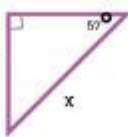


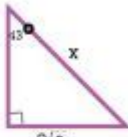
# Right Triangle Trig Worksheet

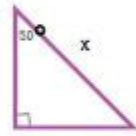
**BASIC RIGHT TRIANGLE TRIGONOMETRY WORKSHEET**

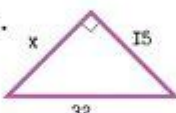
Solve the below problems

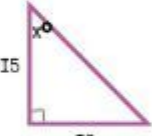
1.   $x = \underline{\hspace{2cm}}$

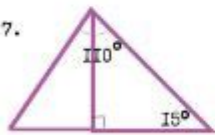
2.   $x = \underline{\hspace{2cm}}$

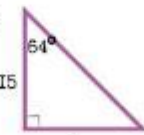
3.   $x = \underline{\hspace{2cm}}$

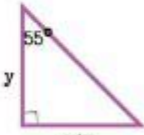
4.   $x = \underline{\hspace{2cm}}$

5.   $x = \underline{\hspace{2cm}}$

6.   $x = \underline{\hspace{2cm}}$

7.   $x = \underline{\hspace{2cm}}$

8.   $x = \underline{\hspace{2cm}}$

9.   $x = \underline{\hspace{2cm}}$

mathcrush.com?

**Right triangle trig worksheet** is an essential tool for students and educators alike, helping to reinforce the concepts of trigonometry in the context of right triangles. Trigonometry, a branch of mathematics, deals with the relationships between the angles and sides of triangles, particularly right triangles. Understanding these principles is crucial for various fields, including engineering, physics, architecture, and even computer graphics.

In this article, we will explore the foundations of right triangle trigonometry, the significance of worksheets in mastering these concepts, and practical applications of trigonometric ratios in real-world scenarios.

# Understanding Right Triangles and Trigonometric Ratios

A right triangle is defined as a triangle that contains one angle measuring 90 degrees. The sides of a right triangle are classified as follows:

- Hypotenuse: The side opposite the right angle, which is the longest side of the triangle.
- Opposite Side: The side opposite the angle of interest.
- Adjacent Side: The side next to the angle of interest, excluding the hypotenuse.

The primary trigonometric ratios in right triangles are:

1. Sine (sin): The ratio of the length of the opposite side to the hypotenuse.  
- Formula:  $\sin(\theta) = \frac{\text{Opposite}}{\text{Hypotenuse}}$
2. Cosine (cos): The ratio of the length of the adjacent side to the hypotenuse.  
- Formula:  $\cos(\theta) = \frac{\text{Adjacent}}{\text{Hypotenuse}}$
3. Tangent (tan): The ratio of the length of the opposite side to the adjacent side.  
- Formula:  $\tan(\theta) = \frac{\text{Opposite}}{\text{Adjacent}}$

These ratios form the basis for solving problems related to right triangles, allowing us to find unknown side lengths or angle measures given sufficient information.

## The Importance of Right Triangle Trig Worksheets

Worksheets focused on right triangle trigonometry play a vital role in the learning process. They provide students with:

- Practice Problems: Worksheets contain a variety of problems that challenge students to apply trigonometric ratios to find unknown sides and angles.
- Visual Learning: Many worksheets include diagrams of right triangles, which help students visualize the relationships between the sides and angles.
- Step-by-Step Solutions: Effective worksheets often provide solutions or explanations, allowing students to learn from their mistakes and understand the problem-solving process.
- Assessment Tools: Teachers can use these worksheets to assess student understanding and identify areas where further instruction may be necessary.

## Types of Right Triangle Trig Worksheets

There are several types of worksheets available for right triangle trigonometry, catering to different learning objectives:

1. Basic Trigonometric Ratios:

- These worksheets focus on using sine, cosine, and tangent to find unknown sides or angles in right triangles.

2. Applications in Word Problems:

- Worksheets that present real-life scenarios where students must apply trigonometric ratios to solve problems, such as calculating heights and distances.

3. Finding Angle Measures:

- These worksheets require students to use the inverse trigonometric functions ( $\sin^{-1}$ ,  $\cos^{-1}$ ,  $\tan^{-1}$ ) to determine angle measures when the lengths of the sides are known.

4. Unit Circle and Trigonometric Functions:

- Some worksheets may also extend into the unit circle, exploring the relationship between angles and their corresponding sine and cosine values.

5. Pythagorean Theorem Integration:

- Worksheets that incorporate the Pythagorean theorem, reinforcing the relationship between the sides of a right triangle alongside trigonometric concepts.

## How to Solve Right Triangle Trigonometry Problems

When approaching problems involving right triangles, it is beneficial to follow a systematic process. Here are the steps to effectively solve these problems:

1. **Identify the Triangle:** Determine which sides and angles are known and which need to be found.
2. **Choose the Appropriate Ratio:** Based on the information provided, decide whether to use sine, cosine, or tangent.
3. **Set Up the Equation:** Substitute the known values into the chosen trigonometric ratio formula.
4. **Solve for the Unknown:** Use algebraic techniques to isolate the variable and solve for the unknown side length or angle measure.
5. **Check Your Work:** Verify the solution by checking if the values satisfy the original triangle's properties or any given conditions.

# Practical Applications of Right Triangle Trigonometry

Right triangle trigonometry is not just an academic exercise; it has numerous practical applications in various fields. Here are a few examples:

- **Architecture and Construction:** Architects and builders use trigonometry to calculate structural loads, heights, and distances, ensuring that buildings are safe and sound.
- **Navigation:** Trigonometry is vital in navigation, allowing pilots and sailors to determine their course and position using angles and distances.
- **Physics:** In physics, trigonometry is used to analyze forces, motion, and waves, providing a mathematical framework for understanding complex phenomena.
- **Computer Graphics:** In computer graphics, trigonometric functions are employed to create realistic animations and simulations by modeling the movement of objects in a three-dimensional space.
- **Surveying:** Surveyors use trigonometric principles to measure land, calculate elevations, and create maps, which is crucial in urban planning and development.

## Conclusion

In conclusion, a **right triangle trig worksheet** serves as a valuable educational resource for both students and educators. By reinforcing fundamental concepts of trigonometry and providing practical problem-solving opportunities, these worksheets enhance understanding and mastery of the subject. Whether used in the classroom or for independent study, they facilitate the development of critical skills necessary for applying trigonometric principles in real-world contexts.

As students work through various problems and scenarios, they not only build confidence in their mathematical abilities but also prepare themselves for future applications in diverse fields. Thus, mastering right triangle trigonometry through worksheets is an investment in both academic success and practical knowledge.

# Frequently Asked Questions

## What is a right triangle trig worksheet?

A right triangle trig worksheet is an educational resource designed to help students practice problems related to trigonometric functions in right triangles, including sine, cosine, and tangent.

## What kind of problems can you find on a right triangle trig worksheet?

Problems typically include finding missing side lengths, calculating angles, and applying the Pythagorean theorem, as well as using trigonometric ratios.

## How do you use trigonometric ratios in right triangles?

In right triangles, trigonometric ratios such as sine (opposite/hypotenuse), cosine (adjacent/hypotenuse), and tangent (opposite/adjacent) are used to relate the angles to the side lengths.

## What is the Pythagorean theorem and how does it relate to right triangles?

The Pythagorean theorem states that in a right triangle, the square of the length of the hypotenuse is equal to the sum of the squares of the lengths of the other two sides, expressed as  $a^2 + b^2 = c^2$ .

## Can a right triangle trig worksheet help with real-world applications?

Yes, these worksheets can help apply trigonometric principles to real-world scenarios, such as calculating heights, distances, and angles in fields like architecture, engineering, and physics.

## What tools might be needed to complete a right triangle trig worksheet?

Students may need a calculator for trigonometric functions, a ruler for measuring sides, and possibly graph paper for visualizing triangles.

## Are there specific formulas to remember for right triangle trigonometry?

Key formulas include the definitions of sine, cosine, and tangent, as well as the Pythagorean theorem, and the angle sum identities for complementary angles.

## How can students check their answers on a right triangle trig worksheet?

Students can verify their answers by using inverse trigonometric functions, checking calculations against the Pythagorean theorem, or using a calculator to confirm angle measures.

## What grade levels typically use right triangle trig worksheets?

Right triangle trig worksheets are commonly used in middle school and high school math classes, particularly in Geometry and Algebra II courses.

## Where can I find right triangle trig worksheets for practice?

Right triangle trig worksheets can be found online through educational websites, math resource platforms, and in math textbooks or workbooks.

Find other PDF article:

<https://soc.up.edu.ph/67-blur/pdf?docid=vHX42-7093&title=windshield-survey-community-assessment-example.pdf>

## Right Triangle Trig Worksheet

2025-7-22 00:00:00 Openwrt x86 6.12 ...

Jun 24, 2025 · 1. 2. 3. ...

AX3000T 1.0.90 OpenWrt 24.10.0

2025-02-01 1.0.90 OpenWrt 24.10.0 - First Stable Release - 6. February 2025 [OpenWrt Wiki] Xiaomi AX3000T ...

https://qos -

Apr 28, 2025 · TLS lz A: ...

Cudy TR3000 256MB -OPENWRT -

Jun 3, 2025 ·

oes -PCDN

Jun 22, 2025 ·

2024 X86 - ( ) -

Oct 27, 2024 · X86 G7505 N1



WiFi7 1000 BE7Pro ...

Oct 14, 2024 · WiFi7 1000 BE7Pro BE7200Pro+ ...

Master right triangle trigonometry with our comprehensive worksheet! Enhance your skills and boost your confidence in solving problems. Learn more today!

[Back to Home](#)