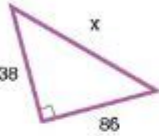
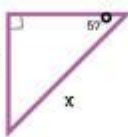


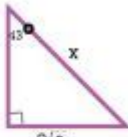
Right Triangle Trigonometry Worksheet

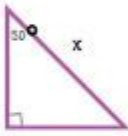
BASIC RIGHT TRIANGLE TRIGONOMETRY WORKSHEET

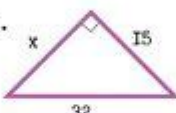
Solve the below problems

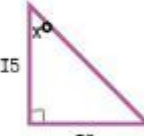
1.  $x = \underline{\hspace{2cm}}$

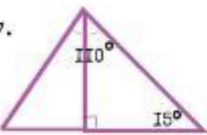
2.  $x = \underline{\hspace{2cm}}$

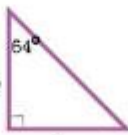
3.  $x = \underline{\hspace{2cm}}$

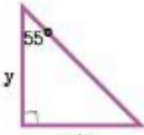
4.  $x = \underline{\hspace{2cm}}$

5.  $x = \underline{\hspace{2cm}}$

6.  $x = \underline{\hspace{2cm}}$

7.  $x = \underline{\hspace{2cm}}$

8.  $x = \underline{\hspace{2cm}}$

9.  $x = \underline{\hspace{2cm}}$

mathcrush.com?

RIGHT TRIANGLE TRIGONOMETRY WORKSHEET IS AN ESSENTIAL EDUCATIONAL TOOL THAT HELPS STUDENTS UNDERSTAND THE RELATIONSHIPS BETWEEN THE ANGLES AND SIDES OF RIGHT TRIANGLES. TRIGONOMETRY, A BRANCH OF MATHEMATICS, FOCUSES ON THE RELATIONSHIPS BETWEEN THE ANGLES AND SIDES OF TRIANGLES, PARTICULARLY RIGHT TRIANGLES, WHICH HAVE ONE ANGLE MEASURING 90 DEGREES. THIS ARTICLE DELVES INTO THE CONCEPTS OF RIGHT TRIANGLE TRIGONOMETRY, OUTLINES A TYPICAL WORKSHEET STRUCTURE, AND INCLUDES PRACTICAL EXAMPLES AND EXERCISES TO REINFORCE LEARNING.

UNDERSTANDING RIGHT TRIANGLE TRIGONOMETRY

RIGHT TRIANGLE TRIGONOMETRY IS GROUNDED IN THREE PRIMARY FUNCTIONS: SINE, COSINE, AND TANGENT. THESE FUNCTIONS RELATE THE ANGLES OF A TRIANGLE TO THE RATIOS OF ITS SIDES.

DEFINITIONS OF TRIGONOMETRIC RATIOS

1. SINE (sin): THE SINE OF AN ANGLE IN A RIGHT TRIANGLE IS THE RATIO OF THE LENGTH OF THE OPPOSITE SIDE TO THE LENGTH OF THE HYPOTENUSE.

- FORMULA: $\sin(\theta) = \frac{\text{OPPOSITE}}{\text{HYPOTENUSE}}$

2. COSINE (cos): THE COSINE OF AN ANGLE IS THE RATIO OF THE LENGTH OF THE ADJACENT SIDE TO THE LENGTH OF THE HYPOTENUSE.

- FORMULA: $\cos(\theta) = \frac{\text{ADJACENT}}{\text{HYPOTENUSE}}$

3. TANGENT (tan): THE TANGENT OF AN ANGLE IS THE RATIO OF THE LENGTH OF THE OPPOSITE SIDE TO THE LENGTH OF THE ADJACENT SIDE.

- FORMULA: $\tan(\theta) = \frac{\text{OPPOSITE}}{\text{ADJACENT}}$

THESE RATIOS ARE FUNDAMENTAL IN SOLVING PROBLEMS INVOLVING RIGHT TRIANGLES, WHETHER DETERMINING UNKNOWN SIDE LENGTHS OR ANGLE MEASURES.

COMPONENTS OF A RIGHT TRIANGLE TRIGONOMETRY WORKSHEET

A RIGHT TRIANGLE TRIGONOMETRY WORKSHEET TYPICALLY CONTAINS SEVERAL SECTIONS, ALLOWING STUDENTS TO PRACTICE DIFFERENT SKILLS. HERE'S A BREAKDOWN OF THE USUAL COMPONENTS:

1. INTRODUCTION TO TRIGONOMETRIC RATIOS

- BRIEFLY EXPLAIN THE DEFINITIONS OF SINE, COSINE, AND TANGENT.
- PROVIDE A DIAGRAM OF A RIGHT TRIANGLE AND LABEL THE SIDES RELATIVE TO A GIVEN ANGLE.

2. PROBLEMS INVOLVING TRIGONOMETRIC RATIOS

THIS SECTION PRESENTS VARIOUS PROBLEMS WHERE STUDENTS CAN APPLY TRIGONOMETRIC RATIOS TO FIND MISSING SIDE LENGTHS OR ANGLES. PROBLEMS MAY INCLUDE:

- FINDING MISSING SIDES WHEN GIVEN AN ANGLE AND ONE SIDE.
- FINDING ANGLES WHEN GIVEN TWO SIDES.

3. REAL-WORLD APPLICATIONS

STUDENTS SHOULD UNDERSTAND HOW TRIGONOMETRY APPLIES TO REAL-LIFE SITUATIONS. THIS SECTION COULD INCLUDE:

- PROBLEMS INVOLVING HEIGHT AND DISTANCE, SUCH AS CALCULATING THE HEIGHT OF A TREE OR BUILDING USING A SHADOW.
- NAVIGATIONAL PROBLEMS WHERE ANGLES AND DISTANCES ARE ESSENTIAL.

4. ADVANCED TRIGONOMETRIC CONCEPTS

FOR MORE ADVANCED STUDENTS, WORKSHEETS MIGHT INCLUDE TOPICS LIKE:

- THE PYTHAGOREAN THEOREM, WHICH RELATES THE LENGTHS OF THE SIDES OF RIGHT TRIANGLES: $a^2 + b^2 = c^2$
- THE USE OF INVERSE TRIGONOMETRIC FUNCTIONS TO FIND ANGLES.

SAMPLE PROBLEMS FOR PRACTICE

HERE'S A SET OF SAMPLE PROBLEMS THAT COULD APPEAR ON A RIGHT TRIANGLE TRIGONOMETRY WORKSHEET:

PROBLEM SET 1: BASIC TRIGONOMETRIC RATIOS

1. IN A RIGHT TRIANGLE, IF ONE ANGLE MEASURES 30 DEGREES AND THE HYPOTENUSE IS 10 UNITS, FIND THE LENGTHS OF THE OPPOSITE AND ADJACENT SIDES.
- USE $\sin(30^\circ)$ AND $\cos(30^\circ)$.
2. A RIGHT TRIANGLE HAS AN OPPOSITE SIDE OF 5 UNITS AND AN ADJACENT SIDE OF 12 UNITS. CALCULATE THE ANGLE USING THE TANGENT FUNCTION.

PROBLEM SET 2: APPLICATION PROBLEMS

1. A LADDER LEANS AGAINST A WALL, FORMING A 75-DEGREE ANGLE WITH THE GROUND. IF THE FOOT OF THE LADDER IS 4 FEET FROM THE WALL, HOW TALL IS THE WALL?
- USE THE SINE FUNCTION TO FIND THE HEIGHT.
2. A PERSON IS STANDING 50 METERS AWAY FROM A TREE AND MEASURES A 45-DEGREE ANGLE OF ELEVATION TO THE TOP OF THE TREE. HOW TALL IS THE TREE?
- USE THE TANGENT FUNCTION TO FIND THE HEIGHT.

PROBLEM SET 3: ADVANCED CONCEPTS

1. GIVEN A RIGHT TRIANGLE WHERE ONE SIDE IS 6 UNITS, AND THE OTHER SIDE IS 8 UNITS, FIND THE LENGTH OF THE HYPOTENUSE USING THE PYTHAGOREAN THEOREM.
2. IF $\tan(\theta) = \frac{3}{4}$, FIND $\sin(\theta)$ AND $\cos(\theta)$ USING TRIGONOMETRIC IDENTITIES.

TIPS FOR COMPLETING A RIGHT TRIANGLE TRIGONOMETRY WORKSHEET

TO MAXIMIZE LEARNING AND EFFICIENCY WHILE COMPLETING A RIGHT TRIANGLE TRIGONOMETRY WORKSHEET, CONSIDER THE FOLLOWING TIPS:

- UNDERSTAND THE PROBLEM: READ THE PROBLEM CAREFULLY TO DETERMINE WHAT IS GIVEN AND WHAT NEEDS TO BE FOUND.
- DRAW A DIAGRAM: VISUALIZING THE PROBLEM CAN HELP CLARIFY RELATIONSHIPS BETWEEN THE SIDES AND ANGLES.
- USE TRIGONOMETRIC RATIOS: RECALL THE DEFINITIONS OF SINE, COSINE, AND TANGENT TO SET UP EQUATIONS.
- CHECK YOUR WORK: AFTER FINDING A SOLUTION, VERIFY THE CALCULATIONS AND ENSURE THAT THE ANSWER MAKES SENSE IN THE CONTEXT OF THE PROBLEM.

CONCLUSION

A RIGHT TRIANGLE TRIGONOMETRY WORKSHEET IS AN INVALUABLE RESOURCE FOR STUDENTS LEARNING THE PRINCIPLES OF TRIGONOMETRY. BY PRACTICING WITH VARIOUS PROBLEMS, STUDENTS CAN DEEPEN THEIR UNDERSTANDING OF HOW TO APPLY TRIGONOMETRIC RATIOS TO FIND UNKNOWN SIDES AND ANGLES IN RIGHT TRIANGLES. ADDITIONALLY, RECOGNIZING THE REAL-

WORLD APPLICATIONS OF THESE CONCEPTS CAN ENHANCE ENGAGEMENT AND APPRECIATION FOR THE SUBJECT.

AS STUDENTS WORK THROUGH PROBLEMS AND GAIN CONFIDENCE IN THEIR SKILLS, THEY WILL BE BETTER PREPARED FOR MORE ADVANCED TOPICS IN MATHEMATICS AND ITS APPLICATIONS IN SCIENCE, ENGINEERING, AND EVERYDAY LIFE. THROUGH CONSISTENT PRACTICE AND APPLICATION OF THE PRINCIPLES OUTLINED IN THIS ARTICLE, STUDENTS CAN ACHIEVE MASTERY IN RIGHT TRIANGLE TRIGONOMETRY.

FREQUENTLY ASKED QUESTIONS

WHAT IS THE PYTHAGOREAN THEOREM AND HOW IS IT USED IN RIGHT TRIANGLE TRIGONOMETRY?

THE PYTHAGOREAN THEOREM STATES THAT IN A RIGHT TRIANGLE, THE SQUARE OF THE LENGTH OF THE HYPOTENUSE IS EQUAL TO THE SUM OF THE SQUARES OF THE LENGTHS OF THE OTHER TWO SIDES. IT IS USED TO FIND THE LENGTH OF A SIDE WHEN THE LENGTHS OF THE OTHER TWO SIDES ARE KNOWN.

WHAT ARE THE PRIMARY TRIGONOMETRIC RATIOS FOR RIGHT TRIANGLES?

THE PRIMARY TRIGONOMETRIC RATIOS ARE SINE (SIN), COSINE (COS), AND TANGENT (TAN). FOR A RIGHT TRIANGLE, $\sin(\theta) = \text{OPPOSITE/HYPOTENUSE}$, $\cos(\theta) = \text{ADJACENT/HYPOTENUSE}$, AND $\tan(\theta) = \text{OPPOSITE/ADJACENT}$.

HOW CAN I FIND THE ANGLES OF A RIGHT TRIANGLE USING TRIGONOMETRIC FUNCTIONS?

YOU CAN FIND THE ANGLES USING INVERSE TRIGONOMETRIC FUNCTIONS. FOR EXAMPLE, IF YOU KNOW THE LENGTHS OF THE OPPOSITE AND ADJACENT SIDES, YOU CAN FIND THE ANGLE USING THE TANGENT FUNCTION: $\theta = \tan^{-1}(\text{OPPOSITE/ADJACENT})$.

WHAT IS THE SIGNIFICANCE OF THE 30-60-90 TRIANGLE IN RIGHT TRIANGLE TRIGONOMETRY?

THE 30-60-90 TRIANGLE HAS SPECIFIC RATIO PROPERTIES: THE LENGTHS OF THE SIDES OPPOSITE THE 30° , 60° , AND 90° ANGLES ARE IN THE RATIO 1: $\sqrt{3}$:2. THIS MAKES CALCULATIONS INVOLVING THESE TRIANGLES STRAIGHTFORWARD AND PREDICTABLE.

HOW DO I SOLVE FOR A MISSING SIDE IN A RIGHT TRIANGLE GIVEN ONE ANGLE AND ONE SIDE?

YOU CAN USE THE TRIGONOMETRIC RATIOS. IF YOU HAVE THE ANGLE AND THE LENGTH OF ONE SIDE, YOU CAN USE SINE, COSINE, OR TANGENT TO FIND THE LENGTH OF THE MISSING SIDE BY REARRANGING THE RATIOS ACCORDINGLY.

WHAT TYPES OF PROBLEMS CAN I EXPECT ON A RIGHT TRIANGLE TRIGONOMETRY WORKSHEET?

YOU CAN EXPECT PROBLEMS INVOLVING FINDING UNKNOWN SIDE LENGTHS OR ANGLES, APPLYING THE PYTHAGOREAN THEOREM, USING TRIGONOMETRIC RATIOS, AND SOLVING REAL-WORLD APPLICATIONS INVOLVING RIGHT TRIANGLES.

HOW CAN I VERIFY MY ANSWERS WHEN SOLVING RIGHT TRIANGLE PROBLEMS?

YOU CAN VERIFY YOUR ANSWERS BY CHECKING IF THE CALCULATED SIDE LENGTHS SATISFY THE PYTHAGOREAN THEOREM AND BY ENSURING THAT THE CALCULATED ANGLES ADD UP TO 90° WHEN COMBINED WITH THE RIGHT ANGLE.

Find other PDF article:

<https://soc.up.edu.ph/47-print/Book?ID=ECd73-8023&title=plotting-points-on-a-coordinate-grid-wor>

AX3000T 1.0.90 OpenWrt 24.10.0

OpenWrt 24.10.0 - First Stable Release - 6. February 2025
[OpenWrt Wiki] Xiaomi AX3000T

https://qos -

Apr 28, 2025 · TLS lzA:

Cudy TR3000 256MB -OPENWRT

Jun 3, 2025 ·

oes -PCDN

Jun 22, 2025 ·

2024X86 ()-

Oct 27, 2024 · X86 G7505 N1

[N1]-

Nov 6, 2024 · N1 W 1.

-Plus-

Jun 5, 2025 · 2.5G PS: PL

B866-S2-/adsl/cable

Oct 14, 2024 · B866-S2 HN8156XR

WIFI7 BE7Pro

Oct 14, 2024 · WIFI7 1000 BE7Pro BE7200Pro+ BE7Pro BE7200Pro+

Master right triangle trigonometry with our comprehensive worksheet! Perfect for students and educators. Download now and boost your skills. Learn more!

[Back to Home](#)