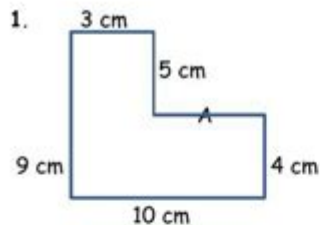


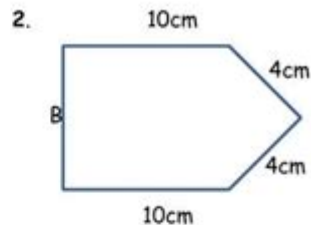
# Perimeter Worksheets With Missing Sides

The perimeter is given. Calculate the unknown side for each figure.



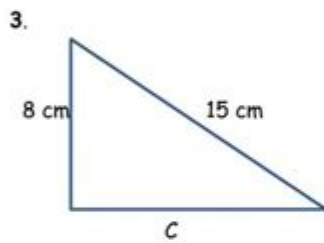
Perimeter = 38 cm

Side A = ..... cm



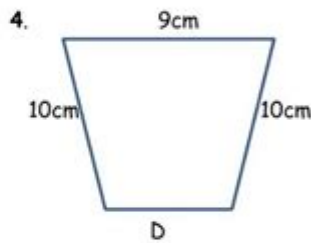
Perimeter = 39 cm

Side B = ..... Cm



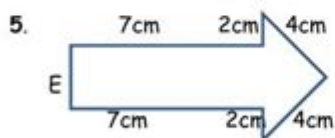
Perimeter = 35 cm

Side C = ..... cm



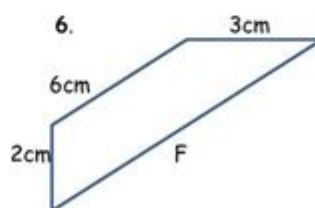
Perimeter = 38 cm

Side D = ..... cm



Perimeter 29 cm

Side E = ..... Cm



Perimeter = 25 cm

Side F = ..... cm

**Perimeter worksheets with missing sides** are essential educational tools that help students grasp fundamental concepts in geometry. These worksheets challenge learners to calculate the perimeter of various shapes, even when some side lengths are not provided. Understanding how to find missing side lengths is crucial for developing problem-solving skills and a solid foundation in math. In this article, we will explore the importance of perimeter worksheets, methods for solving problems with missing sides, and tips for

effective learning.

## Understanding Perimeter

Before diving into perimeter worksheets with missing sides, it's important to understand what perimeter is. The perimeter is the total distance around a two-dimensional shape. It can be calculated by adding the lengths of all the sides of the shape. For common geometric shapes, the formulas for calculating perimeter are as follows:

- **Rectangle:**  $P = 2(\text{length} + \text{width})$
- **Square:**  $P = 4(\text{side})$
- **Triangle:**  $P = \text{side1} + \text{side2} + \text{side3}$
- **Circle:**  $P \text{ (circumference)} = 2\pi r$  (where  $r$  is the radius)

Understanding these formulas provides a foundation for solving more complex problems involving missing side lengths.

## The Importance of Worksheets with Missing Sides

Worksheets that focus on finding missing sides are critical for several reasons:

### 1. Reinforcement of Concepts

These worksheets reinforce the concepts of perimeter and the relationships between the sides of various shapes. When students encounter missing side lengths, they must apply their knowledge of mathematical relationships and formulas, which deepens their understanding.

### 2. Development of Problem-Solving Skills

Working with missing sides encourages students to think critically and develop problem-solving skills. They learn to analyze information, identify what is known and what is unknown, and use logical reasoning to arrive at a solution.

### **3. Preparation for Advanced Topics**

Understanding how to calculate perimeter with missing sides lays the groundwork for more advanced topics in geometry, such as area, volume, and the Pythagorean theorem. Mastering these basic skills will prepare students for future mathematical challenges.

## **How to Solve Problems Involving Missing Sides**

When faced with a perimeter problem that includes missing sides, students can follow a systematic approach to find the solution. Here are some steps to guide them:

### **Step 1: Identify the Given Information**

Students should start by reading the problem carefully and noting what information is provided. This may include the perimeter, the lengths of some sides, or relationships between the sides.

### **Step 2: Write Down the Perimeter Formula**

Next, students should write the appropriate perimeter formula for the shape they are dealing with. This helps them understand how the missing sides relate to the overall perimeter.

### **Step 3: Set Up an Equation**

If the perimeter is known, students can set up an equation using the perimeter formula. For instance, if a rectangle has a perimeter of 30 units and one side length is known, they can express the other side in terms of the known side.

### **Step 4: Solve for the Missing Side**

Students can then solve the equation for the missing side length. This may involve basic algebraic manipulation, such as adding or subtracting values.

### **Step 5: Check the Solution**

Finally, it's crucial for students to verify their answers. They can do this by substituting the found side lengths back into the perimeter formula to ensure the calculated perimeter

is correct.

## Types of Shapes in Perimeter Worksheets

Perimeter worksheets can feature a variety of shapes, each presenting unique challenges. Here are some common shapes that may appear in these worksheets:

- **Rectangles:** Often involve finding one or both dimensions.
- **Squares:** Usually require knowledge of the side length and its relationship to perimeter.
- **Triangles:** May include problems where one side length is missing, and the other two are known.
- **Complex Shapes:** These may require combining knowledge of different shapes to find a total perimeter.

## Tips for Using Perimeter Worksheets Effectively

To maximize the learning experience with perimeter worksheets that include missing sides, consider the following tips:

### 1. Start with Simple Problems

Begin with basic shapes and gradually move to more complex problems. This progression helps build confidence and competence.

### 2. Encourage Group Work

Collaborative learning can enhance understanding. Encourage students to work in pairs or small groups to discuss problems and solutions.

### 3. Utilize Visual Aids

Using diagrams or drawings can help students visualize the shapes and better understand the relationships between sides.

## 4. Provide Real-Life Context

Integrate real-world applications of perimeter to make learning more relatable. For instance, calculating the perimeter of a garden or a fence can make the concept more meaningful.

## 5. Offer Varied Practice

Include a mix of standard problems and word problems on worksheets. This variety helps students apply their knowledge in different contexts.

## Conclusion

In summary, **perimeter worksheets with missing sides** are invaluable tools for helping students develop a strong understanding of geometry. By engaging with these worksheets, learners enhance their problem-solving abilities, reinforce mathematical concepts, and prepare for more advanced topics. With systematic approaches to solving perimeter problems and effective study tips, students can confidently tackle challenges and build a solid foundation in mathematics.

## Frequently Asked Questions

### What is a perimeter worksheet with missing sides?

A perimeter worksheet with missing sides is an educational resource that provides problems where some side lengths of geometric shapes are not given, and students must calculate these missing lengths to find the total perimeter.

### How do you calculate the perimeter if one side is missing?

To calculate the perimeter with a missing side, you can use the formula for the perimeter of the shape and rearrange it to solve for the unknown side. For example, for a rectangle, use the formula  $P = 2(\text{length} + \text{width})$  to find the missing length or width.

### What grade levels are perimeter worksheets with missing sides suitable for?

Perimeter worksheets with missing sides are typically suitable for elementary and middle school students, particularly those in grades 3 to 7, as they begin to learn about geometry and measurement.

## What types of shapes are commonly included in these worksheets?

Common shapes included in perimeter worksheets with missing sides are rectangles, squares, triangles, and sometimes irregular polygons, allowing students to practice calculating perimeter in various contexts.

## Are there any online resources available for perimeter worksheets with missing sides?

Yes, many educational websites offer free printable perimeter worksheets with missing sides, along with interactive online games and quizzes that help reinforce the concept for students.

## How can teachers effectively use perimeter worksheets with missing sides in the classroom?

Teachers can use perimeter worksheets with missing sides as part of a hands-on geometry lesson, encouraging students to work in pairs to solve problems, discuss their reasoning, and apply their understanding to real-world scenarios.

Find other PDF article:

<https://soc.up.edu.ph/54-tone/pdf?ID=TTQ55-1374&title=solar-energy-science-projects.pdf>

## Perimeter Worksheets With Missing Sides

Perimeter Worksheet | HiNative

Perimeter Worksheet Q&A Perimeter Worksheet 31 Worksheet

perimeter circumference ... - HiNative

perimeter circumference 3 HiNative " " ...

perimeter - ( ) ...

perimeter 2 HiNative " " ...

Periphery Perimeter ... - HiNative

Periphery Perimeter 3 HiNative " " ...

**Câu ví dụ, định nghĩa và cách sử dụng của "Perimeter" | HiNative**

A: Perimeter is a geometric term of the addition of all the sides of an object Around means that you are going around a circle or anything. Perimeter is a noun and around is an abverb.

## Đâu là sự khác biệt giữa "perimeter" và "circumference"

Đồng nghĩa với perimeter Circumference is the outside edge of something that is curved, e.g. "The circumference of a circle" Perimeter is the outside edge of a closed shape that isn't ...

### "Periphery" vs "Perimeter" | HiNative

Periphery'periphery' is the exterior or surrounding of something. "The old mansion is located on the periphery of the city". 'perimeter' defines the outline of a figure. "The gardener had to ...

### **What is the difference between "Periphery" and "Perimeter ...**

Synonym for Periphery 'periphery' is the exterior or surrounding of something. "The old mansion is located on the periphery of the city". 'perimeter' defines the outline of a figure. "The gardener ...

### "perimeter" vs "circumference" | HiNative

perimeterCircumference is the outside edge of something that is curved, e.g. "The circumference of a circle" Perimeter is the outside edge of a closed shape that isn't curved e.g. "The ...

### rim vs edge vs brim vs border ... - HiNative

rim - ring of basketball hoop or part of a wheel edge - farthest part of a surface or object example :edge of a cliff, edge of a blade brim - the outside ring of a hat or the top part of a cup example: ...

### **Perimeter | HiNative**

PerimeterQ&APerimeter31

### **perimeter vs circumference ... - HiNative**

perimetercircumf...3Hinative"perimeter"circumference ...

### **perimeter - ( ) ...**

perimeter2Hinative"perimeter" ...

### Periphery vs Perimeter | HiNative

PeripheryPerimeter3Hinative"periphery"perimeter ...

### Câu ví dụ, định nghĩa và cách sử dụng của "Perimeter" | HiNative

A: Perimeter is a geometric term of the addition of all the sides of an object Around means that you are going around a circle or anything. Perimeter is a noun and around is an abverb.

### **Đâu là sự khác biệt giữa "perimeter" và "circumference"**

Đồng nghĩa với perimeter Circumference is the outside edge of something that is curved, e.g. "The circumference of a circle" Perimeter is the outside edge of a closed shape that isn't ...

### "Periphery" vs "Perimeter" | HiNative

Periphery'periphery' is the exterior or surrounding of something. "The old mansion is located on the periphery of the city". 'perimeter' defines the outline of a figure. "The gardener had to ...

### **What is the difference between "Periphery" and "Perimeter ...**

Synonym for Periphery 'periphery' is the exterior or surrounding of something. "The old mansion is located on the periphery of the city". 'perimeter' defines the outline of a figure. "The gardener ...

## "perimeter" vs "circumference" Worksheets | HiNative

perimeterCircumference is the outside edge of something that is curved, e.g. "The circumference of a circle" Perimeter is the outside edge of a closed shape that isn't curved e.g. "The ...

rim edge brim border ... - HiNative

rim - ring of basketball hoop or part of a wheel edge - farthest part of a surface or object example :edge of a cliff, edge of a blade brim - the outside ring of a hat or the top part of a cup example: ...

Enhance your math skills with our perimeter worksheets with missing sides! Perfect for students and educators. Discover how to solve them today!

[Back to Home](#)