

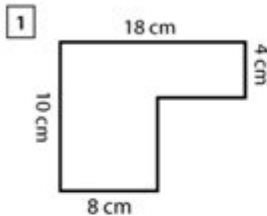
Perimeter Of Irregular Polygons Worksheet

Name : _____

Score : _____ Date : _____

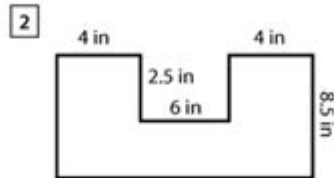


Finding Area and Perimeter of Irregular Polygons Worksheet



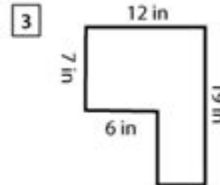
Area = _____

Perimeter = _____



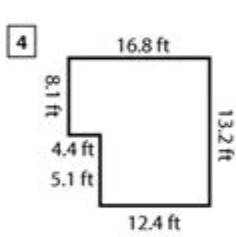
Area = _____

Perimeter = _____



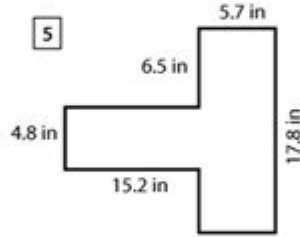
Area = _____

Perimeter = _____



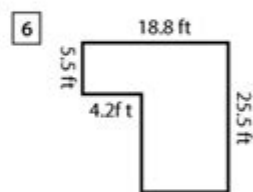
Area = _____

Perimeter = _____



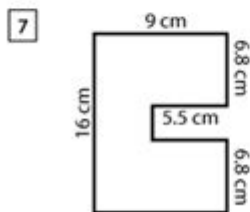
Area = _____

Perimeter = _____



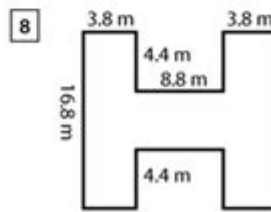
Area = _____

Perimeter = _____



Area = _____

Perimeter = _____



Area = _____

Perimeter = _____

Perimeter of irregular polygons worksheet is an essential educational tool designed to help students understand the concept of perimeter in geometrical shapes that do not have uniform sides or angles. Irregular polygons can come in various forms, such as pentagons, hexagons, or even more complex shapes. Understanding how to calculate the perimeter of these polygons is crucial for students, as it lays the groundwork for more advanced topics in geometry and real-world applications. This article will delve into the significance of learning about the perimeter of irregular polygons, provide various methods to calculate it, suggest activities, and present a sample worksheet that can be used in

classrooms or for self-study.

Understanding the Perimeter of Irregular Polygons

The term "perimeter" refers to the total distance around a two-dimensional shape. For irregular polygons, calculating the perimeter involves summing the lengths of all the sides, which can vary in size and shape. Unlike regular polygons, where formulas exist based on side length and the number of sides, the calculation for irregular polygons is more straightforward but requires careful measurement and addition.

Why Teach Perimeter of Irregular Polygons?

Teaching students about the perimeter of irregular polygons is crucial for several reasons:

1. **Real-World Applications:** Understanding perimeter is vital in numerous fields, including architecture, landscaping, and graphic design. For example, knowing the perimeter of a plot of land helps in planning and development.
2. **Foundation for Advanced Geometry:** Mastering perimeter calculations prepares students for more complex geometrical concepts, such as area, volume, and surface area.
3. **Critical Thinking Skills:** Working with irregular polygons encourages problem-solving and critical thinking, as students must visualize shapes and apply mathematical reasoning.
4. **Hands-On Learning:** Learning about irregular polygons can be engaging and interactive, allowing students to measure and create shapes, enhancing their understanding through practical application.

Calculating the Perimeter of Irregular Polygons

Calculating the perimeter of irregular polygons can be broken down into a few simple steps. Below are methods and approaches to help students understand how to find the perimeter effectively.

Step-by-Step Method

1. Identify the Shape: Begin by recognizing and naming the irregular polygon. This could be a pentagon, hexagon, or any other shape with varying side lengths.
2. Measure Each Side: Use a ruler or measuring tool to determine the length of each side. Ensure accurate measurements, as small errors can lead to incorrect perimeter calculations.
3. Record the Lengths: Write down the lengths of all sides. This can be done in a table format for clarity.
4. Add the Lengths Together: Sum the lengths of all the sides to find the total perimeter. The formula can be represented as:

$$\text{Perimeter} = \text{Side}_1 + \text{Side}_2 + \text{Side}_3 + \dots + \text{Side}_n$$

Example Calculation

Consider an irregular polygon with the following side lengths:

- Side A: 3 cm
- Side B: 5 cm

- Side C: 4 cm
- Side D: 6 cm

To find the perimeter, we would perform the following calculation:

$$\text{Perimeter} = 3 \text{ cm} + 5 \text{ cm} + 4 \text{ cm} + 6 \text{ cm} = 18 \text{ cm}$$

Creating a Perimeter of Irregular Polygons Worksheet

A worksheet focused on the perimeter of irregular polygons can include various exercises that challenge students and reinforce their understanding. Here are some ideas on how to structure such a worksheet:

Worksheet Structure

1. Title: Clearly label the worksheet as "Perimeter of Irregular Polygons."
2. Instructions: Provide clear instructions at the beginning, such as:
 - Measure each side of the irregular polygons below.
 - Record the lengths and calculate the perimeter.
3. Shapes to Measure: Include various irregular polygons with different side lengths. These can be drawn to scale or provided with dimensions.
4. Table for Measurements: Create a table for students to fill in their measurements. For example:

Side	Length (cm)
-----	-----

Side A	
Side B	
Side C	
Side D	
Perimeter	

5. Calculation Section: Have a section where students show their work for calculating the perimeter, including the addition of side lengths.

6. Challenge Questions: Include a few higher-order thinking questions, such as:

- If one side of the polygon is increased by 2 cm, how does this affect the perimeter?
- Create your own irregular polygon and calculate its perimeter.

Sample Problems

Here are some sample problems that could be included in the worksheet:

1. Polygon A: Sides measuring 4 cm, 7 cm, 2 cm, and 5 cm. What is the perimeter?
2. Polygon B: An irregular pentagon with side lengths 3 cm, 6 cm, 9 cm, 4 cm, and 8 cm. Find the perimeter.
3. Polygon C: A shape where the sides are labeled A (5 cm), B (3 cm), C (7 cm), D (1 cm), and E (4 cm). Calculate the perimeter.

Engaging Activities Related to Irregular Polygons

In addition to worksheets, engaging students in hands-on activities can deepen their understanding of perimeter. Here are a few creative ideas:

1. Scavenger Hunt: Organize a scavenger hunt where students must measure the perimeter of

irregular objects around the classroom or schoolyard.

2. Art Projects: Have students create their own irregular polygons using string or craft materials, measure the sides, and calculate the perimeter.

3. Group Challenges: Divide students into groups and have them create a large irregular polygon using tape on the classroom floor, measuring each side as they go. They can then calculate the perimeter together.

4. Technology Integration: Use geometry software or applications where students can create and manipulate irregular polygons digitally, allowing them to explore the concept of perimeter interactively.

Conclusion

In conclusion, a perimeter of irregular polygons worksheet is a valuable resource for educating students on an essential geometry concept. By breaking down the steps to calculate perimeter, providing structured worksheets, and incorporating engaging activities, educators can foster a comprehensive understanding of irregular polygons. This knowledge not only helps students excel in their mathematics studies but also equips them with practical skills applicable in everyday situations. As students become proficient in measuring and calculating the perimeter of irregular polygons, they build a solid foundation for further exploration in geometry and mathematics.

Frequently Asked Questions

What is the perimeter of an irregular polygon?

The perimeter of an irregular polygon is the total distance around the shape, calculated by adding the lengths of all its sides.

How do you calculate the perimeter of an irregular polygon if the side lengths are given?

To calculate the perimeter, simply sum up the lengths of all the sides of the polygon. For example, if the sides are 5 cm, 7 cm, 3 cm, and 6 cm, the perimeter is $5 + 7 + 3 + 6 = 21$ cm.

What tools do I need to complete a perimeter of irregular polygons worksheet?

You will need a ruler to measure side lengths accurately, a calculator for summing the lengths, and possibly graph paper to sketch the polygons.

Are there any specific strategies for solving perimeter problems on worksheets involving irregular polygons?

Yes, a good strategy is to label each side with its length, organize the measurements, and double-check your addition to ensure accuracy.

Can you provide an example of an irregular polygon for a worksheet?

An example of an irregular polygon is a shape with sides measuring 4 cm, 6 cm, 8 cm, and 2 cm. The perimeter would be $4 + 6 + 8 + 2 = 20$ cm.

What common mistakes should I avoid when calculating the perimeter of irregular polygons?

Common mistakes include forgetting to include all sides, miscalculating the length of one or more sides, and errors in addition. Always double-check your work for accuracy.

Find other PDF article:

<https://soc.up.edu.ph/60-flick/Book?trackid=Ojl23-2627&title=the-man-in-the-white-suit.pdf>

Perimeter Of Irregular Polygons Worksheet

Perimeter | HiNative

Perimeter Q&A Perimeter 31

perimeter circumference ... - HiNative

perimeter circumf... 3 Hinative " " ...

perimeter - () ...

perimeter 2 Hinative " " ...

Periphery Perimeter ... - HiNative

Periphery Perimeter 3 Hinative " " ...

Câu ví dụ, định nghĩa và cách sử dụng của "Perimeter" | HiNative

A: Perimeter is a geometric term of the addition of all the sides of an object Around means that you are going around a circle or anything. Perimeter is a noun and around is an abverb.

Đâu là sự khác biệt giữa "perimeter" và "circumference"

Đồng nghĩa với perimeter Circumference is the outside edge of something that is curved, e.g. "The circumference of a circle" Perimeter is the outside edge of a closed shape that isn't ...

"Periphery" "Perimeter" | HiNative

Periphery'periphery' is the exterior or surrounding of something. "The old mansion is located on the periphery of the city". 'perimeter' defines the outline of a figure. "The gardener had to ...

What is the difference between "Periphery" and "Perimeter ...

Synonym for Periphery 'periphery' is the exterior or surrounding of something. "The old mansion is located on the periphery of the city". 'perimeter' defines the outline of a figure. "The gardener ...

"perimeter" "circumference" | HiNative

perimeterCircumference is the outside edge of something that is curved, e.g. "The circumference of a circle" Perimeter is the outside edge of a closed shape that isn't curved e.g. "The ...

rim edge brim border ... - HiNative

rim - ring of basketball hoop or part of a wheel edge - farthest part of a surface or object example :edge of a cliff, edge of a blade brim - the outside ring of a hat or the top part of a cup ...

Perimeter | HiNative

Perimeter Q&A Perimeter 31

perimeter circumference ... - HiNative

perimeter circumf... 3 Hinative " " ...

perimeter (noun) - the distance around something ...

perimeter (noun) - the distance around something. **HiNative** "The perimeter of the city is 100 miles." ...

Periphery (noun) - the outer edge or boundary of something ... **HiNative**

Periphery (noun) - the outer edge or boundary of something. **HiNative** "The old mansion is located on the periphery of the city." ...

Câu ví dụ, định nghĩa và cách sử dụng của "Perimeter" | HiNative

A: Perimeter is a geometric term of the addition of all the sides of an object. Around means that you are going around a circle or anything. Perimeter is a noun and around is an abverb.

Đâu là sự khác biệt giữa "perimeter" và "circumference"

Đồng nghĩa với perimeter Circumference is the outside edge of something that is curved, e.g. "The circumference of a circle" Perimeter is the outside edge of a closed shape that isn't ...

"Periphery" (noun) - the outer edge or boundary of something | **HiNative**

Periphery 'periphery' is the exterior or surrounding of something. "The old mansion is located on the periphery of the city". 'perimeter' defines the outline of a figure. "The gardener had to ...

What is the difference between "Periphery" and "Perimeter" ...

Synonym for Periphery 'periphery' is the exterior or surrounding of something. "The old mansion is located on the periphery of the city". 'perimeter' defines the outline of a figure. "The gardener ...

"perimeter" (noun) - the distance around something | HiNative

perimeter Circumference is the outside edge of something that is curved, e.g. "The circumference of a circle" Perimeter is the outside edge of a closed shape that isn't curved e.g. "The ...

rim (noun) - the outer edge or boundary of something ... **HiNative**

rim - ring of basketball hoop or part of a wheel edge - farthest part of a surface or object example :edge of a cliff, edge of a blade brim - the outside ring of a hat or the top part of a cup ...

Enhance your geometry skills with our perimeter of irregular polygons worksheet. Perfect for practice and mastery! Learn more and boost your confidence today!

[Back to Home](#)