



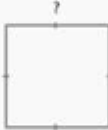
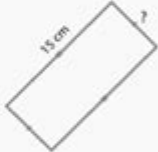





# Perimeter With Missing Sides Worksheet

**Unknown Side**

Name: \_\_\_\_\_ Class: \_\_\_\_\_

Find the length of the unknown sides given the perimeters of the following figures.

 Perimeter: 20 cm length ? : _____	 Perimeter: 32 cm length ? : _____	 Perimeter: 40 cm length ? : _____
 Perimeter: 28 cm length ? : _____	 Perimeter: 48 cm length ? : _____	 Perimeter: 42 cm length ? : _____
 Perimeter: 30 cm length ? : _____	 Perimeter: 20 cm length ? : _____	 Perimeter: 16 cm length ? : _____

copyright: [www.mathinenglish.com](http://www.mathinenglish.com)

## Perimeter with Missing Sides Worksheet

Understanding the concept of perimeter is essential in geometry, as it is one of the foundational elements that students encounter. A perimeter with missing sides worksheet is an effective educational tool designed to help students grasp the concept of perimeter, especially when some side lengths are unknown. This article delves into the importance of such worksheets, how to approach problems involving missing sides, and various strategies for teaching and learning about perimeter.

## What is Perimeter?

Perimeter refers to the total distance around a two-dimensional shape. It is calculated by summing the lengths of all sides of the shape. Different shapes

have different formulas for calculating perimeter:

- Rectangle:  $P = 2(\text{length} + \text{width})$
- Square:  $P = 4 \times \text{side}$
- Triangle:  $P = \text{side1} + \text{side2} + \text{side3}$
- Circle (Circumference):  $C = 2\pi r$  (where  $r$  is the radius)

Understanding how to find the perimeter is crucial not just in mathematics, but in real-life applications such as construction, landscaping, and creating enclosures.

## **Importance of Worksheets in Learning Geometry**

Worksheets serve as an essential tool in reinforcing concepts learned in the classroom. They provide students with the opportunity to practice independently, identify areas where they may struggle, and develop problem-solving skills. Here are some specific benefits of using worksheets focused on perimeter:

1. Reinforcement of Concepts: Worksheets provide a hands-on approach to applying theoretical concepts.
2. Self-Paced Learning: Students can work through problems at their own pace, allowing for better understanding.
3. Error Identification: They can highlight specific areas where students may have misconceptions or difficulties.
4. Variety of Problems: Worksheets often include various problem types, which can help students develop a more comprehensive understanding of the topic.

## **Components of a Perimeter with Missing Sides Worksheet**

A well-designed perimeter with missing sides worksheet typically contains several components to facilitate learning. Here are some common elements:

### **1. Clear Instructions**

Each worksheet should begin with clear and concise instructions outlining what the student is expected to do. For example, "Calculate the perimeter of each shape, filling in the missing side lengths where necessary."

### **2. Visual Aids**

Including diagrams or illustrations of shapes can enhance understanding. Shapes should be labeled, and any missing dimensions should be clearly indicated.

### 3. Varied Problem Types

The worksheet should include a mix of problems, such as:

- Shapes with one missing side
- Shapes with two missing sides
- Real-world applications, such as finding the perimeter of a room or a garden

### 4. Space for Calculations

Providing ample space for students to show their work is crucial. This encourages them to think critically about each step in their calculations.

## Strategies for Solving Problems with Missing Sides

When faced with problems involving missing sides, students can employ various strategies to find the perimeter. Here are some effective methods:

### 1. Using Known Values

Often, students will have at least one complete dimension in a shape. They can use this known value to deduce the missing sides. For instance, in a rectangle, if the length is known, the width can often be calculated if the perimeter is provided.

### 2. Setting Up Equations

In cases where more than one side is missing, students can set up algebraic equations based on the known perimeter. For example, if the perimeter of a rectangle is 30 units, and one side is represented by 'x', the equation can be formulated as:

$$P = 2(x + \text{width}) = 30$$

Solving for 'x' will reveal the missing side.

### 3. Drawing Diagrams

Encouraging students to draw diagrams can help visualize the problem. This is particularly useful for complex shapes or when calculating areas as well as perimeters.

## 4. Using Properties of Shapes

Students should be familiar with the properties of various shapes. For example, in a rectangle, opposite sides are equal. This knowledge allows students to easily find missing dimensions.

### Examples of Problems from a Perimeter with Missing Sides Worksheet

To illustrate the effectiveness of a perimeter with missing sides worksheet, here are a few sample problems that could appear on such a worksheet:

#### Example 1: Rectangle with One Missing Side

Problem: A rectangle has a length of 8 cm and a width that is missing. If the perimeter is 28 cm, what is the width?

Solution:

- Use the perimeter formula:  $P = 2(\text{length} + \text{width})$
- Plug in the known values:  $28 = 2(8 + \text{width})$
- Solve for width:
- $28 = 16 + 2(\text{width})$
- $28 - 16 = 2(\text{width})$
- $12 = 2(\text{width})$
- $\text{width} = 6 \text{ cm}$

#### Example 2: Triangle with Two Missing Sides

Problem: A triangle has one side measuring 5 cm, and the perimeter is 20 cm. If one side is represented as 'x', what are the two missing sides if they are equal?

Solution:

- Set up the equation:  $5 + x + x = 20$
- Combine like terms:  $5 + 2x = 20$
- Solve for x:
- $2x = 20 - 5$
- $2x = 15$
- $x = 7.5 \text{ cm}$
- The two missing sides are each 7.5 cm.

#### Example 3: Real-World Application

Problem: A rectangular garden is 10 meters long. The total perimeter of the garden is 40 meters. What is the width of the garden?

Solution:

- Use the perimeter formula:  $P = 2(\text{length} + \text{width})$
- Plug in the known values:  $40 = 2(10 + \text{width})$

- Solve for width:
- $40 = 20 + 2(\text{width})$
- $40 - 20 = 2(\text{width})$
- $20 = 2(\text{width})$
- $\text{width} = 10 \text{ meters}$

## Conclusion

In conclusion, a perimeter with missing sides worksheet is an invaluable resource for reinforcing and enhancing students' understanding of perimeter in geometry. By providing clear instructions, varied problems, and space for calculations, these worksheets can effectively support learning. With the right strategies and practice, students will become adept at calculating perimeter, regardless of whether all sides are known. Emphasizing the importance of understanding shapes and their properties will not only benefit students academically but will also prepare them for real-world applications of mathematics.

## Frequently Asked Questions

### **What is the formula for calculating the perimeter of a rectangle when one side is missing?**

The perimeter of a rectangle can be calculated using the formula  $P = 2(l + w)$ , where  $l$  is the length and  $w$  is the width. If one side is missing, you can rearrange the formula to find the missing side.

### **How can I find the perimeter if two sides of a triangle are given but the third side is missing?**

To find the perimeter of a triangle with two sides known, you can use the triangle inequality theorem to estimate the range for the missing side, then use  $P = a + b + c$  to find the perimeter once the third side is determined.

### **What strategies can I use to teach students how to work with missing sides in perimeter problems?**

Use visual aids, such as diagrams, and engage students in hands-on activities like measuring objects. Encourage them to use variables for missing sides and create equations to solve for the perimeter.

### **What type of shapes are commonly included in perimeter worksheets with missing sides?**

Common shapes include rectangles, squares, triangles, and irregular polygons, often requiring students to apply different formulas for perimeter.

### **Are there specific keywords to look for in perimeter problems involving missing sides?**

Keywords include 'perimeter', 'missing length', 'total distance around', and 'add the sides'. These phrases help indicate what the problem is asking.

## How can I check my answers when calculating perimeter with missing sides?

You can verify your answers by substituting the found values back into the perimeter formula and ensuring that the total matches the given or calculated perimeter.

## What resources are available for creating perimeter worksheets with missing sides?

Online platforms like Teachers Pay Teachers, educational websites, and math software offer customizable worksheet templates and pre-made resources.

## How do you handle perimeter problems with missing sides in real-world contexts?

Apply perimeter concepts to real-world problems, such as fencing a yard or framing a picture, where students estimate or measure dimensions and calculate the required perimeter.

## What common mistakes do students make when solving perimeter problems with missing sides?

Common mistakes include mislabeling sides, forgetting to add all sides together, and incorrect application of perimeter formulas.

## How can technology assist in learning about perimeter with missing sides?

Technology can assist through interactive math apps, online calculators, and simulation tools that allow students to visualize and manipulate shapes to understand perimeter calculations better.

Find other PDF article:

<https://soc.up.edu.ph/24-mark/Book?dataid=YRN02-4853&title=ge-jgb735spss-installation-manual.pdf>

## Perimeter With Missing Sides Worksheet

Perimeter | HiNative

Perimeter Q&A Perimeter 31

perimeter circumference ... - HiNative

perimeter circumf... 3 Hinative " " ...

perimeter - ( ) ...

perimeter 2 Hinative " " ...

### Periphery Perimeter ... - HiNative

Periphery Perimeter 3 Hinative " " ...

### Câu ví dụ, định nghĩa và cách sử dụng của "Perimeter" | HiNative

A: Perimeter is a geometric term of the addition of all the sides of an object Around means that you are going around a circle or anything. Perimeter is a noun and around is an abverb.

Đâu là sự khác biệt giữa "perimeter" và "circumference"

Đồng nghĩa với perimeter Circumference is the outside edge of something that is curved, e.g. "The circumference of a circle" Perimeter is the outside edge of a closed shape that isn't ...

### "Periphery" Perimeter | HiNative

Periphery'periphery' is the exterior or surrounding of something. "The old mansion is located on the periphery of the city". 'perimeter' defines the outline of a figure. "The gardener had to ...

### What is the difference between "Periphery" and "Perimeter ...

Synonym for Periphery 'periphery' is the exterior or surrounding of something. "The old mansion is located on the periphery of the city". 'perimeter' defines the outline of a figure. "The gardener ...

### "perimeter" circumference | HiNative

perimeterCircumference is the outside edge of something that is curved, e.g. "The circumference of a circle" Perimeter is the outside edge of a closed shape that isn't curved e.g. "The ...

### rim edge brim border ... - HiNative

rim - ring of basketball hoop or part of a wheel edge - farthest part of a surface or object example :edge of a cliff, edge of a blade brim - the outside ring of a hat or the top part of a cup ...

### Perimeter | HiNative

Perimeter Q&A Perimeter 31 ...

### perimeter circumference ... - HiNative

perimetercircumf... 3 Hinative " " ...

### perimeter - ( ) ...

perimeter 2 Hinative " " ...

### Periphery Perimeter ... - HiNative

Periphery Perimeter 3 Hinative " " ...

### Câu ví dụ, định nghĩa và cách sử dụng của "Perimeter" | HiNative

A: Perimeter is a geometric term of the addition of all the sides of an object Around means that you are going around a circle or anything. Perimeter is a noun and around is an abverb.

Đâu là sự khác biệt giữa "perimeter" và "circumference"

Đồng nghĩa với perimeter Circumference is the outside edge of something that is curved, e.g. "The circumference of a circle" Perimeter is the outside edge of a closed shape that isn't curved e.g. "The perimeter of the square." "The room's perimeter." |@sidney: happy to help!! ☺

**"Periphery" ☐ "Perimeter" ☐☐☐☐☐☐☐ | HiNative**

Periphery'periphery' is the exterior or surrounding of something. "The old mansion is located on the periphery of the city". 'perimeter' defines the outline of a figure. "The gardener had to measure the perimeter of the garden to buy the right amount of fencing"☐☐☐☐

What is the difference between "Periphery" and "Perimeter ...

Synonym for Periphery 'periphery' is the exterior or surrounding of something. "The old mansion is located on the periphery of the city". 'perimeter' defines the outline of a figure. "The gardener had to measure the perimeter of the garden to buy the right amount of fencing"

*"perimeter" ☐ "circumference" ☐☐☐☐☐☐☐ | HiNative*

perimeterCircumference is the outside edge of something that is curved, e.g. "The circumference of a circle" Perimeter is the outside edge of a closed shape that isn't curved e.g. "The perimeter of the square." "The room's perimeter." |@sidney: happy to help!! ☐☐☐☐

☐rim☐ ☐☐edge☐☐☐brim☐☐☐border ... - HiNative

rim - ring of basketball hoop or part of a wheel edge - farthest part of a surface or object example :edge of a cliff, edge of a blade brim - the outside ring of a hat or the top part of a cup example: the cup was filled to the brim. border - the perimeter of an object or place where countries are separated example: border of a picture, border ...

Unlock your math skills with our 'perimeter with missing sides worksheet.' Perfect for students! Learn more and enhance your understanding today.

[Back to Home](#)