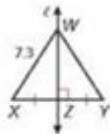


Perpendicular Bisector Worksheet With Answers

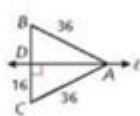
Perpendicular Bisectors:

Examples:

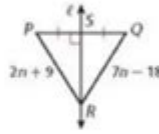
1) $YW =$ _____



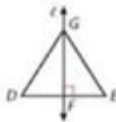
2) $BC =$ _____



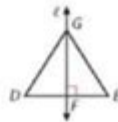
3) $PR =$ _____



4) Given that line l is the perpendicular bisector of DE and $EG = 14.6$, then $DG =$ _____



5) Given that $DE = 20.8$, $DG = 36.4$, and E $EG = 36.4$, then $EF =$ _____



6)

$XS =$ _____

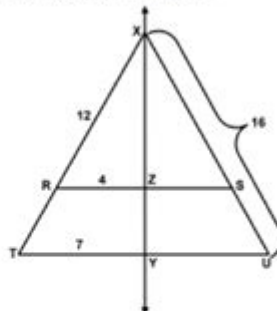
$XT =$ _____

$TU =$ _____

$ZS =$ _____

$TR =$ _____

\overline{XY} is a perpendicular bisector of \overline{RS} and \overline{TU} .



Angle Bisectors:

Perpendicular bisector worksheet with answers is an essential resource for students and educators who wish to deepen their understanding of geometry, specifically in the study of perpendicular bisectors. A perpendicular bisector is a line that divides a segment into two equal parts at a 90-degree angle. This concept plays a crucial role in various geometric constructions and proofs. In this article, we will explore the concept of perpendicular bisectors, provide a comprehensive worksheet, and offer solutions to the exercises to reinforce learning.

Understanding Perpendicular Bisectors

Definition

A perpendicular bisector is defined as a line that is perpendicular to a segment at its midpoint. In simpler terms, it not only splits the segment into two equal lengths but also intersects it at a right angle.

Properties of Perpendicular Bisectors

The perpendicular bisector has several important properties:

1. Equidistance: Any point located on the perpendicular bisector of a segment is equidistant from the endpoints of that segment.
2. Construction: It can be constructed using a compass and straightedge by drawing two arcs of equal radius from each endpoint and connecting the intersection points.
3. Application: Perpendicular bisectors are often used in triangle constructions, such as finding the circumcenter, which is the point equidistant from all three vertices of a triangle.

Worksheets on Perpendicular Bisectors

Worksheets are an effective way to practice and reinforce the concept of perpendicular bisectors. Below is a sample worksheet designed for students to apply their knowledge.

Worksheet: Perpendicular Bisectors

Instructions: For each problem, either draw the perpendicular bisector of the given line segment or answer the questions based on the properties of perpendicular bisectors.

1. Problem 1: Given points A(2, 3) and B(6, 7), find the coordinates of the midpoint M and the equation of the perpendicular bisector.
2. Problem 2: Draw the segment AB where A(1, 1) and B(5, 5). Then, construct the perpendicular bisector of segment AB.
3. Problem 3: Given the line segment with endpoints C(-3, 4) and D(1, 2), calculate the slope of CD, the slope of the perpendicular bisector, and write its equation.
4. Problem 4: True or False: The point (3, 4) lies on the perpendicular bisector of the segment joining A(2, 2) and B(4, 6). Show your work.
5. Problem 5: If the perpendicular bisector of a segment has the equation $y = -2x + 8$, what are the coordinates of the points on the original segment?

Additional Practice Problems

6. Problem 6: Find the length of the segment EF where E(2, -1) and F(4, 3). Also, find the coordinates of the midpoint and the equation of the perpendicular bisector.
7. Problem 7: A triangle has vertices at G(0, 0), H(4, 0), and I(2, 3). Determine the equations of the perpendicular bisectors of sides GH and GI.
8. Problem 8: If a perpendicular bisector of a segment passes through the point (2, 5) and is vertical, determine the endpoints of the segment.
9. Problem 9: Describe a real-world scenario where the concept of perpendicular bisectors could apply, and illustrate how it would be useful.
10. Problem 10: Show that the intersection of the perpendicular bisectors of a triangle is the circumcenter by using any triangle you choose.

Answers to the Worksheet

Here are the answers to the problems presented in the worksheet above.

Solutions

1. Problem 1:

- Midpoint $M = \left(\frac{2 + 6}{2}, \frac{3 + 7}{2}\right) = (4, 5)$
- Slope of AB = $\frac{7 - 3}{6 - 2} = 1$
- Slope of the perpendicular bisector = (-1) (negative reciprocal)
- Equation: Using point-slope form $(y - 5 = -1(x - 4))$ simplifies to $(y = -x + 9)$.

2. Problem 2:

- Draw the segment connecting A(1, 1) and B(5, 5).
- Midpoint $M = (3, 3)$
- The slope of AB = 1, so the slope of the perpendicular bisector = -1. Its equation is $(y - 3 = -1(x - 3))$ or $(y = -x + 6)$.

3. Problem 3:

- Slope of CD = $\frac{2 - 4}{1 + 3} = -\frac{1}{2}$
- Slope of the perpendicular bisector = 2
- Midpoint: $(M = \left(\frac{-3 + 1}{2}, \frac{4 + 2}{2}\right) = (-1, 3))$
- Equation: Using point-slope form gives $(y - 3 = 2(x + 1))$ which simplifies to $(y = 2x + 5)$.

4. Problem 4:

- Calculate the distances from (3, 4) to both A(2, 2) and B(4, 6).
- Distance to A: $(\sqrt{(3-2)^2 + (4-2)^2} = \sqrt{1 + 4} = \sqrt{5})$
- Distance to B: $(\sqrt{(3-4)^2 + (4-6)^2} = \sqrt{1 + 4} = \sqrt{5})$
- True, (3, 4) is on the perpendicular bisector.

5. Problem 5:

- The equation can be derived by finding the midpoint and looking for points that satisfy the line equation. The segment could vary based on the perpendicular distance from the bisector.

6. Problem 6:

- Length of EF = $\sqrt{(4 - 2)^2 + (3 + 1)^2} = \sqrt{4 + 16} = \sqrt{20} = 2\sqrt{5}$
- Midpoint: $M = (3, 1)$ and the perpendicular bisector equation can be derived similarly as above.

7. Problem 7:

- For GH, midpoint is (2,0) and slope is undefined; thus, the perpendicular bisector is $(x = 2)$.
- For GI, midpoint (2, 1.5); slope = $-\frac{3}{2}$; the equation will be derived accordingly.

8. Problem 8:

- Vertical line through (2, 5) implies the original segment is horizontal; thus, endpoints could be (x, 5) for any x.

9. Problem 9:

- A practical application might involve GPS systems where the intersection of bisectors determines optimal locations for towers.

10. Problem 10:

- By constructing a triangle and finding the intersection of the bisectors, students can visually verify the circumcenter property.

Conclusion

A perpendicular bisector worksheet with answers serves as a valuable tool for students learning geometry. By engaging with the problems and exploring the solutions, students can better understand the properties and applications of perpendicular bisectors. Mastery of this concept will not only enhance their geometric skills but also contribute to their overall mathematical proficiency, preparing them for more advanced topics in mathematics.

Frequently Asked Questions

What is a perpendicular bisector?

A perpendicular bisector is a line that divides a line segment into two equal parts at a 90-degree angle.

How do you find the perpendicular bisector of a line segment?

To find the perpendicular bisector, first determine the midpoint of the line segment, then use the negative reciprocal of the slope of the segment to find the slope of the bisector.

What is included in a perpendicular bisector worksheet?

A perpendicular bisector worksheet typically includes problems that require students to find the midpoint, determine slopes, and write equations for perpendicular bisectors.

Why is it important to learn about perpendicular bisectors?

Understanding perpendicular bisectors is essential in geometry as they play a key role in constructing geometric figures, solving problems involving triangles, and establishing congruence.

Can you provide an example problem for a perpendicular bisector worksheet?

Sure! For example, find the perpendicular bisector of the line segment with endpoints A(2, 3) and B(4, 7).

What skills does a perpendicular bisector worksheet help develop?

It helps develop skills in geometry, including understanding coordinates, slopes, midpoints, and writing equations of lines.

Where can I find answers for the problems in a perpendicular bisector worksheet?

Answers for perpendicular bisector worksheets can often be found at the end of the worksheet, in accompanying teacher's guides, or through educational resources online.

Find other PDF article:

<https://soc.up.edu.ph/42-scope/Book?dataid=vuX81-9536&title=my-time-at-sandroek-gift-guide.pdf>

Perpendicular Bisector Worksheet With Answers

perpendicular to vertical to ...

vertical perpendicular to the fiber orientation vertical rightangle ...

Vertical,perpendicular... - Yahoo!

Oct 22, 2014 · Vertical,perpendicular perpendicular vertical rightangle ...

Yes, PM Yes, Minister Sir Humphrey

The identity of the Official whose alleged responsibility for this hypothetical oversight has been the subject of recent discussion, is NOT shrouded in quite such impenetrable obscurity as certain ...

Perpendicular - 垂直

Perpendicular Magnetic Recording (PMR) is a type of hard disk drive (HDD) technology. It uses a perpendicular magnetic recording (PMR) method to store data. The data is stored in a perpendicular orientation, which allows for higher data density and better performance. LMR is a type of hard disk drive (HDD) technology. It uses a longitudinal magnetic recording (LMR) method to store data. The data is stored in a longitudinal orientation, which allows for higher data density and better performance. ...

19? - 垂直

11. Each cell of the divide is double of that ...

CMR/SMR - 垂直

Dec 14, 2024 · PMR Perpendicular Magnetic Recording is a type of hard disk drive (HDD) technology. It uses a perpendicular magnetic recording (PMR) method to store data. The data is stored in a perpendicular orientation, which allows for higher data density and better performance. LMR is a type of hard disk drive (HDD) technology. It uses a longitudinal magnetic recording (LMR) method to store data. The data is stored in a longitudinal orientation, which allows for higher data density and better performance. 5400 ...

Perpendicular - 垂直

Apr 30, 2017 · Perpendicular is a type of hard disk drive (HDD) technology. It uses a perpendicular magnetic recording (PMR) method to store data. The data is stored in a perpendicular orientation, which allows for higher data density and better performance. LMR is a type of hard disk drive (HDD) technology. It uses a longitudinal magnetic recording (LMR) method to store data. The data is stored in a longitudinal orientation, which allows for higher data density and better performance. ...

ST3000DM007 ST3000DM008 - 垂直

985 211 ST3000DM008 7200 ...

Orthogonal matrix Orthonormal matrix - 垂直

Jan 15, 2019 · orthogonal matrix perpendicular orthonormal matrix norm 1

Virtual Load Norm.

Jul 30, 2021 · Virtual Load Normal Load Perpendicular Load ...

perpendicular to vertical to ...

vertical perpendicular to the fiber orientation vertical ...

Vertical, perpendicular... - Yahoo!

Oct 22, 2014 · Vertical, perpendicular perpendicular vertical rightangle ...

Yes, PM Yes, Minister Sir Humphrey

The identity of the Official whose alleged responsibility for this hypothetical oversight has been the subject of recent discussion, is NOT shrouded in quite such impenetrable obscurity as certain ...

Perpendicular - 垂直

Perpendicular Magnetic Recording (PMR) is a type of hard disk drive (HDD) technology. It uses a perpendicular magnetic recording (PMR) method to store data. The data is stored in a perpendicular orientation, which allows for higher data density and better performance. LMR is a type of hard disk drive (HDD) technology. It uses a longitudinal magnetic recording (LMR) method to store data. The data is stored in a longitudinal orientation, which allows for higher data density and better performance. ...

19? - 垂直

11. Each cell of the divide is double of that ...

CMR/SMR - 垂直

Dec 14, 2024 · PMR Perpendicular Magnetic Recording is a type of hard disk drive (HDD) technology. It uses a perpendicular magnetic recording (PMR) method to store data. The data is stored in a perpendicular orientation, which allows for higher data density and better performance. LMR is a type of hard disk drive (HDD) technology. It uses a longitudinal magnetic recording (LMR) method to store data. The data is stored in a longitudinal orientation, which allows for higher data density and better performance. 5400 ...

Orthogonal matrix - 1

Apr 30, 2017 · Orthogonal matrix is a square matrix whose columns and rows are orthonormal vectors. The product of an orthogonal matrix and its transpose is the identity matrix. ...

ST3000DM007 ST3000DM008 - 1

ST3000DM007 985 211 ST3000DM008 7200 ST3000DM008 7200 ...

Orthogonal matrix Orthonormal matrix - 1

Jan 15, 2019 · orthogonal matrix perpendicular orthonormal matrix norm 1

Virtual Load Norm.

Jul 30, 2021 · Virtual Load Normal Load Perpendicular Load ...

Master geometry with our comprehensive perpendicular bisector worksheet with answers! Enhance your skills and understanding—discover how to excel today!

[Back to Home](#)