

McDougal Littell Geometry Worksheet Answers

Name _____ Class _____ Date _____

5-7

Practice

Form K

Inequalities in Two Triangles

Write an inequality relating the given side lengths. If there is not enough information to reach a conclusion, write *no conclusion*.

1. AB and CB **$AB < CB$**

To start, determine whether the triangles have two pairs of congruent sides.

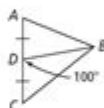
$$\overline{AD} \cong \overline{CD}$$

$$\overline{DB} \cong ? \text{ **\overline{DB}** }$$

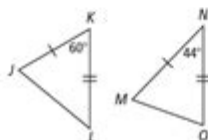
Then compare the hinge angles.

$$m\angle CDB = \boxed{100}$$

$$m\angle ADB = \boxed{80}$$



2. JL and MO **$JL > MO$**



3. ST and BT ***no conclusion***

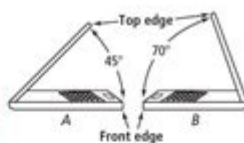


4. Two identical laptops are shown at the right.

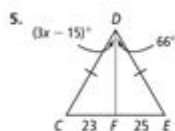
In which laptop is the distance from the top edge of the screen to the front edge of the keyboard greater?

Explain.

Laptop B; the lengths of the laptops' keyboards and screens are the same. Laptop B is open wider, so the hinge angle is greater than it is for Laptop A.



Algebra Find the range of possible values for each variable.

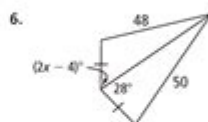


$$m\angle CDF < m\angle EDF$$

$$m\angle CDE > 0$$

$$x < \boxed{27}$$

$$x > \boxed{5}$$



$$\boxed{2} < x < \boxed{16}$$

McDougal Littell Geometry Worksheet Answers are essential resources for students studying geometry as part of their high school curriculum. These worksheets are designed to supplement the textbook material and provide practice problems that reinforce the concepts taught in class. Geometry, as a branch of mathematics, focuses on the properties and relationships of points, lines, angles, surfaces, and solids. Mastering these concepts is crucial for students, as they lay the foundation for more advanced mathematical studies and applications in various fields such as engineering, architecture, and physics.

Overview of McDougal Littell Geometry

McDougal Littell is a well-known educational publisher that produces textbooks and supplementary materials for various subjects, including mathematics. The McDougal Littell Geometry textbook is widely used in high school math courses and is designed to provide students with a comprehensive understanding of geometric principles. The textbook is structured to promote problem-solving skills and critical thinking, with a variety of examples, exercises, and applications.

Key Features of McDougal Littell Geometry Worksheets

The worksheets associated with the McDougal Littell Geometry textbook are designed to enhance student learning through:

1. **Practice Problems:** Each worksheet contains a range of problems that reflect the material covered in the textbook. These problems vary in difficulty, allowing students to build confidence as they progress.
2. **Visual Aids:** Many worksheets include diagrams and illustrations that help students visualize geometric concepts. This is especially important in geometry, where understanding shapes and their properties is crucial.
3. **Real-World Applications:** The worksheets often incorporate real-world scenarios and applications, helping students see the relevance of geometry in everyday life.
4. **Review Sections:** Worksheets frequently include review sections that cover previously learned material, ensuring that students retain essential concepts as they advance through the curriculum.
5. **Collaboration Opportunities:** Many teachers encourage group work with these worksheets, fostering collaboration and discussion among students, which can lead to deeper understanding.

Importance of Worksheet Answers

Having access to worksheet answers is invaluable for students for several reasons:

Self-Assessment

Students can use the answers to check their work and assess their understanding of the material. This immediate feedback allows them to identify areas where they may need additional practice or clarification.

Homework Assistance

When completing homework assignments, students may encounter problems they find challenging. Access to worksheet answers can help them work through these difficulties, providing guidance on how to reach the correct solution.

Preparation for Tests and Quizzes

Regular practice with worksheets, coupled with the ability to verify answers, can significantly enhance a student's preparation for tests and quizzes. Understanding the reasoning behind each answer can also help students perform better on assessments.

Building Confidence

When students can verify their answers and understand their mistakes, it builds confidence in their mathematical abilities. Confidence plays a crucial role in a student's overall approach to learning.

Common Topics Covered in McDougal Littell Geometry Worksheets

The worksheets cover a wide range of topics within the geometry curriculum. Some of the most common topics include:

1. Points, Lines, and Angles

- Definitions of points, lines, rays, and segments
- Angle types (acute, obtuse, right)
- Angle relationships (complementary, supplementary)

2. Triangles

- Types of triangles (scalene, isosceles, equilateral)
- Triangle congruence (SSS, SAS, ASA)
- Pythagorean theorem

3. Quadrilaterals and Polygons

- Properties of quadrilaterals (parallelograms, rectangles, squares)
- Interior and exterior angles of polygons
- Area and perimeter calculations

4. Circles

- Definitions of radius, diameter, and circumference
- Area of circles
- Arc length and sector area

5. Transformations

- Types of transformations (translations, rotations, reflections)
- Properties of transformations

6. Surface Area and Volume

- Surface area and volume of three-dimensional shapes (cubes, cylinders, spheres)
- Real-world applications of surface area and volume

How to Effectively Use McDougal Littell Geometry Worksheet Answers

To maximize the benefits of using worksheet answers, students should consider the following strategies:

Review Mistakes Thoroughly

When checking answers, students should not just focus on whether they got the problem right or wrong. Instead, they should review the entire problem-solving process. Understanding where they made mistakes can prevent similar errors in the future.

Practice Regularly

Consistent practice is key to mastering geometric concepts. Students should regularly complete worksheets and refer to the answers to track their progress over time.

Engage with Peers

Discussing problems and answers with classmates can enhance understanding. Students should form study groups to work through challenging concepts together, using the worksheet answers as a guide.

Utilize Teacher Feedback

Teachers often provide additional insights and explanations that can clarify confusing topics. Students should seek feedback from their teachers regarding their worksheet answers to gain a deeper understanding.

Conclusion

In conclusion, McDougal Littell Geometry Worksheet Answers are a vital component of geometry education for high school students. They provide essential practice, immediate feedback, and the opportunity for self-assessment. The comprehensive nature of the worksheets, paired with the detailed answers, supports a deeper understanding of geometric concepts and fosters confidence in students' mathematical abilities. By engaging with the worksheets and utilizing the answers effectively, students can navigate their geometry studies with greater success, preparing them not only for tests and quizzes but also for future academic pursuits in mathematics and related fields.

Frequently Asked Questions

What is the purpose of McDougal Littell Geometry worksheets?

McDougal Littell Geometry worksheets are designed to reinforce concepts taught in the geometry curriculum, helping students practice problem-solving and understanding geometric principles.

Where can I find answers for McDougal Littell Geometry worksheets?

Answers for McDougal Littell Geometry worksheets can typically be found in the teacher's edition of the textbook or online educational resources that provide answer keys.

Are McDougal Littell Geometry worksheet answers available for free online?

Yes, some educational websites and forums may offer free access to answers for McDougal Littell Geometry worksheets, but it's important to verify the accuracy of these answers.

How can I effectively use McDougal Littell Geometry worksheet answers?

Students can use the answers to check their work, understand mistakes, and clarify concepts they find challenging, but they should try to solve the problems independently first.

What types of problems are included in McDougal Littell Geometry worksheets?

McDougal Littell Geometry worksheets typically include a variety of problems such as proofs, theorems, geometric constructions, and real-world applications of geometric concepts.

Can McDougal Littell Geometry worksheets help prepare for standardized tests?

Yes, practicing with McDougal Littell Geometry worksheets can help students reinforce their understanding of geometry, which is beneficial for standardized tests that include math sections.

What grade level are McDougal Littell Geometry worksheets intended for?

McDougal Littell Geometry worksheets are generally intended for high school students, often used in 9th or 10th grade geometry courses.

Is there a digital version of McDougal Littell Geometry worksheets?

Yes, digital versions of McDougal Littell Geometry worksheets may be available through educational platforms or the publisher's website, providing interactive practice options.

How can teachers effectively incorporate McDougal Littell Geometry worksheets in their lessons?

Teachers can incorporate these worksheets as supplementary practice, group activities, or homework assignments to reinforce lessons and assess student understanding of geometry concepts.

Find other PDF article:

<https://soc.up.edu.ph/66-gist/pdf?ID=kYJ04-6794&title=what-is-process-technology-degree.pdf>

[Mcdougal Littell Geometry Worksheet Answers](#)

[Live Auction - education.mcdougallbay.com](https://www.mcdougallbay.com)

2016 Jeep Compass SUV Location: 601 17th Street East, Brandon, MB Lot: 1 Status: Open Current Bid: \$800.00 CAD sunny202 Close date: Wed Mar. 26, 2025 12:00 pm CST Details

ESTATE TOY COLLECTION - DAY 1

Oct 29, 2024 · Have a look at this extensive collection of toys from Star Wars, Ertle Farm Toys, LEGO, Superheroes and more! Log in to bid on this great selection of collectibles to add to ...

Welcome to McDougall Auctioneers

ESTATE TOY COLLECTION - DAY 3 18623 Location: 800 North Service Road, Emerald Park, SK Details

Upcoming Auctions - McDougall Auctioneers

Feb 26, 2025 · Location: 800 North Service Road, Emerald Park, SK and St. John & 6th Avenue, Regina, SK, Emerald Park, SK

REGINA WEEKLY AUCTION SALE

Oct 21, 2024 · Viewing & Pick Up: 800 North Service Road, Emerald Park, SK G.P.S. Coordinates - 50.448863, -104.399373 Monday from 8:00 AM to 4:30 PM Tuesday from 8:00 ...

Live Auction - [mcdougallbay.com](https://www.mcdougallbay.com)

Sep 13, 2024 · 2004 Jeep Liberty Limited SUV Location: 203 60th Street East, Saskatoon, SK Lot: 1 Status: Open Current Bid: \$1,800.00 CAD MCS03 Close date: Tue Sep. 17, 2024 12:00 ...

REGINA MONTHLY AG & INDUSTRIAL EQUIPMENT AUCTION

Jun 24, 2024 · Viewing & Pick Up: 800 North Service Road, Emerald Park, SK G.P.S. Coordinates - 50.448863, -104.399373 Monday from 8:00 AM to 4:30 PM Tuesday from 8:00 ...

(2) Rolling Tables & Cart

Feb 5, 2024 · Please remember that due to offsite location, removal is strictly the responsibility of the purchaser and there will be no tools, equipment or assistance provided by McDougall ...

2008 Yamaha Grizzly 700 FI ATV - [w-www.mcdougallbay.com](https://www.mcdougallbay.com)

Unreserved Pick up location: Moose Jaw, SK (50.3900,-105.4890), SK Auction: ACREAGE MOVING SALE Lot: 202 Print Page

Live Auction - education.mcdougallbay.com

2016 Jeep Compass SUV Location: 601 17th Street East, Brandon, MB Lot: 1 Status: Open Current Bid: \$800.00 CAD sunny202 Close date: Wed Mar. 26, 2025 12:00 pm CST Details

ESTATE TOY COLLECTION - DAY 1

Oct 29, 2024 · Have a look at this extensive collection of toys from Star Wars, Ertle Farm Toys, LEGO, Superheroes and more! Log in to bid on this great selection of collectibles to add to ...

Welcome to McDougall Auctioneers

ESTATE TOY COLLECTION - DAY 3 18623 Location: 800 North Service Road, Emerald Park, SK Details

Upcoming Auctions - McDougall Auctioneers

Feb 26, 2025 · Location: 800 North Service Road, Emerald Park, SK and St. John & 6th Avenue, Regina, SK, Emerald Park, SK

REGINA WEEKLY AUCTION SALE

Oct 21, 2024 · Viewing & Pick Up: 800 North Service Road, Emerald Park, SK G.P.S. Coordinates - 50.448863, -104.399373 Monday from 8:00 AM to 4:30 PM Tuesday from 8:00 AM to 4:30 ...

Live Auction - [mcdougallbay.com](https://www.mcdougallbay.com)

Sep 13, 2024 · 2004 Jeep Liberty Limited SUV Location: 203 60th Street East, Saskatoon, SK Lot: 1 Status: Open Current Bid: \$1,800.00 CAD MCS03 Close date: Tue Sep. 17, 2024 12:00 ...

REGINA MONTHLY AG & INDUSTRIAL EQUIPMENT AUCTION

Jun 24, 2024 · Viewing & Pick Up: 800 North Service Road, Emerald Park, SK G.P.S. Coordinates - 50.448863, -104.399373 Monday from 8:00 AM to 4:30 PM Tuesday from 8:00 ...

(2) Rolling Tables & Cart

Feb 5, 2024 · Please remember that due to offsite location, removal is strictly the responsibility of the purchaser and there will be no tools, equipment or assistance provided by McDougall ...

2008 Yamaha Grizzly 700 FI ATV - w-www.mcdougallbay.com

Unreserved Pick up location: Moose Jaw, SK (50.3900,-105.4890), SK Auction: ACREAGE MOVING SALE Lot: 202 Print Page

Find accurate McDougal Littell Geometry worksheet answers to boost your understanding and confidence in math. Discover how to excel in geometry today!

[Back to Home](#)