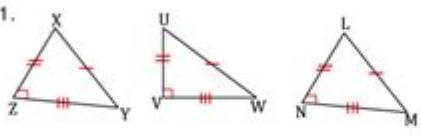


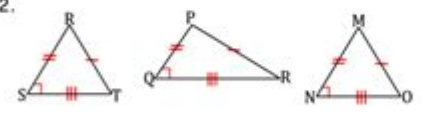
Congruent Triangles Sss And Sas Worksheet Answers

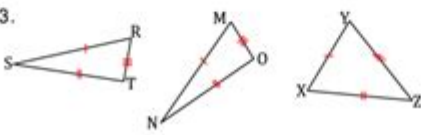
Name _____ Date _____

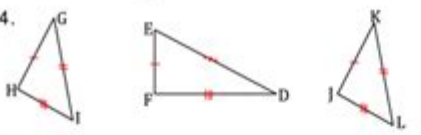
Congruent Triangles: SSS and SAS Theorems - Matching Worksheet

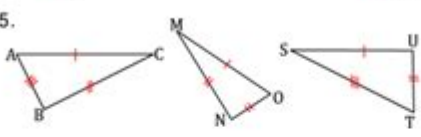
Write the letter of the two congruent triangles (use SSS or SAS only).

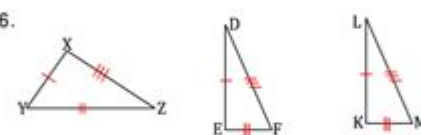
- _____ 1. 

a. $\triangle abc \cong \triangle stu$
- _____ 2. 


b. $\triangle hgi \cong \triangle kji$
- _____ 3. 

c. $\triangle gcl \cong \triangle klm$
- _____ 4. 

d. $\triangle rsl \cong \triangle mnr$
- _____ 5. 

e. $\triangle srl \cong \triangle mnr$
- _____ 6. 

f. $\triangle xzy \cong \triangle mna$

 Tons of Free Math Worksheets at: © www.mathworksheetsland.com

Congruent triangles sss and sas worksheet answers are essential tools in understanding the properties of triangles in geometry. When studying congruence, students often encounter two primary criteria: Side-Side-Side (SSS) and Side-Angle-Side (SAS). These criteria help determine whether two triangles are congruent, meaning they have the same shape and size, albeit possibly in different orientations or positions. This article delves into the principles of SSS and SAS congruence, provides examples, and includes tips for solving related worksheets effectively.

Understanding Congruent Triangles

To comprehend congruence in triangles, it's vital to understand the definition of congruence itself. Two triangles are congruent if all their corresponding sides and angles are equal. This means that if one triangle can be transformed into another through rigid motions (like translation, rotation, or reflection), they are congruent.

Congruence Criteria

To determine whether two triangles are congruent, several criteria can be applied. Here, we focus on the SSS and SAS criteria:

1. Side-Side-Side (SSS) Congruence:

This criterion states that if three sides of one triangle are equal in length to three sides of another triangle, the triangles are congruent.

- Example: If Triangle ABC has sides measuring 5 cm, 7 cm, and 10 cm, and Triangle DEF has corresponding sides of the same lengths, then Triangle ABC is congruent to Triangle DEF ($\triangle ABC \cong \triangle DEF$).

2. Side-Angle-Side (SAS) Congruence:

According to this criterion, if two sides of one triangle are equal to two sides of another triangle, and the angle included between those two sides is equal, then the triangles are congruent.

- Example: If Triangle GHI has sides measuring 6 cm and 8 cm with an included angle of 60 degrees, and Triangle JKL has sides of 6 cm and 8 cm with the same included angle, then Triangle GHI is congruent to Triangle JKL ($\triangle GHI \cong \triangle JKL$).

SSS and SAS Worksheet Examples

To further illustrate the concepts of SSS and SAS, let's look at some sample problems that might appear on worksheets.

Example Problems for SSS Congruence

1. Problem 1:

Given Triangle XYZ with sides $XY = 4$ cm, $YZ = 5$ cm, and $ZX = 6$ cm, and Triangle PQR with sides $PQ = 4$ cm, $QR = 5$ cm, and $RP = 6$ cm. Are the triangles congruent?

- Solution: Since all corresponding sides are equal ($XY = PQ$, $YZ = QR$, $ZX = RP$), by SSS, $\triangle XYZ \cong \triangle PQR$.

2. Problem 2:

Triangle ABC has sides $AB = 3$ cm, $AC = 4$ cm, and $BC = 5$ cm. Triangle DEF has sides $DE = 3$ cm, $EF = 4$ cm, and $FD = 6$ cm. Are the triangles congruent?

- Solution: The side lengths of Triangle ABC do not match those of Triangle DEF. Therefore, $\triangle ABC$ is not congruent to $\triangle DEF$.

Example Problems for SAS Congruence

1. Problem 1:

Triangle MNO has sides $MN = 8$ cm, $NO = 6$ cm, and angle $\angle N = 45$ degrees. Triangle STU has sides $ST = 8$ cm, $TU = 6$ cm, and angle $\angle T = 45$ degrees. Are the triangles congruent?

- Solution: Since two sides and the included angle of Triangle MNO are equal to those of Triangle STU, by SAS, $\triangle MNO \cong \triangle STU$.

2. Problem 2:

Given Triangle JKL with $JK = 5$ cm, $KL = 7$ cm, and angle $\angle K = 30$ degrees, and Triangle OPQ with $OP = 5$ cm, $PQ = 8$ cm, and angle $\angle P = 30$ degrees. Are the triangles congruent?

- Solution: The side lengths are not corresponding; therefore, $\triangle JKL$ is not congruent to $\triangle OPQ$.

Tips for Solving Congruence Problems

When working on worksheets involving congruent triangles, here are some tips to keep in mind:

- Draw Diagrams: Visual representation helps in understanding the relationships between the triangles. Label all sides and angles clearly.
- Identify Given Information: Before jumping into calculations, list out what is provided and what needs to be proven. This aids in structuring the solution.
- Apply Congruence Theorems: Familiarize yourself with all congruence criteria (SSS, SAS, ASA, AAS, and HL). Knowing when to apply each will save time and prevent mistakes.
- Check Your Work: After solving, go through each step to ensure no mistakes in calculations or reasoning. This is especially important in problems involving multiple triangles.
- Practice Regularly: The more you work on problems involving SSS and SAS, the more comfortable you will become with identifying congruent triangles.

Worksheet Answer Key and Review

When completing worksheets, it's essential to have an answer key for self-assessment. Here's a simple example of an answer key based on the previous problems:

- SSS Problems:
 - Problem 1: Yes, $\triangle XYZ \cong \triangle PQR$
 - Problem 2: No, $\triangle ABC \cong \triangle DEF$
- SAS Problems:
 - Problem 1: Yes, $\triangle MNO \cong \triangle STU$
 - Problem 2: No, $\triangle JKL \cong \triangle OPQ$

Reviewing the answers not only helps in understanding the correctness of the solutions but also offers insight into areas needing further practice.

Conclusion

Understanding congruent triangles sss and sas worksheet answers is fundamental for students studying geometry. By mastering the SSS and SAS congruence criteria, learners can effectively determine when triangles are congruent. Utilizing diagrams, applying the correct theorems, and practicing regularly will enhance problem-solving skills and boost confidence in geometry. As students continue to explore the world of triangles, these foundational concepts will serve them well in their academic journey.

Frequently Asked Questions

What does SSS stand for in congruent triangles?

SSS stands for Side-Side-Side, which states that if three sides of one triangle are equal to three sides of another triangle, then the two triangles are congruent.

What does SAS stand for in congruent triangles?

SAS stands for Side-Angle-Side, which indicates that if two sides and the angle between them in one triangle are equal to two sides and the included angle in another triangle, then the triangles are congruent.

How can I determine if two triangles are congruent using SSS?

To determine if two triangles are congruent using SSS, measure all three sides of each triangle and compare them. If all three pairs of corresponding sides are equal, the triangles are congruent.

What is the difference between SSS and SAS in proving triangle congruence?

The difference is that SSS requires all three sides to be equal, while SAS requires two sides and the included angle to be equal. SSS does not involve angles, while SAS does.

Can I use SSS or SAS to prove triangle congruence in any triangle?

Yes, SSS and SAS can be used to prove triangle congruence in any triangles as long as the conditions of side lengths or side-angle relationships are met.

Where can I find worksheets on SSS and SAS congruence?

Worksheets on SSS and SAS congruence can be found on educational websites, math resource platforms, or by searching for 'congruent triangles SSS SAS worksheets' online.

What resources can help me understand how to solve SSS and SAS congruence problems?

Resources such as online tutorials, instructional videos, math textbooks, and practice worksheets specifically focused on triangle congruence can help you understand and solve SSS and SAS problems.

Find other PDF article:

<https://soc.up.edu.ph/29-scan/Book?ID=Dnf59-9334&title=how-full-is-your-bucket-for-kids.pdf>

Congruent Triangles Sss And Sas Worksheet Answers

"Congruent" | HiNative

Q&A about usage, example sentences, meaning and synonyms of word "Congruent". more than 11 answers from native speakers about natural usage and nuances of Talk.

Congruent Triangles: Definition, Properties, Videos and Solved

Congruent Triangles We all know that a triangle has three angles, three sides and three vertices. Depending on similarities in the measurement of sides, triangles are classified as equilateral, isosceles and scalene. The comparison done in this case is between the sides and angles of the same triangle. When we compare two different triangles we follow a different set of rules. Two ...

Congruence of Triangles: Criteria for Congruent Triangles ... - Toppr

Congruent objects are exact replicas of each other. The relation of two objects being congruent is called congruence. In this article, we will study about Congruent Triangles and how to understand and determine congruence between two triangles.

What are the differences between similar triangles and congruent ...

Congruent figures are the same shape and size. Similar figures are the same shape, but not necessarily the same size. Note that if two figures are congruent, then they are also similar, but not vice-versa.

What is the difference between "incongruent" and ... - HiNative

Synonym for incongruent Incongruent things are not the same as each other or not agreeing with each other. In geometry, two figures are congruent if one can be made into the other through rotating, sliding, and flipping alone. An incongruous thing does not make sense in its environment.

"congruent" vs "consistent" | HiNative

Congruent is a specific term in math. Consistent is used to describe every day things that line up logically. "Their stories were consistent, so we assume that's what happened." I like

What is the difference between "congruent" and ... - HiNative

Synonym for congruent Congruent is a specific term in math. Consistent is used to describe every day things that line up logically. "Their stories were consistent, so we assume that's what happened."

If two triangles are congruent, are they similar? Please ... - Toppr

If two triangles are congruent then all corresponding sides as well as corresponding angles of one triangle are equal to those of other triangles. This can happen in four cases one - when all sides of triangles are equal, two - if one side and two angles of one are equal to one side and two angles of other triangle.

In Delta ABC and Delta PQR, AB = AC, angle C = angle P and

Two triangles are congruent if their corresponding sides are equal in length and their corresponding angles are equal. In geometry, an isosceles triangle is a triangle that has two sides of equal length. Therefore, we can say that the given triangles are neither congruent nor isosceles. Therefore, ABC, P QR are not congruent nor isosceles.

Arc of a Circle: Videos, Major and Minor Arc, Concepts, Solved

The degree measure of each of the semi-circles is 180 degrees. Congruent Circles If the radii of two circles are exactly the same value, then the circles are called to be congruent. Concentric Circles Two or more circles that have different radii but the same center are called as concentric circles. Solved Example For You Q.

"Congruent" | HiNative

Q&A about usage, example sentences, meaning and synonyms of word "Congruent". more than 11 answers from native speakers about natural usage and nuances of Talk.

Congruent Triangles: Definition, Properties, Videos and Solved

Congruent Triangles We all know that a triangle has three angles, three sides and three vertices. Depending on similarities in the measurement of sides, triangles are classified as equilateral, ...

Congruence of Triangles: Criteria for Congruent Triangles ... - Toppr

Congruent objects are exact replicas of each other. The relation of two objects being congruent is called congruence. In this article, we will study about Congruent Triangles and how to ...

What are the differences between similar triangles and congruent ...

Congruent figures are the same shape and size. Similar figures are the same shape, but not necessarily the same size. Note that if two figures are congruent, then they are also similar, but ...

What is the difference between "incongruent" and ... - HiNative

Synonym for incongruent Incongruent things are not the same as each other or not agreeing with each other. In geometry, two figures are congruent if one can be made into the other through ...

"congruent" vs "consistent" | HiNative

Congruent is a specific term in math. Consistent is used to describe every day things that line up logically. "Their stories were consistent, so we assume that's what happened." 1 like

What is the difference between "congruent" and ... - HiNative

Synonym for congruent Congruent is a specific term in math. Consistent is used to describe every day things that line up logically. "Their stories were consistent, so we assume that's what ...

If two triangles are congruent, are they similar? Please ... - Toppr

If two triangles are congruent then all corresponding sides as well as corresponding angles of one triangle are equal to those of other triangles. This can happen in four cases one - when all sides ...

In ΔABC and ΔPQR , $AB = AC$, angle $C =$ angle P and

Two triangles are congruent if their corresponding sides are equal in length and their corresponding angles are equal. In geometry, an isosceles triangle is a triangle that has two sides of equal ...

Arc of a Circle: Videos, Major and Minor Arc, Concepts, Solved

The degree measure of each of the semi-circles is 180 degrees. Congruent Circles If the radii of two circles are exactly the same value, then the circles are called to be congruent. Concentric Circles ...

Find detailed answers to the 'congruent triangles SSS and SAS worksheet' in our comprehensive guide. Enhance your understanding and mastery today! Learn more.

[Back to Home](#)