


# Box And Whisker Plot Practice Answer Key



**Box and whisker plot practice answer key** is an essential tool for educators and students alike, especially in the field of statistics. Box and whisker plots, also known as box plots, are a standardized way of displaying the distribution of data based on a five-number summary—minimum, first quartile (Q1), median (Q2), third quartile (Q3), and maximum. This graphical representation allows for a clear understanding of data distribution, variability, and potential outliers. This article will provide a comprehensive overview of box and whisker plots, their construction, interpretation, and a practice answer key to enhance understanding.

## Understanding Box and Whisker Plots

Box and whisker plots are particularly useful for comparing distributions between several groups or datasets. They provide a visual representation that can summarize a large amount of data with minimal detail while still conveying critical information.

## Components of a Box and Whisker Plot

A box and whisker plot consists of several key components:

1. Minimum: The smallest data point, excluding outliers.
2. First Quartile (Q1): The median of the lower half of the dataset (25th

percentile).

3. Median (Q2): The middle value of the dataset.

4. Third Quartile (Q3): The median of the upper half of the dataset (75th percentile).

5. Maximum: The largest data point, excluding outliers.

The box itself represents the interquartile range (IQR), which is the distance between Q1 and Q3, containing the middle 50% of the data. The "whiskers" extend from the box to the smallest and largest values within 1.5 times the IQR from the quartiles, while points outside this range are considered outliers.

## Steps to Create a Box and Whisker Plot

Creating a box and whisker plot involves the following steps:

1. Organize the Data: Arrange the dataset in ascending order.
2. Calculate the Five-Number Summary:
  - Determine the minimum and maximum values.
  - Find Q1 and Q3 using the median of the lower and upper halves of the data.
  - Calculate the median (Q2).
3. Draw the Box: Create a box from Q1 to Q3, marking Q2 inside the box.
4. Add Whiskers: Extend lines (whiskers) from Q1 to the minimum and from Q3 to the maximum, excluding outliers.
5. Identify Outliers: Mark any data points that fall outside the whiskers as outliers.

## Interpreting Box and Whisker Plots

Understanding how to interpret box and whisker plots is crucial for analyzing data effectively. Here are key aspects to consider:

### Comparing Groups

Box and whisker plots allow for easy comparison between multiple datasets. When comparing groups:

- Location of the Medians: The position of the median line within the box provides insight into the central tendency of the data.
- Spread of the Data: The length of the box (IQR) shows the variability within the middle 50% of the data.
- Outliers: The presence of outliers can indicate variability or potential anomalies in the dataset.

# Identifying Skewness

The symmetry of the box and whisker plot can also indicate the skewness of the data:

- Symmetrical: If the median is centered within the box and the whiskers are of equal length, the data is symmetrical.
- Right-Skewed: If the median is closer to Q1 and the right whisker is longer, the data is right-skewed.
- Left-Skewed: If the median is closer to Q3 and the left whisker is longer, the data is left-skewed.

## Practice Problems for Box and Whisker Plots

To reinforce understanding, consider the following practice problems. After attempting to solve them, check the answers provided in the answer key section.

### Practice Problem 1

Given the following dataset:

4, 8, 6, 5, 3, 7, 9, 10, 12

1. Organize the data.
2. Calculate the five-number summary.
3. Create a box and whisker plot.

### Practice Problem 2

For the dataset:

15, 22, 19, 25, 30, 10, 28, 35, 40

1. Organize the data.
2. Calculate the five-number summary.
3. Create a box and whisker plot.

### Practice Problem 3

Consider the following data representing test scores:

88, 92, 85, 90, 95, 98, 78, 82, 89, 91

1. Organize the data.

2. Calculate the five-number summary.
3. Create a box and whisker plot.

## Box and Whisker Plot Practice Answer Key

Let's go over the answers to the practice problems.

### Answer to Practice Problem 1

1. Organized Data: 3, 4, 5, 6, 7, 8, 9, 10, 12
2. Five-Number Summary:
  - Minimum: 3
  - Q1: 5
  - Median (Q2): 7
  - Q3: 9
  - Maximum: 12
3. Box and Whisker Plot: Draw a box from Q1 (5) to Q3 (9) with a line at the median (7) and whiskers extending to the minimum (3) and maximum (12).

### Answer to Practice Problem 2

1. Organized Data: 10, 15, 19, 22, 25, 28, 30, 35, 40
2. Five-Number Summary:
  - Minimum: 10
  - Q1: 19
  - Median (Q2): 25
  - Q3: 30
  - Maximum: 40
3. Box and Whisker Plot: Draw a box from Q1 (19) to Q3 (30) with a line at the median (25) and whiskers extending to the minimum (10) and maximum (40).

### Answer to Practice Problem 3

1. Organized Data: 78, 82, 85, 88, 89, 90, 91, 92, 95, 98
2. Five-Number Summary:
  - Minimum: 78
  - Q1: 85
  - Median (Q2): 89.5
  - Q3: 92
  - Maximum: 98
3. Box and Whisker Plot: Draw a box from Q1 (85) to Q3 (92) with a line at the median (89.5) and whiskers extending to the minimum (78) and maximum (98).

# Conclusion

The box and whisker plot practice answer key serves as a valuable resource for both teachers and students seeking to master the concepts of data representation and statistics. By understanding how to create and interpret box and whisker plots, individuals can gain insights into data distributions, compare groups effectively, and identify key characteristics such as central tendency, variability, and outliers. Engaging with practice problems and reviewing the answers provided can significantly enhance one's proficiency in analyzing statistical data.

## Frequently Asked Questions

### **What is the purpose of a box and whisker plot?**

A box and whisker plot visually summarizes the distribution of a dataset by displaying its median, quartiles, and potential outliers.

### **How do you determine the median from a box and whisker plot?**

The median is represented by the line inside the box of the box and whisker plot.

### **What do the 'whiskers' on a box and whisker plot represent?**

The whiskers extend from the quartiles to the minimum and maximum values within 1.5 times the interquartile range, indicating the range of the data.

### **How can you identify outliers using a box and whisker plot?**

Outliers are typically represented as individual points outside the whiskers, indicating that they fall beyond 1.5 times the interquartile range from the quartiles.

### **What information does the interquartile range (IQR) provide in a box and whisker plot?**

The interquartile range (IQR) measures the spread of the middle 50% of the data, calculated as the difference between the first quartile (Q1) and the third quartile (Q3).

# How can box and whisker plots be useful in comparing distributions?

Box and whisker plots allow for easy visual comparison of the central tendency, spread, and presence of outliers across different datasets.

## What are the steps to create a box and whisker plot?

To create a box and whisker plot, first organize the data in ascending order, calculate the median, Q1, Q3, minimum, and maximum, and then draw the box with whiskers based on these values.

## Where can I find practice problems for box and whisker plots?

Practice problems for box and whisker plots can be found in math textbooks, educational websites, and online platforms that offer worksheets and answer keys.

Find other PDF article:

<https://soc.up.edu.ph/66-gist/pdf?dataid=fEv64-0665&title=when-are-math-kangaroo-results-announced.pdf>

## Box And Whisker Plot Practice Answer Key

F1Box? - Box

“Box? ” TR “box box” BOX ...

Core Ultra Core Ultra 7 265K BOX ...

Oct 25, 2024 · Core Ultra 7 265K BOX ¥46,480 20241025 .com

.com - N-BOX JOY

Oct 15, 2024 · N-BOX JOY .com

2025 ...

2025 ROG Cherry VGN 2780 ...

265K265( ) Core Ultra 7 265K ...

Oct 25, 2024 · Core Ultra 7 265K BOX 9 9 265K265 ( ) 2025/05/19 05:552 CPU > ...





□□□□□□□□ - □□

3.  $X_1, X_2, \dots, X_n$  are independent and identically distributed (i.i.d.) random variables with a common probability density function (PDF)  $f(x)$ .

www.com - AMD Ryzen 5 9600X BOX

Aug 20, 2024 · AMD Ryzen 5 9600X BOXXXXXXXXXXXXXXXXXXXXX.com XXXXXXXXXXXXXXXXXXXX  
XXXXXXXXXXXX



Jun 4, 2024 ·  1ms   
 ... 

PS5 Switch Xbox

May 24, 2025 ·   PS4  Xbox One  Xbox Series X / S  PS5  /  ...

[www.com](#) - EGR N ...

Feb 24, 2025 · N-BOX ECU 2020 ...

*F1*  *Box?* -

"Box? □□□□□□□□" □□□□□□□□□□□□□□□□□□□□□□□□TR□□ "box box" □□□□□□□□□□□□□□  
□BOX□□□□□□ ...

**Core Ultra Core Ultra 7 265K BOX**

Oct 25, 2024 · [ASUS Core Ultra 7 265K BOX](#) [ASUS](#) ¥46,480 [ASUS](#) 2024年10月25日 [ASUS.com](#)

www.fox.com - FOX N-BOX JOY

Oct 15, 2024 · [N-BOX JOY](#)[XXXXXXXXXXXXXXXXXXXXXXXXXXXX.com](#) [XXXXXXXXXXXXXXXXXXXXXXXXXXXX](#)  
[XX](#)

□□□□□2025□□□□□□□□□□□□□□□□□□□□...

2025 ROG Cherry VGN 2780 ...

Core Ultra 7 ...

Oct 25, 2024 · Core Ultra 7 265K BOX 9 9 265K 265 ( )  
2025/05/19 05:55 2 CPU > ...

□□□□□□□□ - □□

3
  $\times \times \times \times \times \times$

www.ck12.com - AMD Ryzen 5 9600X BOX 6-core processor

Aug 20, 2024 · AMD Ryzen 5 9600X BOX. com

[illegible]

PS5・Switch・Xboxの価格比較

May 24, 2025 ・ PS4・Xbox Oneの価格比較 Xbox Series X / S PS5 の価格 / 価格 ...

価格.com - EGRの価格比較 N ...

Feb 24, 2025 ・ N-BOXの価格比較 ECUの価格比較 2020の価格比較 ...

Unlock your understanding of box and whisker plots with our comprehensive practice answer key. Learn more to master this essential data visualization tool!

[Back to Home](#)