

# Area Of A Trapezoid Worksheet

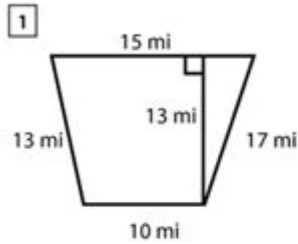
Name : \_\_\_\_\_

Score : \_\_\_\_\_ Date : \_\_\_\_\_

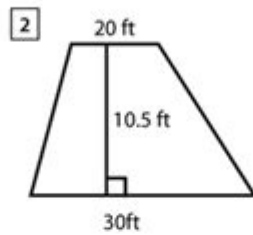


## Area of Trapezoid Worksheet

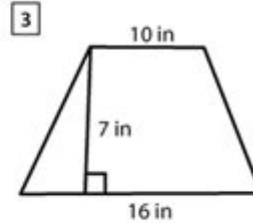
Find the area of each trapezoid.



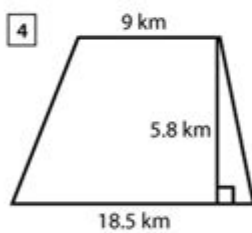
Area = \_\_\_\_\_



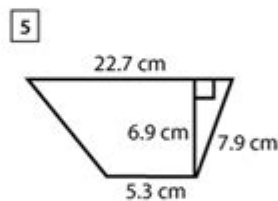
Area = \_\_\_\_\_



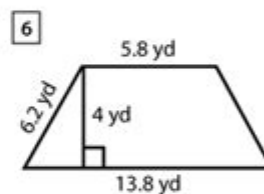
Area = \_\_\_\_\_



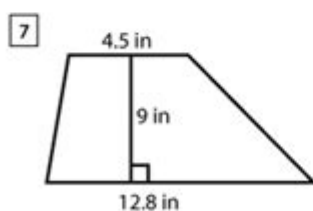
Area = \_\_\_\_\_



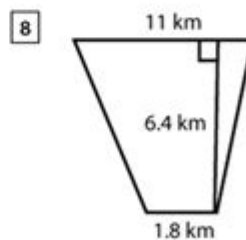
Area = \_\_\_\_\_



Area = \_\_\_\_\_



Area = \_\_\_\_\_



Area = \_\_\_\_\_

Area of a trapezoid worksheet is a valuable resource for students and educators looking to master the concept of calculating the area of trapezoids. Trapezoids, or trapeziums as they are known in some countries, are quadrilaterals with at least one pair of parallel sides. Understanding how to compute their area is crucial for various applications in geometry, architecture, engineering, and real-life scenarios. This article will delve into the methodology of calculating the area of trapezoids, provide examples, and highlight the importance of worksheets in learning this topic.

# Understanding the Trapezoid

A trapezoid is a four-sided figure characterized by having two sides that are parallel. The lengths of the parallel sides are referred to as the bases, while the other two sides are known as the legs. Here are some key features of trapezoids:

- **Parallel Sides:** The defining characteristic of a trapezoid is its two parallel sides.
- **Height:** The perpendicular distance between the parallel sides is called the height of the trapezoid.
- **Base Lengths:** The lengths of the two bases are essential for calculating the area.

## Formula for the Area of a Trapezoid

To compute the area of a trapezoid, the following formula is used:

### Area Formula

$$A = 1/2 \times (b_1 + b_2) \times h$$

Where:

- A is the area of the trapezoid.
- $b_1$  is the length of the first base.
- $b_2$  is the length of the second base.
- h is the height of the trapezoid.

# Step-by-Step Calculation of Area

Calculating the area of a trapezoid can be broken down into several simple steps. Here's how you can do it:

1. **Identify the Bases:** Measure the lengths of both bases ( $b_1$  and  $b_2$ ).
2. **Measure the Height:** Determine the height ( $h$ ) of the trapezoid, which is the perpendicular distance between the bases.
3. **Apply the Formula:** Substitute the values of  $b_1$ ,  $b_2$ , and  $h$  into the area formula.
4. **Calculate:** Perform the arithmetic to find the area.

## Example Problems

To better understand how to use the formula, let's go through a couple of example problems.

### Example 1

Suppose you have a trapezoid with base lengths of 8 cm and 5 cm, and a height of 4 cm.

- Step 1: Identify the bases:  $b_1 = 8$  cm,  $b_2 = 5$  cm
- Step 2: Measure the height:  $h = 4$  cm
- Step 3: Apply the formula:

$$A = 1/2 \times (8 + 5) \times 4$$

- Step 4: Calculate:

$$A = 1/2 \times 13 \times 4 = 26 \text{ cm}^2$$

So, the area of the trapezoid is 26 cm<sup>2</sup>.

## Example 2

Consider another trapezoid with bases of 10 m and 6 m, and a height of 3 m.

- Step 1: Identify the bases:  $b_1 = 10 \text{ m}$ ,  $b_2 = 6 \text{ m}$

- Step 2: Measure the height:  $h = 3 \text{ m}$

- Step 3: Apply the formula:

$$A = 1/2 \times (10 + 6) \times 3$$

- Step 4: Calculate:

$$A = 1/2 \times 16 \times 3 = 24 \text{ m}^2$$

Thus, the area of this trapezoid is 24 m<sup>2</sup>.

## Creating an Area of a Trapezoid Worksheet

An effective way to practice calculating the area of trapezoids is through worksheets. Here are some steps to create a comprehensive area of a trapezoid worksheet:

## **1. Define the Objective**

Clearly state what students will learn through the worksheet, which is calculating the area of trapezoids using the formula.

## **2. Include Examples**

Start with a few solved examples similar to those provided in this article, showing the step-by-step process.

## **3. Provide Practice Problems**

List several practice problems with varying levels of difficulty. Include trapezoids with different base lengths and heights.

## **4. Create Answer Keys**

Prepare an answer key for students to check their work after completing the exercises.

## **5. Incorporate Real-Life Applications**

Add questions that relate to real-life scenarios where trapezoids are relevant, such as designing a garden, building structures, or creating art.

## **The Importance of Worksheets in Learning Geometry**

Worksheets play a crucial role in the learning process for several reasons:

- **Reinforcement:** They help reinforce the concepts taught in class, allowing students to practice and apply what they have learned.
- **Self-Paced Learning:** Worksheets enable students to work at their own pace, ensuring they understand the material before moving on.
- **Assessment:** Teachers can use worksheets to assess students' understanding and identify areas that need additional attention.
- **Engagement:** Well-designed worksheets can make learning more engaging and enjoyable for students.

## Conclusion

In summary, an **area of a trapezoid worksheet** is an essential tool for mastering the concept of trapezoids in geometry. By understanding the properties of trapezoids and practicing calculations through worksheets, students can enhance their mathematical skills and gain confidence in their abilities. Whether used in a classroom setting or for self-study, these worksheets provide valuable practice that is crucial for educational success in geometry and beyond.

## Frequently Asked Questions

### What is a trapezoid and how is its area calculated?

A trapezoid is a four-sided figure with at least one pair of parallel sides. The area of a trapezoid can be calculated using the formula:  $\text{Area} = (1/2) (\text{base1} + \text{base2}) \text{ height}$ , where base1 and base2 are the lengths of the parallel sides and height is the perpendicular distance between them.

## **Are there any worksheets available for practicing trapezoid area calculations?**

Yes, many educational websites offer free printable worksheets specifically designed for practicing the area of trapezoids. These worksheets often include a variety of problems with varying levels of difficulty, along with answer keys.

## **What are some common mistakes students make when calculating the area of a trapezoid?**

Common mistakes include forgetting to divide by 2, mixing up the bases, or not using the correct height. Some students also struggle with identifying the height, confusing it with the lengths of the sides.

## **How can technology be used to enhance learning about trapezoid area calculations?**

Technology can enhance learning through interactive geometry software or apps that allow students to manipulate trapezoids and visualize how changes in dimensions affect the area. Online quizzes and games also provide engaging ways to practice.

## **What real-world applications involve the area of trapezoids?**

The area of trapezoids is often used in fields such as architecture, engineering, and land surveying. For example, calculating the area of land plots that have a trapezoidal shape or designing trapezoidal structures like roofs.

Find other PDF article:

<https://soc.up.edu.ph/23-write/pdf?docid=fqE73-3460&title=form-2441-credit-limit-worksheet.pdf>

## **[Area Of A Trapezoid Worksheet](#)**

“area”“region”“zone”“district”

area 60 years ago, half French people were still living in the rural area. region ...

86 1 ...

Apr 27, 2024 · 00 ...

025 0510 0511 0512 0513 0514 ...

0571 0574 0577 0575 0572 0573 0579 0570 0576 0578 0580 ...

-

020 066+ 075+ 076+ “” ...

wland -

Sep 6, 2024 · wland Wland 1. \*\* ...

+86” +086” +0086”

+0086 3 86 28 ...

-

1 0551— 2 0552— 3 0553— 4 0554— 5 0555— 6 0556— 7 0557— 8 0558— ...

manwa -

Feb 4, 2025 · manwa https://manwa.site https://manwa.life https://manwa.biz ...

“area”“region”“zone”“district”

area 60 years ago, half French people were still living in the rural area. region ...

86 1 ...

Apr 27, 2024 · 00 ...



025 0510 0511 0512 0513  
0514 0515 ...

0571 0574 0577 0575 0572 0573 0579 0570  
0576 0578 0580 ...

020066+075+076+ " " ...

Sep 6, 2024 · wland Wland 1. \*\*

$+0086$  3 ... 86 ...  
28 ...

□□□□□□□□□□□□□□□□ 1□0551—□□□ 2□0552—□□□ 3□0553—□□□ 4□0554—□□□ 5□0555—□□□□ 6□0556—□□□  
7□0557—□□□ 8□0558—□□□□□□ 9 ...

Feb 4, 2025 · [manwa](https://manwa.site) [manwa.life](https://manwa.life) [manwa.biz](https://manwa.biz) [manwa.asia](https://manwa.asia) ...

Master the area of a trapezoid with our comprehensive worksheet! Perfect for students and educators. Learn more and enhance your math skills today!

[Back to Home](#)