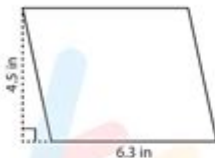


# Area Of A Parallelogram Worksheet

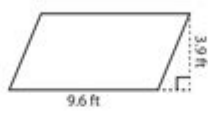
Name : \_\_\_\_\_

**Parallelogram - Area** T151


Find the area of each parallelogram.

1) 


Area =

2) 


Area =

3) 


Area =

4) 


Area =

5) 

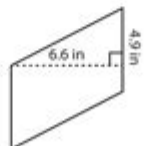
Area =

6) 

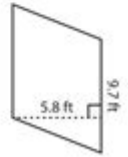
Area =

7) 

Area =

8) 

Area =

9) 

Area =

Printable Math Worksheets @ [www.mathworksheets4kids.com](http://www.mathworksheets4kids.com)

**Area of a parallelogram worksheet** is an essential educational resource that helps students understand the concept of area in relation to geometric shapes. Parallelograms, characterized by their opposite sides being equal and parallel, are a fundamental part of geometry that students encounter in their math curriculum. This article will provide a comprehensive overview of the area of a parallelogram, including formulas, examples, and tips on how to create effective worksheets for practice.

# Understanding the Parallelogram

A parallelogram is a four-sided figure (quadrilateral) where opposite sides are both equal in length and parallel. Other distinctive properties include:

- Opposite angles are equal.
- Adjacent angles are supplementary (they add up to 180 degrees).
- The diagonals bisect each other.

Common examples of parallelograms include rectangles, rhombuses, and squares. Understanding the properties of parallelograms is crucial for calculating their area accurately.

## Formula for the Area of a Parallelogram

To calculate the area of a parallelogram, you can use the following formula:

$$\text{Area} = \text{base} \times \text{height}$$

Where:

- Base refers to the length of one of the sides of the parallelogram.
- Height refers to the perpendicular distance between the base and the opposite side.

It is essential to note that the height must always be measured perpendicularly to the base, not along the slant of the sides. This distinction is often a source of confusion for students.

## Example Calculations

Let's consider a few examples to illustrate how to apply the formula:

1. Example 1: A parallelogram with a base of 10 cm and a height of 5 cm.  
-  $\text{Area} = 10 \text{ cm} \times 5 \text{ cm} = 50 \text{ cm}^2$
2. Example 2: A parallelogram with a base of 12 m and a height of 8 m.  
-  $\text{Area} = 12 \text{ m} \times 8 \text{ m} = 96 \text{ m}^2$
3. Example 3: A parallelogram with a base of 15 in and a height of 6 in.  
-  $\text{Area} = 15 \text{ in} \times 6 \text{ in} = 90 \text{ in}^2$

These examples showcase the straightforward nature of calculating the area of a parallelogram once the base and height are identified.

# Creating an Area of a Parallelogram Worksheet

Developing an effective area of a parallelogram worksheet involves several key components that will aid students in practicing and mastering the concept.

## 1. Introduction Section

Begin with a brief introduction to the parallelogram, its properties, and the formula for area. This section should clarify any foundational concepts that students need to understand before tackling problems.

## 2. Sample Problems

Include various sample problems for students to solve. These should incorporate different measurements and contexts. Here's how you can structure the problems:

- Find the area of a parallelogram with a base of 14 cm and a height of 10 cm.
- Calculate the area when the base is 20 m and the height is 15 m.
- Determine the area of a parallelogram with a base of 9 in and a height of 4 in.

## 3. Practice Section

After the sample problems, provide a practice section with a mix of straightforward and challenging problems. For instance:

1. Base = 8 cm, Height = 3 cm
2. Base = 11 m, Height = 6 m
3. Base = 5 in, Height = 12 in
4. Base = 16 cm, Height = 9 cm
5. Base = 25 m, Height = 10 m

Encourage students to show their work and write down the area calculations.

## 4. Visual Aids

Incorporate diagrams of parallelograms with labeled bases and heights. Visual aids can significantly enhance understanding and retention of the material. Providing students with a visual representation will help them grasp the concept of height better, especially when it is not aligned with the base.

## 5. Answer Key

Lastly, provide an answer key for the practice section. This will allow students to check their work and understand where they may have made mistakes. An answer key should not only provide the correct answers but also explain the steps taken to arrive at those answers when necessary.

# Benefits of Using Area of a Parallelogram Worksheets

Using worksheets focused on the area of a parallelogram provides several advantages:

- **Reinforcement of Concepts:** Worksheets help reinforce learning and ensure that students can apply the formula in various contexts.
- **Self-Paced Learning:** Students can work through the problems at their own pace, allowing for personalized learning experiences.
- **Immediate Feedback:** With an answer key, students can receive immediate feedback on their understanding and application of the concepts.
- **Preparation for Advanced Topics:** Mastering the area of a parallelogram lays the groundwork for understanding more complex geometric shapes and concepts.

## Conclusion

In conclusion, an **area of a parallelogram worksheet** is a valuable tool for students learning geometry. By practicing the calculations and understanding the properties of parallelograms, students can build a strong foundation in math. With well-structured worksheets, educators can effectively guide students towards mastery of this essential geometric concept. Whether used in class or for homework, these worksheets will enhance student engagement and provide a clear path to understanding the area of parallelograms.

## Frequently Asked Questions

### What is the formula for calculating the area of a parallelogram?

The area of a parallelogram can be calculated using the formula:  $\text{Area} = \text{base} \times \text{height}$ .

### How can I determine the height of a parallelogram if only the sides and angles are given?

You can determine the height by using the formula:  $\text{height} = \text{side} \times \sin(\text{angle})$ , where 'side' is the length of the base and 'angle' is the angle between the base and the adjacent side.

### Are there any specific tips for solving area of a parallelogram worksheets efficiently?

Yes, always identify the base and the corresponding height first. Also, look out for right angles, as they can simplify calculations.

### What types of problems can I expect to find in an area of a parallelogram worksheet?

You may encounter problems involving finding the area given dimensions, word problems that require you to set up equations, and problems that involve finding missing dimensions based on the area.

### Can the area of a parallelogram be calculated using coordinates in a coordinate plane?

Yes, you can use the coordinates of the vertices of the parallelogram. The area can be found using the formula:  $\text{Area} = 0.5 \times |(x_1y_2 + x_2y_3 + x_3y_4 + x_4y_1) - (y_1x_2 + y_2x_3 + y_3x_4 + y_4x_1)|$ .

### What common mistakes should I avoid while solving area of a parallelogram problems?

Common mistakes include confusing base and height, forgetting to use the correct units, and misapplying the formula, especially in word problems.

Find other PDF article:

<https://soc.up.edu.ph/12-quote/files?dataid=HRX17-7412&title=check-your-english-vocabulary-for-toefl.pdf>

## [Area Of A Parallelogram Worksheet](#)

“area”“region”“zone”“district”

area 60 years ago, half French people were still living in the rural area. region the Arctic regions

86 1 0 10

Apr 27, 2024 · +86 [00]

025 0510 0511 0512 0513 0514 0515 0516 0517

0571 0574 0577 0575 0572 0573 0579 0570 0576 0578 0580 20 90

020 066+ 075+ 076+ “ ” 21 65 20 34 3

wland Sep 6, 2024 · wland Wland 1. \*\*

+86 +086 +0086 3 86 28 0

1 0551— 2 0552— 3 0553— 4 0554— 5 0555— 6 0556— 7 0557— 8 0558— 9 0559— 10 0550— 11 0561— 12 0562— 13 0563— 14 0564— 15 0566—

manwa Feb 4, 2025 · manwa https://manwa.site https://manwa.life https://manwa.biz https://manwa.asia https://manwa.fun

“area”“region”“zone”“district” area 60 years ago, half French people were still living in the rural area. region the Arctic regions

86 1 0 10

Apr 27, 2024 · 00

