
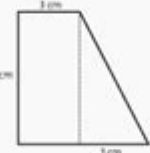
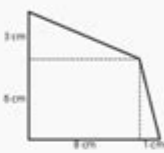
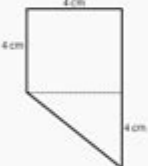
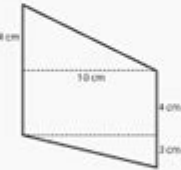
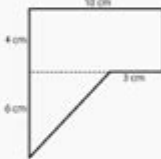

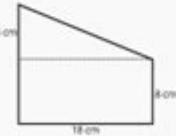



# Area Of A Compound Shape Worksheet

**Area of Compound Shapes**

Name: \_\_\_\_\_ Class: \_\_\_\_\_

Find the area of the following compound shapes (not drawn to scale).  
The dashed lines are perpendicular.

 Area: _____	 Area: _____	 Area: _____
 Area: _____	 Area: _____	 Area: _____
 Area: _____	 Area: _____	 Area: _____

copyright: [www.mathinenglish.com](http://www.mathinenglish.com)

**Area of a compound shape worksheet** provides an essential tool for students and educators alike to deepen their understanding of geometry. Compound shapes, which are formed by combining two or more simple geometric figures, can often present challenges when it comes to calculating area. This article will delve into the importance of worksheets focused on the area of compound shapes, how to approach them effectively, and various strategies to enhance learning in this area.

## Understanding Compound Shapes

Compound shapes consist of two or more basic geometric figures, such as rectangles, triangles, circles, and squares. To find the area of a compound shape, one must first break it down into its individual components, calculate the area of each component, and then combine those areas to arrive at the total area.

# Why Are Worksheets Important?

Worksheets focused on the area of compound shapes serve multiple purposes in the learning process:

- **Practice:** They provide students with the opportunity to practice and reinforce their understanding of calculating areas.
- **Assessment:** Teachers can use these worksheets to assess students' grasp of the concept and identify areas that need further instruction.
- **Engagement:** Well-designed worksheets can engage students by incorporating real-world applications and visual aids.
- **Differentiation:** Worksheets can be tailored to different skill levels, allowing for differentiated instruction.

## Components of a Compound Shape Worksheet

When creating or selecting a worksheet focused on the area of compound shapes, several key components should be included:

### 1. Clear Instructions

Each worksheet should begin with clear, concise instructions that explain how to approach the problem. This could include:

- Identifying the basic shapes within the compound shape
- Calculating the area of each individual shape
- Summing the areas to find the total area of the compound shape

### 2. Visual Representation

Visual aids are crucial in helping students understand compound shapes. Worksheets should include diagrams or illustrations of the shapes, with dimensions clearly labeled. This helps students visualize the problem and apply their knowledge effectively.

### 3. Practice Problems

A variety of practice problems should be included, ranging in difficulty to cater to different learning

levels. Problems may involve:

- Simple compound shapes formed by two rectangles
- More complex shapes involving triangles, circles, or irregular figures
- Real-world applications, such as finding the area of a garden or a room

## **4. Space for Calculations**

Providing space for students to show their work encourages them to think critically about their calculations. This could be in the form of:

- A dedicated area for writing down the formula used
- Space to outline each step taken in the calculation process

## **5. Answer Key**

An answer key is essential for self-assessment. It allows students to check their work and understand any mistakes they may have made.

# **Strategies for Solving Area of Compound Shapes Problems**

To successfully calculate the area of compound shapes, students can employ several strategies:

## **1. Decomposing the Shape**

The first step in solving a compound shape problem is to decompose the shape into its constituent parts. This means identifying the simple shapes that make up the compound shape and drawing them separately if necessary.

## **2. Using Area Formulas**

Once the shapes are identified, students should use the appropriate area formulas for each shape. Here are some common area formulas to remember:

- Rectangle:  $\text{Area} = \text{length} \times \text{width}$
- Triangle:  $\text{Area} = 0.5 \times \text{base} \times \text{height}$
- Circle:  $\text{Area} = \pi \times \text{radius}^2$

### 3. Calculating Each Area

After applying the formulas, students should calculate the area for each individual shape. It's important to keep track of units and measure consistently throughout the problem.

### 4. Summing the Areas

The final step is to sum the areas of all the individual shapes to find the total area of the compound shape. Encourage students to double-check their work to avoid simple arithmetic errors.

## Tips for Teachers

When creating or using area of a compound shape worksheets, educators can incorporate several tips to enhance the learning experience:

- **Use Real-World Examples:** Incorporate problems that relate to real-life scenarios, such as calculating areas for landscaping or architecture.
- **Encourage Group Work:** Allow students to work in pairs or small groups to promote collaboration and discussion.
- **Integrate Technology:** Use digital tools and apps that allow for interactive learning and visualization of compound shapes.
- **Provide Feedback:** Offer constructive feedback on students' work to help them understand their mistakes and improve their skills.

## Conclusion

A **compound shape worksheet** is an invaluable resource in the world of geometry education, fostering a deeper understanding of area calculation through practice and application. By breaking down complex shapes into simpler parts and employing effective strategies, students can master the skill of calculating the area of compound shapes. As educators, it's essential to provide the right tools, support, and encouragement to help students navigate these challenges successfully. Whether used in the classroom or for homework assignments, these worksheets pave the way for a solid foundation in geometric reasoning and problem-solving skills.

# Frequently Asked Questions

## What is a compound shape?

A compound shape is a shape that is made up of two or more simple shapes, such as rectangles, triangles, and circles.

## How do you calculate the area of a compound shape?

To calculate the area of a compound shape, you break it down into its simple shapes, calculate the area of each shape, and then sum those areas.

## What are some common simple shapes used in compound shapes?

Common simple shapes include rectangles, squares, triangles, circles, and trapezoids.

## Can you give an example of a compound shape?

An example of a compound shape is a house that consists of a rectangle for the base and a triangle for the roof.

## Is it necessary to use formulas for all shapes when calculating area?

Yes, each shape has its own formula for calculating area, so it's important to use the correct formulas for each of the simple shapes in the compound shape.

## What tools are needed to complete an area of a compound shape worksheet?

You typically need a ruler, a pencil, and possibly a calculator for more complex calculations.

## Are there any online resources for practicing area of compound shapes?

Yes, there are many educational websites that offer worksheets and interactive exercises for practicing the area of compound shapes.

## How can I check my work on a compound shape area worksheet?

You can check your work by reviewing your calculations, using a different method to find the area, or comparing your answers with a solution guide.

## What grade level is typically assigned area of compound shape

## worksheets?

Area of compound shape worksheets are commonly assigned to students in grades 4 to 6, depending on the curriculum.

Find other PDF article:

<https://soc.up.edu.ph/57-chart/Book?trackid=ATk26-1830&title=taylor-swift-figurative-language.pdf>

## Area Of A Compound Shape Worksheet

“area” “region” “zone” “district”

area 60 years ago, half French people were still living in the rural area. region ...

□□□□□□□□□□□□□□□□□□□□

[illegible][illegible]

□ □ □ □ □ □ □ □ □ □ □ □ □ □ □ □ □ □

025 0510 0511 0512 0513  
0514 ...

□ □ □ □ □ □ □ □ □ □ □ □ □ □ □ □ □ □

0571 0574 0577 0575 0572 0573 0579 0570  
0576 0578 0580 ...

-

020066+075+076+ “ ”  
 ...

wland□□□□□□ - □□□□

Sep 6, 2024 · wlandWland1. \*\*\*\* ...

□□□□□□□□" +86"□□□" +086"□" +0086" □□□□

+0086 3  
86  
28 ...

□□□□□□□□□□ - □□□□

0000000000000000 10551-000 20552-000 30553-000 40554-000 50555-0000 60556-000  
70557-000 80558-0000 ...

*manwa*□□□□□□□□ - □□□□

Feb 4, 2025 · [manwa](https://manwa.site) <https://manwa.life> <https://manwa.biz> ...

“area” “region” “zone” “district”

area 60 years ago, half French people were still living in the rural area. region the Arctic regions

□ □ □ □ □ □ □ □ □ □ □ □ □ □ □ □ □ □ □ □

[illegible]

Apr 27, 2024 · [REDACTED]00  
[REDACTED]+86[REDACTED][REDACTED]

□□□□□□□□□□□□□□□□□□□□

02505100511051205130514051505160517

□□□□□□□□□□□□□□□□□□□□

```
0571 0574 0577 0575 0572 0573 0579 0570  
0576 0578 0580 ...
```

□□□□□□□□ - □□□□

020066+075+076+ “ ” 21 65 20 34 3 ...

*wland* 11111111 - 1111

Sep 6, 2024 · wland Wland 1. \*\*

□□□□□□□□“+86”□□□“+086”□“+0086”□□□□

+0086 3  
 86  
 28 0 ...

□□□□□□□□□□ - □□□□

□□□□□□□□□□□□□□□□ 1□0551—□□□ 2□0552—□□□ 3□0553—□□□ 4□0554—□□□ 5□0555—□□□□ 6□0556—□□□  
7□0557—□□□□ 8□0558—□□□□□□ 9□0559—□□□□ 10□0550—□□□□ 11□0561—□□□□ 12□0562—□□□□ 13□0563—□  
□□□□ 14□0564—□□□□ 15□0566—□□□□ □□□□ ...

*manwa*□□□□□□□□ - □□□□

Feb 4, 2025 · [manwa](https://manwa.site) <https://manwa.life> <https://manwa.biz> <https://manwa.asia> <https://manwa.fun> ...

Master the area of a compound shape with our comprehensive worksheet! Perfect for students

[Back to Home](#)