

Area And Perimeter Of Quadrilaterals Worksheet

Name : _____

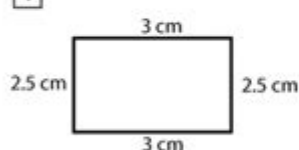
Score : _____ Date : _____



Perimeter of Quadrilateral Worksheet

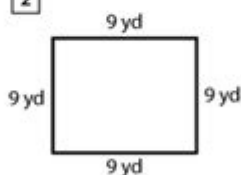
Find the perimeter of each given quadrilateral

1



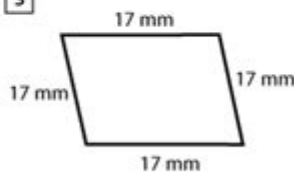
Perimeter = _____

2



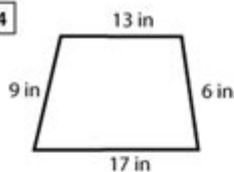
Perimeter = _____

3



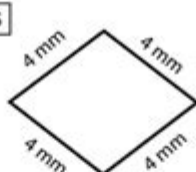
Perimeter = _____

4



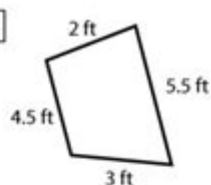
Perimeter = _____

5



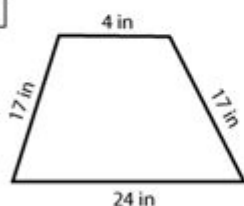
Perimeter = _____

6



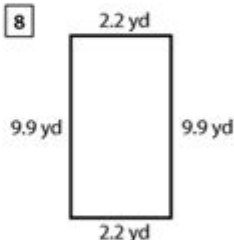
Perimeter = _____

7



Perimeter = _____

8



Perimeter = _____

Area and perimeter of quadrilaterals worksheet is an essential resource for students learning about the properties and measurements of various four-sided shapes. Understanding area and perimeter is fundamental in geometry, as these concepts not only apply to academic settings but also to real-life situations such as construction, design, and various fields of engineering. This article provides a comprehensive overview of quadrilaterals, their characteristics, how to calculate their area and

perimeter, and how to effectively use worksheets to enhance learning.

Understanding Quadrilaterals

Quadrilaterals are polygons that have four sides, four vertices, and four angles. They are one of the most fundamental shapes in geometry and can be classified into several categories based on their properties:

Types of Quadrilaterals

1. Square: All four sides are equal, and all angles are right angles (90 degrees).
2. Rectangle: Opposite sides are equal, and all angles are right angles.
3. Rhombus: All sides are equal, but angles are not necessarily 90 degrees.
4. Parallelogram: Opposite sides are equal, and opposite angles are equal; adjacent angles are supplementary.
5. Trapezoid (or Trapezium): At least one pair of opposite sides is parallel.
6. Kite: Two pairs of adjacent sides are equal.

Each type has its unique properties that affect how we calculate area and perimeter.

Calculating Area and Perimeter

To work effectively with quadrilaterals, it is vital to understand the formulas used to calculate both area and perimeter. Here's a breakdown of the formulas for each type of quadrilateral:

1. Square

- Area: $A = s^2$
- Perimeter: $P = 4s$
- Where s is the length of one side.

2. Rectangle

- Area: $A = l \times w$
- Perimeter: $P = 2(l + w)$
- Where l is the length and w is the width.

3. Rhombus

- Area: $A = \frac{d_1 \times d_2}{2}$
- Perimeter: $P = 4s$
- Where d_1 and d_2 are the lengths of the diagonals, and s is the length of a side.

4. Parallelogram

- Area: $A = b \times h$
- Perimeter: $P = 2(b + s)$
- Where b is the length of the base, h is the height, and s is the length of the side.

5. Trapezoid

- Area: $A = \frac{(b_1 + b_2) \times h}{2}$
- Perimeter: $P = a + b_1 + b_2 + c$
- Where b_1 and b_2 are the lengths of the two bases, h is the height, and a and c are the lengths of the non-parallel sides.

6. Kite

- Area: $A = \frac{d_1 \times d_2}{2}$
- Perimeter: $P = 2(a + b)$
- Where d_1 and d_2 are the diagonals, and a and b are the lengths of the two pairs of equal sides.

Utilizing Worksheets for Learning

Worksheets are a practical tool for reinforcing the concepts of area and perimeter in quadrilaterals. They help students practice calculations and apply formulas effectively. Here are some ways to utilize worksheets effectively:

1. Problem Sets

Create a variety of problems that require students to calculate the area and perimeter of different quadrilaterals. For example:

- Calculate the area and perimeter of a rectangle with a length of 8 cm and a width of 5 cm.
- Find the area of a rhombus with diagonals of 10 cm and 24 cm.

2. Real-Life Applications

Design problems that relate to real-life scenarios. For instance:

- If you want to create a garden shaped like a trapezoid, how much area will it cover if the two bases are 12 m and 8 m, and the height is 5 m?
- A square swimming pool has a side length of 10 m. What is the total perimeter that needs to be tiled around it?

3. Visual Aids

Incorporate visual aids in worksheets. Use diagrams of various quadrilaterals and ask students to label sides, angles, and diagonals. This can enhance their understanding and make the learning process more engaging.

4. Group Activities

Encourage collaborative learning through group activities. Students can work together to solve problems or create their own quadrilateral-related challenges for peers.

Tips for Success in Calculating Area and Perimeter

To excel in calculating area and perimeter, students can follow these tips:

- Understand the Formulas: Memorize the formulas for each type of quadrilateral and practice applying them in different scenarios.
- Draw Diagrams: Visualizing the shapes can help clarify their properties and assist in calculations.
- Check Units: Always ensure the units are consistent. Convert measurements when necessary.
- Practice Regularly: Consistent practice through worksheets and exercises reinforces learning and builds confidence.

Conclusion

A area and perimeter of quadrilaterals worksheet serves as an invaluable resource for students to master the measurement of four-sided shapes. By understanding the characteristics of various

quadrilaterals and applying the correct formulas, students can effectively calculate area and perimeter. Worksheets not only provide practice but also engage students in real-world applications, enhancing their overall understanding of geometry. Through consistent practice and application, students will gain confidence and proficiency in working with quadrilaterals, laying a strong foundation for more advanced mathematical concepts.

Frequently Asked Questions

What is the formula to calculate the area of a rectangle?

The area of a rectangle is calculated using the formula: $\text{Area} = \text{length} \times \text{width}$.

How do you find the perimeter of a square?

The perimeter of a square is found using the formula: $\text{Perimeter} = 4 \times \text{side length}$.

What is the difference between area and perimeter?

Area measures the space inside a shape, while perimeter measures the distance around the shape.

Can the area of a quadrilateral be calculated using the coordinates of its vertices?

Yes, the area of a quadrilateral can be calculated using the shoelace formula if the coordinates of its vertices are known.

What is the formula for the area of a parallelogram?

The area of a parallelogram is calculated using the formula: $\text{Area} = \text{base} \times \text{height}$.

How do you calculate the perimeter of a trapezoid?

The perimeter of a trapezoid is calculated by adding the lengths of all four sides: $\text{Perimeter} = a + b + c + d$.

+ d, where a and b are the lengths of the parallel sides.

What types of quadrilaterals can be included in a worksheet for area and perimeter?

A worksheet can include various types of quadrilaterals such as rectangles, squares, parallelograms, trapezoids, and rhombuses.

Find other PDF article:
<https://soc.up.edu.ph/04-ink/files?docid=jVT21-2543&title=active-reading-great-expectations-chapters-32-45-answers.pdf>

Area And Perimeter Of Quadrilaterals Worksheet

“area”“region”“zone”“district”
area 60 years ago, half French people were still living in the rural area. region ...
86 1
...
Apr 27, 2024 · 00
...
025 0510 0511 0512 0513
0514
...
0571 0574 0577 0575 0572 0573 0579 0570
0576 0578 0580 ...
020 066+ 075+ 076+ “”
...
wland
Sep 6, 2024 · wland 1. **
...
+86” +086” +0086”

+0086 3 86 28 ...

10551—20552—30553—40554—50555—60556—70557—80558— ...

manwa - Feb 4, 2025 · manwa https://manwa.site https://manwa.life https://manwa.biz ...

“area”“region”“zone”“district” area 60 years ago, half French people were still living in the rural area. region ...

86 1 ...

Apr 27, 2024 · 00 ...

02505100511051205130514 ...

0571 0574 0577 0575 0572 05730579 0570 0576 0578 0580 ...

020066+075+076+ “” ...

wland - Sep 6, 2024 · wlandWland1. ** ...

+86” +086” +0086” +0086 3 86 28 ...

10551—20552—30553—40554—50555—60556—70557—80558— ...

manwa - Feb 4, 2025 · manwa https://manwa.site https://manwa.life https://manwa.biz ...

Enhance your math skills with our area and perimeter of quadrilaterals worksheet! Perfect for practice and mastering concepts. Learn more today!

[Back to Home](#)