


Area Of A Parallelogram Worksheets

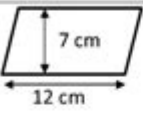
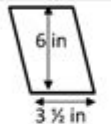
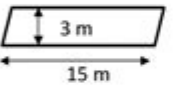
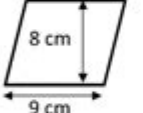
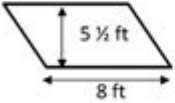
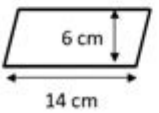
Name


Date



AREA OF A PARALLELOGRAM SHEET 1

Use the base and height measurement to find the area of these parallelograms.

	WORKING OUT	AREA
1) 		
2) 		
3) 		
4) 		
5) 		
6) 		

Free Math sheets, Math games and Math help
MATH-SALAMANDERS.COM

Area of a parallelogram worksheets are essential educational tools designed to help students understand the geometric properties and calculations related to parallelograms. These worksheets provide a structured approach to learning how to compute the area of parallelograms, reinforcing mathematical concepts through practice and application. In this article, we will explore the definition of a parallelogram, the formula for calculating its area, the importance of worksheets in learning, types of worksheets available, tips for effective use, and additional resources for further study.

Understanding Parallelograms and Their

Properties

A parallelogram is a four-sided polygon (quadrilateral) with opposite sides that are both equal in length and parallel. The key properties of a parallelogram include:

- Opposite sides are equal: If one side measures 'a', the opposite side also measures 'a'.
- Opposite angles are equal: If one angle measures 'A', the opposite angle also measures 'A'.
- Adjacent angles are supplementary: The sum of the measures of adjacent angles equals 180 degrees.
- Diagonals bisect each other: The diagonals of a parallelogram intersect each other at their midpoints.

Common types of parallelograms include rectangles, rhombuses, and squares, each having unique properties but sharing the foundational characteristics of parallelograms.

Formula for Calculating the Area of a Parallelogram

The area of a parallelogram can be calculated using the formula:

$$\text{Area} = \text{base} \times \text{height}$$

Where:

- The base is the length of one side of the parallelogram.
- The height is the perpendicular distance from the base to the opposite side.

To illustrate how this formula works, consider the following example:

- If a parallelogram has a base of 10 cm and a height of 5 cm, its area would be calculated as follows:

$$\text{Area} = 10 \text{ cm} \times 5 \text{ cm} = 50 \text{ cm}^2$$

Understanding how to identify the base and height is crucial, especially since the height must be measured at a right angle to the base.

The Importance of Area of a Parallelogram Worksheets

Worksheets focusing on the area of parallelograms serve several educational purposes:

1. Reinforcement of Concepts: They help reinforce the understanding of the properties of parallelograms and the area calculation formula through repeated practice.

2. Skill Development: Worksheets enhance problem-solving and critical thinking skills as students learn to apply the area formula in various contexts.
3. Assessment: They provide a means for teachers to assess students' understanding and ability to calculate the area of parallelograms.
4. Engagement: Worksheets can incorporate visual elements and real-world applications, making learning more engaging and relevant.

Types of Area of a Parallelogram Worksheets

There are several types of worksheets available for learning about the area of parallelograms:

1. Basic Calculation Worksheets

These worksheets focus on straightforward problems where students are given the base and height of a parallelogram and asked to calculate the area. For example:

- Calculate the area of a parallelogram with a base of 8 cm and a height of 4 cm.
- Find the area of a parallelogram with a base of 12 m and a height of 6 m.

2. Application Problems

These worksheets present real-life scenarios where students must apply their knowledge of parallelograms to solve problems. For instance:

- A garden is shaped like a parallelogram with a base of 15 ft and a height of 10 ft. Calculate the area to determine how much soil is needed for planting.
- A parallelogram-shaped plot of land has a base of 20 m and a height of 8 m. What is the area of the plot?

3. Mixed Review Worksheets

These worksheets combine various problems related to parallelograms, including calculations of area, perimeter, and properties. This type helps in consolidating knowledge and preparing for assessments.

4. Challenge Worksheets

For advanced learners, challenge worksheets may include complex problems that require multi-step solutions or involve the application of the area formula in conjunction with other geometric principles.

Tips for Using Area of a Parallelogram Worksheets Effectively

To maximize the benefits of area of a parallelogram worksheets, consider the following tips:

1. Start with the Basics: Ensure students have a solid understanding of parallelogram properties before tackling area calculations.
2. Use Visual Aids: Incorporate diagrams and illustrations to help students visualize the problem and understand where base and height are located.
3. Encourage Step-by-Step Solutions: Teach students to break down problems into smaller steps, clearly identifying the base and height before performing calculations.
4. Practice Regularly: Regular practice helps to reinforce concepts, so make worksheets a part of the routine.
5. Provide Feedback: After students complete worksheets, offer constructive feedback to help them understand mistakes and improve their skills.

Additional Resources for Learning About Parallelograms

In addition to worksheets, several resources can further enhance understanding of the area of parallelograms:

- Online Interactive Tools: Websites and apps that allow students to manipulate parallelograms and see how changes affect area can provide valuable hands-on experience.
- Video Tutorials: Educational videos can explain the concepts in a dynamic way, providing visual and auditory learning opportunities.
- Math Games: Engaging in math games that focus on geometry can make learning fun while reinforcing skills.
- Books and Textbooks: Many math textbooks offer exercises and examples related to parallelograms, providing additional practice opportunities.

Conclusion

In summary, area of a parallelogram worksheets are vital for students to grasp geometric concepts and improve their calculation skills. By understanding the properties of parallelograms and applying the area formula, students can solve various problems effectively. With the right approach to using these worksheets and a variety of resources at their disposal, learners can achieve a deeper understanding of geometry that will benefit them in their academic pursuits. As they practice consistently, students will become more confident in their mathematical abilities, equipping them for future challenges in mathematics and related disciplines.

Frequently Asked Questions

What is the formula for calculating the area of a parallelogram?

The area of a parallelogram can be calculated using the formula: $\text{Area} = \text{base} \times \text{height}$.

What types of problems can be found in area of a parallelogram worksheets?

Worksheets typically include problems that require calculating the area given the base and height, finding missing dimensions, and word problems involving real-life applications of parallelograms.

How can area of a parallelogram worksheets help students in geometry?

These worksheets help students practice and reinforce their understanding of the properties of parallelograms, improve their problem-solving skills, and prepare for geometry exams.

Are there any online resources for area of a parallelogram worksheets?

Yes, there are many online platforms offering free and paid worksheets, including interactive quizzes, printable PDFs, and step-by-step tutorials on how to calculate the area of parallelograms.

What grade levels are area of a parallelogram worksheets suitable for?

Area of a parallelogram worksheets are generally suitable for middle school students, typically around grades 6 to 8, but they can also be used for advanced elementary students or high school students reviewing basic concepts.

Find other PDF article:

<https://soc.up.edu.ph/14-blur/files?ID=ckL20-4252&title=colonial-williamsburg-history-facts.pdf>

Area Of A Parallelogram Worksheets

“area” “region” “zone” “district” □□□□□□ □□□□

area 60 years ago, half French people were still living in the ...

□□□□□□ □□□□ □□□ □□□□□□□□□□ □□□□86□□□□□□□□□□□□□□□□□□□□ ...

Apr 27, 2024 · ...

02505100511...

0571 0574 0577 0575 0572 0573 0579 ...

area 60 years ago, half French people were still living in the rural ...

□□□□□□ □□□□ □□□□ □□□□□□□□□□ □□□□86□□□□□□□□□□□□□□□□□□□□□□□□ □□□□ ...

[illegible]

025051005110512...

0571 0574 0577 0575 0572 0573 0579 0570
...

[Back to Home](#)