

Area Of Triangles And Trapezoids Worksheet

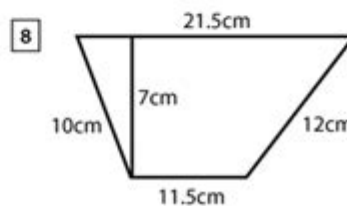
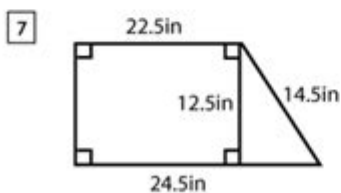
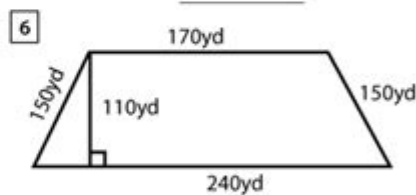
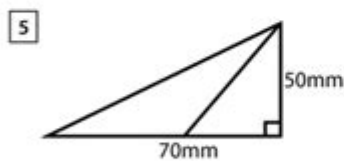
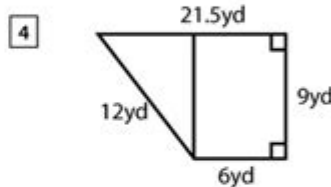
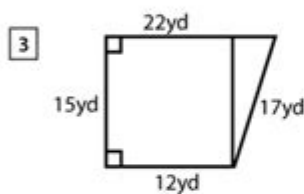
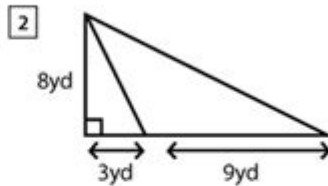
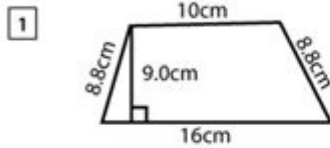
Name : _____

Score : _____ Date : _____



Area of Triangles and Trapezoids Worksheet

Find the area of each of the following figures



Area of triangles and trapezoids worksheet is an essential educational resource that helps students understand the concepts of calculating areas for these two fundamental geometric shapes. Mastering the area calculations for triangles and trapezoids not only enhances mathematical skills but also prepares students for more advanced topics in geometry and real-world applications. This article will explore the formulas, provide examples, and explain how to create effective worksheets that facilitate learning.

Understanding Area: The Basics

Before diving into the specifics of triangles and trapezoids, it's crucial to understand what area means in a geometric context. The area of a shape refers to the amount of space enclosed within its boundaries. For students, grasping the concept of area is essential as it forms the basis for solving more complex problems in geometry and various real-life situations.

Why Worksheets are Important

Worksheets serve as a valuable tool in reinforcing mathematical concepts. They offer students the opportunity to practice their skills independently and at their own pace. Here are a few reasons why worksheets focused on the area of triangles and trapezoids are beneficial:

- Reinforcement of Concepts: Worksheets allow students to apply what they have learned about area calculations through practice.
- Variety of Problems: A well-structured worksheet can present a range of problems, from basic to advanced, catering to different learning levels.
- Immediate Feedback: Students can self-check their answers, helping them to identify areas where they may need further clarification.
- Skill Development: Regular practice enhances problem-solving skills and boosts confidence in handling geometric calculations.

Calculating the Area of Triangles

The area of a triangle can be found using a simple formula. Regardless of the triangle's type—equilateral, isosceles, or scalene—the area can be calculated using the formula:

Formula for Area of a Triangle

$$\text{Area} = \frac{1}{2} \times \text{base} \times \text{height}$$

Where:

- Base is the length of one side of the triangle, typically the bottom side.
- Height is the perpendicular distance from the base to the opposite vertex.

Examples of Area Calculations

1. Example 1:

- Base = 6 cm
- Height = 4 cm
- Area = $\left(\frac{1}{2} \right) \times 6 \times 4 = 12 \text{ cm}^2$

2. Example 2:

- Base = 10 m
- Height = 5 m
- Area = $\left(\frac{1}{2} \right) \times 10 \times 5 = 25 \text{ m}^2$

Exploring Different Types of Triangles

Understanding different types of triangles can help students appreciate the versatility of the area formula and how it applies to various shapes.

Types of Triangles

- Equilateral Triangle: All sides are equal, and the height can be derived using the Pythagorean theorem.
- Isosceles Triangle: Two sides are equal, and the height can be dropped from the vertex opposite the base.
- Scalene Triangle: All sides and angles are different; the area can be calculated using Heron's formula if the side lengths are known.

Calculating the Area of Trapezoids

Trapezoids, also known as trapezia, are four-sided shapes (quadrilaterals) that have at least one pair of parallel sides. The area of a trapezoid can be calculated using the following formula:

Formula for Area of a Trapezoid

$$\text{Area} = \frac{1}{2} \times (b_1 + b_2) \times h$$

Where:

- b_1 and b_2 are the lengths of the two parallel sides (bases).
- h is the height, which is the perpendicular distance between the bases.

Examples of Area Calculations

1. Example 1:

- Base 1 (b_1) = 8 cm
- Base 2 (b_2) = 5 cm
- Height (h) = 4 cm
- Area = $\left(\frac{1}{2}\right) \times (8 + 5) \times 4 = 26 \text{ cm}^2$

2. Example 2:

- Base 1 (b_1) = 12 m
- Base 2 (b_2) = 7 m
- Height (h) = 3 m
- Area = $\left(\frac{1}{2}\right) \times (12 + 7) \times 3 = 28.5 \text{ m}^2$

Creating an Area of Triangles and Trapezoids Worksheet

When designing a worksheet for practicing area calculations, it's essential to consider the following elements to ensure that it is effective and engaging.

Components of an Effective Worksheet

1. Clear Instructions: Begin with a section outlining what the students will be doing. For example, "Calculate the area of the following triangles and trapezoids using the provided formulas."
2. Variety of Problems: Include a mix of problem types:
 - Basic problems that require direct application of the formulas.
 - Word problems that present real-life scenarios.
 - Problems that require students to find missing dimensions given the area.
3. Space for Work: Provide ample space for students to show their calculations. This promotes good mathematical practices and helps teachers assess their thought processes.
4. Visual Aids: Incorporate diagrams of triangles and trapezoids for students to label dimensions, enhancing their understanding of the shapes.
5. Answer Key: Include an answer key for self-assessment, enabling students to check their work and learn from their mistakes.

Sample Worksheet Structure

- Title: Area of Triangles and Trapezoids Worksheet
- Instructions: Calculate the area for each figure.

- Problems:

1. Triangle with a base of 5 cm and height of 3 cm.
2. Trapezoid with bases of 10 m and 6 m, and a height of 4 m.
3. Triangle with a base of 8 in and height of 5 in.
4. Trapezoid with bases of 12 cm and 8 cm, and a height of 3 cm.

- Answer Key:

1. 7.5 cm^2
2. 32 m^2
3. 20 in^2
4. 30 cm^2

Conclusion

The area of triangles and trapezoids worksheet is an invaluable resource for students learning geometry. By focusing on the formulas, providing varied practice problems, and creating effective worksheets, educators can significantly enhance their students' understanding of area calculations. Mastery of these concepts not only aids in academic success but also equips students with essential skills for everyday problem-solving and future mathematical challenges. Through continued practice, students can develop confidence in their abilities and lay a strong foundation for more advanced studies in geometry and beyond.

Frequently Asked Questions

What is the formula for calculating the area of a triangle?

The area of a triangle can be calculated using the formula $A = \frac{1}{2} \text{ base height}$.

How do you find the area of a trapezoid?

The area of a trapezoid is calculated using the formula $A = \frac{1}{2} (\text{base1} + \text{base2}) \text{ height}$.

What are some common mistakes to avoid when calculating the area of triangles?

Common mistakes include using the wrong base or height, forgetting to divide by 2, or mixing up units.

Can the area of a triangle be found using its side lengths?

Yes, you can use Heron's formula, which is $A = \sqrt{s(s-a)(s-b)(s-c)}$, where s is the semi-perimeter ($s = (a+b+c)/2$).

What is the significance of the height in the area calculation of triangles?

The height is crucial as it represents the perpendicular distance from the base to the opposite vertex, essential for accurate area calculation.

How can I create a worksheet for practicing area calculations of triangles and trapezoids?

You can create a worksheet by including various triangle and trapezoid figures with their dimensions and asking students to calculate the areas.

What units should be used when calculating the area of triangles and trapezoids?

The area should be expressed in square units, such as square centimeters (cm^2) or square meters (m^2), depending on the dimensions used.

Are there any online resources for practicing area calculations of triangles and trapezoids?

Yes, many educational websites like Khan Academy and Math is Fun offer interactive exercises and worksheets on this topic.

What is the area of a triangle with a base of 10 cm and a height of 5 cm?

The area is $A = \frac{1}{2} \times 10 \times 5 = 25 \text{ cm}^2$.

How do I solve problems involving composite shapes that include triangles and trapezoids?

First, break the composite shape into simpler shapes (triangles and trapezoids), calculate the area of each, and then sum them up.

Find other PDF article:

<https://soc.up.edu.ph/25-style/pdf?docid=nYF20-3396&title=go-math-chapter-3-answer-key.pdf>

Area Of Triangles And Trapezoids Worksheet

“area” “region” “zone” “district” 区域 地区

area 地区 60 years ago, half French people were still living in the rural area. region 地区 ...

0571 0574 0577 0575 0572 0573 0579 0570
0576 0578 0580 2090

020+066+075+076+ “ ” 21 65 20 34 3 ...

Sep 6, 2024 · wland[Wland1. **]** ...

[illegible]

□□□□□□□□□□□□□□□□ 1□0551—□□□ 2□0552—□□□ 3□0553—□□□ 4□0554—□□□ 5□0555—□□□□ 6□0556—□□□
7□0557—□□□□ 8□0558—□□□□□□ 9□0559—□□□ 10□0550—□□□ 11□0561—□□□ 12□0562—□□□ 13□0563—□
□□ 14□0564—□□□□ 15□0566—□□□□ □□□□ ...

Feb 4, 2025 · [manwa](https://manwa.site) <https://manwa.life> <https://manwa.biz> <https://manwa.asia> <https://manwa.fun> ...

[Back to Home](#)