

Area Of Rectangles And Parallelograms Worksheet

Testinar.com

 Area of Squares, Rectangles, and Parallelograms

Name:

Date:



Find the area of each.


1)



2)



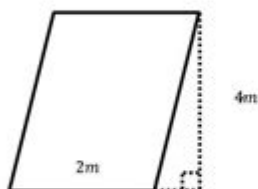
3)



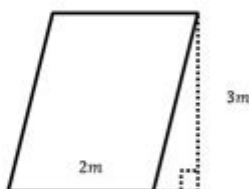
4)





5)



6)



 So Much More Online! Please visit: testinar.com 

QUIZ ? MORE ?

Area of rectangles and parallelograms worksheet is an essential educational tool that aids students in mastering the concepts of area measurement, particularly in two-dimensional shapes like rectangles and parallelograms. These shapes are fundamental in geometry and have various practical applications in real life, from architecture to everyday tasks like gardening. This article will delve into the importance of understanding the area of these shapes, the formulas involved, how to create effective worksheets, and tips for teaching these concepts to students of varying ages and skill levels.

Understanding the Basics

What is Area?

Area refers to the amount of space contained within a two-dimensional shape. It is measured in square units (such as square meters, square centimeters, and square inches), and understanding area is crucial for various fields, including mathematics, engineering, architecture, and more.

Rectangles and Parallelograms

Both rectangles and parallelograms are quadrilaterals, meaning they have four sides. However, they have distinct characteristics that set them apart:

- Rectangle: A rectangle is a quadrilateral with opposite sides that are equal in length and all angles measuring 90 degrees. The formula for calculating the area of a rectangle is:

$$\text{Area} = \text{length} \times \text{width}$$

- Parallelogram: A parallelogram has opposite sides that are equal in length and parallel, but the angles are not necessarily 90 degrees. The area of a parallelogram can be calculated using the formula:

$$\text{Area} = \text{base} \times \text{height}$$

Understanding these definitions and formulas is the first step in creating a comprehensive area of rectangles and parallelograms worksheet.

Importance of Worksheets in Learning

Worksheets serve as a practical resource for reinforcing theoretical knowledge through practice. Here are several reasons why worksheets focused on area measurement are beneficial:

1. Skill Reinforcement: Worksheets provide students with opportunities to practice problems, which helps reinforce their understanding of the concepts.
2. Assessment Tools: Teachers can use completed worksheets to assess students' comprehension and identify areas where they may need further instruction.

3. Encourages Independent Learning: Worksheets enable students to work at their own pace, allowing for a more personalized learning experience.
4. Variety of Problems: They can include a range of problem types, from straightforward calculations to word problems that require critical thinking.

Creating an Effective Worksheet

Designing an effective worksheet involves several steps. Here's how to create a worksheet that will benefit students in learning about the area of rectangles and parallelograms:

1. Introduce the Topic with Clear Instructions

- Begin with a brief introduction to the concepts of area, rectangles, and parallelograms.
- Provide clear instructions on how to use the worksheet. Specify whether students should show their work and how to format their answers.

2. Include Definitions and Formulas

- At the top of the worksheet, include the definitions of rectangles and parallelograms.
- Clearly write out the formulas for calculating the area of both shapes.

3. Variety of Problem Types

Include a mix of problem types to cater to different learning styles and levels of understanding:

- Basic Calculation Problems: Simple problems where students calculate the area given the length and width or base and height.

Example:

- Find the area of a rectangle with a length of 8 cm and a width of 5 cm.

- Word Problems: Real-life scenarios that require students to apply their knowledge of area.

Example:

- A garden is shaped like a rectangle that is 10 meters long and 4 meters wide. What is the area of the garden?

- **Mixed Problems:** Problems that require students to identify whether they are dealing with a rectangle or a parallelogram.

Example:

- A parallelogram has a base of 12 m and a height of 5 m. What is its area?

4. Incorporate Visual Aids

- Include diagrams of rectangles and parallelograms with labeled dimensions. Visual aids can help students better understand the concepts.
- Encourage students to draw their own diagrams where applicable to enhance their spatial reasoning.

5. Create Challenge Problems

- For advanced students, add problems that require additional steps or critical thinking.

Example:

- If the area of a rectangle is 60 square meters and the length is twice the width, what are the dimensions of the rectangle?

6. Provide an Answer Key

- Include an answer key at the end of the worksheet for teachers or students to check their work.
- Consider providing explanations for each answer to further facilitate understanding.

Tips for Teaching Area Concepts

To effectively teach the area of rectangles and parallelograms, consider the following strategies:

- **Hands-On Activities:** Use physical objects to represent rectangles and parallelograms. For example, have students create shapes using paper or manipulatives and calculate the area.
- **Real-World Applications:** Show students how the concept of area applies in real life, such as calculating the area for painting a wall, laying flooring, or landscaping.
- **Group Work:** Encourage collaborative learning by having students work in pairs or groups to solve problems. This can help build communication skills and allow peer teaching.
- **Technology Integration:** Utilize digital tools and online resources that provide interactive problem-solving

experiences.

Conclusion

In conclusion, a well-crafted area of rectangles and parallelograms worksheet is an invaluable resource for teaching students about the measurement of area. By incorporating a variety of problem types, visual aids, and clear instructions, educators can create an engaging learning experience that promotes understanding and application of mathematical concepts. Mastery of these concepts not only builds a strong foundation in geometry but also prepares students for more advanced mathematical studies in the future. Through practice, real-world applications, and innovative teaching strategies, students will gain confidence in their ability to calculate areas, paving the way for success in both academic and practical pursuits.

Frequently Asked Questions

What is the formula for calculating the area of a rectangle?

The area of a rectangle is calculated using the formula: $\text{Area} = \text{length} \times \text{width}$.

How do you calculate the area of a parallelogram?

The area of a parallelogram is calculated using the formula: $\text{Area} = \text{base} \times \text{height}$.

What are some common dimensions used in area of rectangles and parallelograms worksheets?

Common dimensions include whole numbers, fractions, and decimals representing lengths and widths or bases and heights.

What is the importance of understanding the area of rectangles and parallelograms in real life?

Understanding the area is important for tasks such as calculating space for flooring, painting walls, or designing layouts.

Can the area of rectangles and parallelograms be expressed in different units?

Yes, the area can be expressed in various units such as square meters, square feet, or square centimeters, depending on the context.

What types of problems are typically included in area of rectangles and parallelograms worksheets?

Problems often include finding the area given dimensions, solving word problems, and comparing areas of different shapes.

How can visual aids enhance understanding of area calculations in worksheets?

Visual aids like diagrams or grid paper help students better visualize dimensions and understand the concept of area through practical examples.

Are there online resources available for practicing area of rectangles and parallelograms?

Yes, many educational websites offer interactive worksheets, quizzes, and tutorials for practicing the area of rectangles and parallelograms.

Find other PDF article:

<https://soc.up.edu.ph/52-snap/pdf?ID=ZII79-3330&title=scholastic-lit-camp-leaders-guide.pdf>

Area Of Rectangles And Parallelograms Worksheet

“area” “region” “zone” “district” □□□□□□ □□□□

area 60 years ago, half French people were still living in the rural area. region ...

☐ ☐ ☐ ☐ ☐ ☐ ☐ ☐ ☐ ☐ ☐ ☐ ☐ ☐ ☐ ☐ ☐ ☐ ☐

☐ ...

□ □ □ □ □ □ □ □ □ □ □ □ □ □ □ □ □ □ □ □

Apr 27, 2024 ·

□ □ □ □ □ □ □ □ □ □ □ □ □ □ □ □ □ □

02505100511051205130514 ...

```

00000000000000000000 0571 0000 0574 0000 0577 0000 0575 0000 0572 0000 0573 0000 0579 0000 0570
0000 0576 0000 0578 0000 0580 ...

```

□□□□□□□□ - □□□□

020+066+075+076+ “”
 ...

wland□□□□□□□□ - □□□□

Sep 6, 2024 · wlandWland1. **** ...

□□□□□□□□" +86"□□□" +086"□" +0086"_□□□□

+0086 3 86 28 ...

□□□□□□□□□□ - □□□□

□□□□□□□□□□□□□□ 1□0551—□□□ 2□0552—□□□ 3□0553—□□□ 4□0554—□□□ 5□0555—□□□□ 6□0556—□□□
7□0557—□□□ 8□0558—□□□□ ...

manwa -

Feb 4, 2025 · manwa.com - Web site of Manwa Group
https://manwa.site
https://manwa.life | https://manwa.biz | ...

“area” “region” “zone” “district” □□□□□□_□□□□

area 60 years ago, half French people were still living in the rural area. region ...

A horizontal number line with boxes for each integer from 0 to 20. A red dot is placed in the box for the number 15.

[illegible][illegible]

025 0510 0511 0512 0513 0514 ...

[illegible]

0571 0574 0577 0575 0572 0573 0579 0570
0576 0578 0580 ...

□□□□□□□□ - □□□□

020066+075+076+ “”
 ...

wland -

Sep 6, 2024 · wland Wland 1. ** ...

□□□□□□□□“+86”□□□□“+086”□“+0086”□□□□

$\text{+0086} \quad \text{3}$

86

28 ...

□□□□□□□□□□□□□□ - □□□□

□□□□□□□□□□□□□□ 1□0551—□□□ 2□0552—□□□ 3□0553—□□□ 4□0554—□□□ 5□0555—□□□□ 6□0556—□□□
7□0557—□□□ 8□0558—□□□□ ...

manwa□□□□□□□□ - □□□□

Feb 4, 2025 · manwa.com 日本語の漫画家情報、作品紹介、レビューなど。 https://manwa.site
https://manwa.life | https://manwa.biz | ...

Master the area of rectangles and parallelograms with our comprehensive worksheet! Perfect for practice and skill-building. Learn more to boost your math skills today!

[Back to Home](#)