



Area In Square Units Worksheets

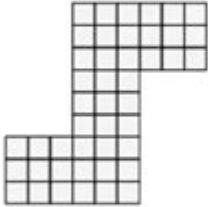
Name: _____

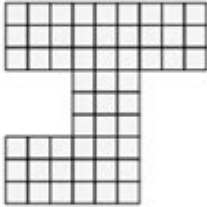
Area in Square Units

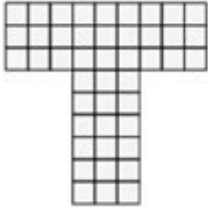
Find the area of each shape. Each square is 1 inch.


1) 

2) 

3) 

4) 

5) 

6) 

© copyright 2023 For Personal and Educational Use Only <https://k12mathworksheets.com>

Area in square units worksheets are essential educational tools designed to help students understand the concept of area, a fundamental aspect of geometry. These worksheets provide practice problems that guide learners through the process of calculating the area of various shapes, including squares, rectangles, triangles, and circles. In this article, we will explore the importance of these worksheets, the types of problems they include, and effective strategies for using them in the classroom or for self-study.

Understanding Area and Its Importance

Area refers to the amount of space within a two-dimensional shape, measured in square units. Understanding the concept of area is critical for several reasons:

1. Real-World Applications: Area calculations are used in various real-world scenarios, such as determining the amount of paint needed to cover a wall or the size of a garden plot.
2. Foundation for Advanced Topics: A solid grasp of area is essential for more advanced mathematical concepts, including volume, surface area, and calculus.
3. Problem-Solving Skills: Working with area problems enhances students' critical thinking and problem-solving abilities.

Types of Shapes Covered in Area Worksheets

Area in square units worksheets typically cover a range of geometric shapes. Here's a detailed look at the most common shapes included:

1. Rectangles and Squares

The area of a rectangle is calculated using the formula:

$$\text{Area} = \text{length} \times \text{width}$$

For squares, since all sides are equal, the formula simplifies to:

$$\text{Area} = \text{side}^2$$

These shapes are often the first introduced to students because of their straightforward formulas and real-life relevance.

2. Triangles

The area of a triangle can be found using the formula:

$$\text{Area} = \frac{1}{2} \times \text{base} \times \text{height}$$

This formula is crucial for understanding how to calculate the area of more complex shapes that can be divided into triangles.

3. Circles

Calculating the area of a circle involves the use of Pi (π):

$$\text{Area} = \pi \times \text{radius}^2$$

Circle area problems often introduce students to the concept of irrational numbers and the importance of precision in calculations.

4. Composite Shapes

Composite shapes combine two or more different geometric figures. To find the area of these shapes, students must break them down into simpler components, calculate the area of each, and then sum the results. This skill is particularly useful in real-world applications where irregular shapes are common.

Benefits of Using Area Worksheets

Using area in square units worksheets offers numerous benefits for learners:

- **Practice and Reinforcement:** Worksheets provide ample opportunities for students to practice area calculations, reinforcing their understanding and helping to build confidence.
- **Diverse Problem Types:** Worksheets can include a variety of problem types, from simple calculations to word problems, catering to different learning styles and levels.
- **Assessment Tools:** Teachers can use these worksheets as assessment tools to gauge student understanding and identify areas needing further instruction.
- **Self-Paced Learning:** For self-learners, worksheets allow for independent study at one's own pace, enabling a personalized learning experience.

How to Use Area Worksheets Effectively

To maximize the benefit of area in square units worksheets, consider the following strategies:

1. Start with the Basics

Before diving into worksheets, ensure that students have a solid understanding of basic geometric concepts. This foundation will aid in their ability to tackle area problems with confidence. Introduce definitions, properties, and the formulas for different shapes.

2. Gradually Increase Difficulty

Begin with simple problems and gradually introduce more complex calculations. This approach allows students to build their skills incrementally. For example, start with rectangles and squares before moving on to triangles and circles, and finally to composite shapes.

3. Incorporate Real-World Problems

Linking area calculations to real-world scenarios can enhance engagement and relevance. Create word problems that require students to apply their knowledge to practical situations, such as determining the area of a room or a piece of land.

4. Encourage Group Work

Engaging students in group work can promote discussion and collaborative problem-solving. Working together allows students to share strategies and learn from one another, deepening their understanding of the concepts involved.

5. Provide Feedback and Support

Regular feedback is essential for student growth. Review completed worksheets with students, discussing errors and clarifying misunderstandings. Offer additional resources or one-on-one support for those who may be struggling with particular concepts.

Creating Your Own Area Worksheets

Educators and parents can also create customized area in square units worksheets tailored to their students' needs. Here are some tips for creating effective worksheets:

1. **Identify Learning Objectives:** Determine what specific skills or concepts you want to reinforce through the worksheet.
2. **Select Shapes:** Choose a variety of geometric shapes to include, ensuring a balance between familiar and new concepts.
3. **Vary Problem Types:** Include a mix of straightforward calculations, word problems, and composite shapes to keep the worksheet engaging.
4. **Include Visuals:** Incorporate diagrams and illustrations to help students visualize the shapes and understand the problems better.
5. **Provide Space for Work:** Ensure that there is ample space for students to show their calculations and reasoning, which is important for understanding their thought processes.

Conclusion

Area in square units worksheets are invaluable resources in mathematics education. They not only reinforce the concept of area but also build essential problem-solving skills that students carry with them into more advanced mathematical studies and real-life applications. By utilizing these worksheets effectively, educators can foster a deeper understanding of geometry, prepare students for future challenges, and inspire confidence in their mathematical abilities. Whether used in the classroom or for independent study, area worksheets will remain a cornerstone of mathematics education, guiding learners through the fascinating world of geometric measurement.

Frequently Asked Questions

What are area in square units worksheets?

Area in square units worksheets are educational resources designed to help students practice calculating the area of various shapes, such as rectangles, squares, triangles, and circles, using square units.

What grade levels are area in square units worksheets suitable for?

Area in square units worksheets are typically suitable for elementary and middle school students, often used in grades 3 through 7, depending on the curriculum.

How can area in square units worksheets benefit students?

These worksheets help students reinforce their understanding of geometric concepts, improve their calculation skills, and develop problem-solving abilities through practical exercises.

What types of shapes are commonly included in area in square units worksheets?

Common shapes included are rectangles, squares, triangles, circles, parallelograms, trapezoids, and sometimes composite shapes.

Are there online resources for area in square units worksheets?

Yes, many educational websites offer free printable area worksheets, interactive quizzes, and digital resources for practicing area calculations.

How do you calculate the area of a rectangle in square units?

The area of a rectangle is calculated by multiplying its length by its width. The formula is $\text{Area} = \text{Length} \times \text{Width}$.

Can area in square units worksheets include word problems?

Yes, many worksheets feature word problems that require students to apply their knowledge of area calculations in real-world scenarios.

What is the difference between area and perimeter in the context of worksheets?

Area measures the space within a shape in square units, while perimeter measures the distance around a shape. Worksheets may focus on one or both concepts to enhance understanding.

Find other PDF article:

<https://soc.up.edu.ph/06-link/files?dataid=uCv55-5814&title=anna-quindlen-lots-of-candles-plenty-of-cake.pdf>

Area In Square Units Worksheets

“area” “region” “zone” “district” _____

area _____ 60 years ago, half French people were still living in the rural area. region _____ ...

_____ 86 _____ 1 _____
...

Apr 27, 2024 · _____00 _____
...

_____025 _____0510 _____0511 _____0512 _____0513 _____
_____0514 _____ ...

_____ 0571 _____ 0574 _____ 0577 _____ 0575 _____ 0572 _____ 0573 _____0579 _____0570 _____
_____0576 _____0578 _____0580 ...

_____ - _____

_____020 _____066+ _____075+ _____076+ _____ “ ” _____
_____ ...

wland _____ - _____

Sep 6, 2024 · wland _____Wland _____1. ** _____** _____ ...

_____ “ +86” _____ “ +086” _____ “ +0086” _____

+0086 3 86 28 ...

□□□□□□□□□□ - □□□□

□□□□□□□□□□□□□□ 1□0551—□□□ 2□0552—□□□ 3□0553—□□□ 4□0554—□□□ 5□0555—□□□□ 6□0556—□□□
7□0557—□□□ 8□0558—□□□□ ...

manwa□□□□□□□□ - □□□□

Feb 4, 2025 · manwa https://manwa.site https://manwa.life https://manwa.biz ...

“area” “region” “z...

area[] [] [] [] [] [] [] [] [] [] [] [] [] [] [] ...

□ □ □ □ □ □ □ □ □ □ ...

$\square\square\square\square\square\square\square\square$

$\square\square\square\square\square\square \quad \square\square\square\square \quad \square\square\square \quad \square\square\square\square\square \quad \square\square\square\square \quad \dots$

Apr 27, 2024 · ...

[illegible]

A diagram showing a sequence of rectangles on a horizontal axis. The first rectangle has width 1 and height 1. The second rectangle has width 2 and height 2. The third rectangle has width 3 and height 3. The fourth rectangle has width 4 and height 4. The fifth rectangle has width 5 and height 5. The sixth rectangle has width 6 and height 6. The seventh rectangle has width 7 and height 7. The eighth rectangle has width 8 and height 8. The ninth rectangle has width 9 and height 9. The tenth rectangle has width 10 and height 10. The sequence continues with an ellipsis (...).

0571

Boost your math skills with our area in square units worksheets! Perfect for practice and mastery. Discover how to solve area problems effectively today!

[Back to Home](#)