

Area Of Parallelograms Triangles And Trapezoids Worksheet

Name : _____

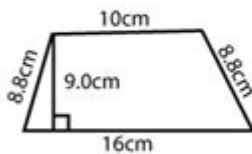
Score : _____ Date : _____



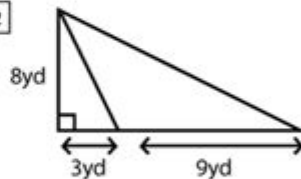
Area of Triangles and Trapezoids Worksheet

Find the area of each of the following figures

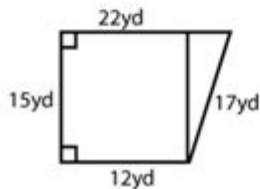
1



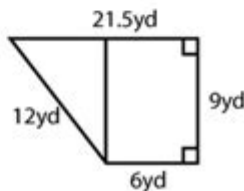
2



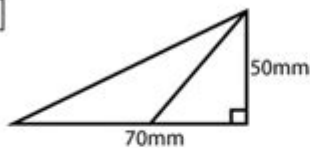
3



4



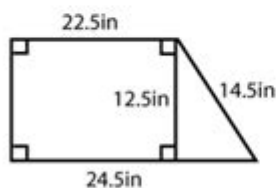
5



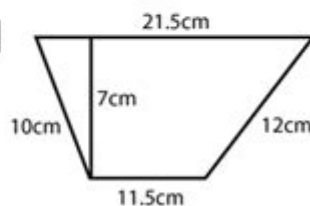
6



7



8



AREA OF PARALLELOGRAMS, TRIANGLES, AND TRAPEZOIDS WORKSHEET IS AN ESSENTIAL TOOL FOR STUDENTS AND EDUCATORS ALIKE, AS IT HELPS IN UNDERSTANDING THE FUNDAMENTAL CONCEPTS OF GEOMETRY. MASTERING THE AREA CALCULATIONS OF THESE SHAPES IS NOT ONLY CRUCIAL FOR ACADEMIC SUCCESS BUT ALSO PLAYS A VITAL ROLE IN VARIOUS REAL-WORLD APPLICATIONS, FROM ARCHITECTURE AND ENGINEERING TO ART AND DESIGN. THIS ARTICLE PROVIDES AN IN-DEPTH LOOK AT THE FORMULAS, CONCEPTS, AND SAMPLE PROBLEMS RELATED TO THE AREA OF PARALLELOGRAMS, TRIANGLES, AND TRAPEZOIDS, ALONG WITH A WORKSHEET TO ENHANCE LEARNING.

UNDERSTANDING THE SHAPES

BEFORE DIVING INTO THE AREA CALCULATIONS, IT'S ESSENTIAL TO UNDERSTAND THE CHARACTERISTICS OF EACH SHAPE.

PARALLELOGRAMS

A PARALLELOGRAM IS A FOUR-SIDED FIGURE (QUADRILATERAL) WHERE OPPOSITE SIDES ARE PARALLEL AND EQUAL IN LENGTH. THE OPPOSITE ANGLES ARE ALSO EQUAL. COMMON EXAMPLES INCLUDE RECTANGLES AND RHOMBUSES.

- PROPERTIES:
- OPPOSITE SIDES ARE EQUAL AND PARALLEL.
- OPPOSITE ANGLES ARE EQUAL.
- THE DIAGONALS BISECT EACH OTHER.

TRIANGLES

A TRIANGLE IS A THREE-SIDED POLYGON. THE SUM OF ITS INTERNAL ANGLES IS ALWAYS 180 DEGREES. THERE ARE SEVERAL TYPES OF TRIANGLES, INCLUDING EQUILATERAL, ISOSCELES, AND SCALENE.

- PROPERTIES:
- THE AREA CAN BE CALCULATED USING VARIOUS METHODS DEPENDING ON THE INFORMATION AVAILABLE (BASE AND HEIGHT, SIDES, ETC.).
- THE SUM OF THE ANGLES IS ALWAYS 180 DEGREES.

TRAPEZOIDS

A TRAPEZOID (OR TRAPEZIUM IN SOME COUNTRIES) IS A QUADRILATERAL WITH AT LEAST ONE PAIR OF PARALLEL SIDES. THE AREA CAN BE CALCULATED USING THE LENGTHS OF THE BASES AND THE HEIGHT.

- PROPERTIES:
- AT LEAST ONE PAIR OF SIDES IS PARALLEL.
- THE NON-PARALLEL SIDES ARE CALLED LEGS.

FORMULAS FOR AREA CALCULATION

UNDERSTANDING THE FORMULAS FOR CALCULATING THE AREA OF THESE SHAPES IS CRUCIAL FOR SOLVING RELATED PROBLEMS.

AREA OF PARALLELOGRAMS

THE FORMULA FOR CALCULATING THE AREA (A) OF A PARALLELOGRAM IS:

$$[A = B \times H]$$

WHERE:

- B = LENGTH OF THE BASE
- H = HEIGHT (PERPENDICULAR DISTANCE FROM THE BASE TO THE OPPOSITE SIDE)

AREA OF TRIANGLES

THE AREA (A) OF A TRIANGLE CAN BE CALCULATED USING THE FOLLOWING FORMULA:

$$[A = \frac{1}{2} \times B \times H]$$

WHERE:

- B = LENGTH OF THE BASE
- H = HEIGHT (PERPENDICULAR DISTANCE FROM THE BASE TO THE OPPOSITE VERTEX)

FOR DIFFERENT TYPES OF TRIANGLES, OTHER FORMULAS MIGHT BE USED, SUCH AS HERON'S FORMULA FOR TRIANGLES WITH KNOWN SIDE LENGTHS.

AREA OF TRAPEZOIDS

THE AREA (A) OF A TRAPEZOID CAN BE CALCULATED USING:

$$[A = \frac{1}{2} \times (B_1 + B_2) \times H]$$

WHERE:

- B₁ = LENGTH OF ONE BASE
- B₂ = LENGTH OF THE OTHER BASE
- H = HEIGHT (PERPENDICULAR DISTANCE BETWEEN THE BASES)

EXAMPLE PROBLEMS

TO SOLIDIFY UNDERSTANDING, LET'S WORK THROUGH SOME EXAMPLE PROBLEMS.

EXAMPLE 1: AREA OF A PARALLELOGRAM

PROBLEM: FIND THE AREA OF A PARALLELOGRAM WITH A BASE OF 10 CM AND A HEIGHT OF 5 CM.

SOLUTION:

USING THE FORMULA:

$$[A = B \times H = 10 \text{ cm} \times 5 \text{ cm} = 50 \text{ cm}^2]$$

EXAMPLE 2: AREA OF A TRIANGLE

PROBLEM: CALCULATE THE AREA OF A TRIANGLE WITH A BASE OF 8 CM AND A HEIGHT OF 6 CM.

SOLUTION:

USING THE FORMULA:

$$[A = \frac{1}{2} \times B \times H = \frac{1}{2} \times 8 \text{ cm} \times 6 \text{ cm} = 24 \text{ cm}^2]$$

EXAMPLE 3: AREA OF A TRAPEZOID

PROBLEM: DETERMINE THE AREA OF A TRAPEZOID WITH BASES OF 7 CM AND 5 CM, AND A HEIGHT OF 4 CM.

SOLUTION:

USING THE FORMULA:

$$A = \frac{1}{2} \times (b_1 + b_2) \times h = \frac{1}{2} \times (7 \text{ cm} + 5 \text{ cm}) \times 4 \text{ cm} = 24 \text{ cm}^2$$

WORKSHEET FOR PRACTICE

A WORKSHEET CAN GREATLY ENHANCE PRACTICE AND REINFORCE THE CONCEPTS DISCUSSED. BELOW IS A SAMPLE WORKSHEET THAT INCLUDES VARIOUS PROBLEMS RELATED TO THE AREAS OF PARALLELOGRAMS, TRIANGLES, AND TRAPEZOIDS.

WORKSHEET: AREA OF PARALLELOGRAMS, TRIANGLES, AND TRAPEZOIDS

1. CALCULATE THE AREA OF THE FOLLOWING SHAPES:

- (A) PARALLELOGRAM WITH A BASE OF 12 CM AND HEIGHT OF 7 CM.
- (B) TRIANGLE WITH A BASE OF 10 CM AND HEIGHT OF 3 CM.
- (C) TRAPEZOID WITH BASES OF 8 CM AND 6 CM, AND HEIGHT OF 5 CM.

2. FILL IN THE BLANKS WITH THE CORRECT FORMULAS:

- AREA OF PARALLELOGRAM: _____
- AREA OF TRIANGLE: _____
- AREA OF TRAPEZOID: _____

3. WORD PROBLEMS:

- A GARDEN IN THE SHAPE OF A PARALLELOGRAM HAS A BASE OF 15 M AND A HEIGHT OF 10 M. WHAT IS THE AREA OF THE GARDEN?
- A TRIANGULAR BANNER HAS A BASE OF 9 FT AND A HEIGHT OF 4 FT. WHAT IS ITS AREA?
- A TRAPEZOIDAL FIELD HAS ONE BASE MEASURING 14 M, ANOTHER BASE MEASURING 10 M, AND A HEIGHT OF 6 M. CALCULATE ITS AREA.

CONCLUSION

UNDERSTANDING THE AREA OF PARALLELOGRAMS, TRIANGLES, AND TRAPEZOIDS IS FUNDAMENTAL IN GEOMETRY. MASTERY OF THESE CONCEPTS NOT ONLY AIDS IN ACADEMIC PURSUITS BUT ALSO PROVIDES PRACTICAL SKILLS APPLICABLE IN VARIOUS FIELDS. REGULAR PRACTICE THROUGH WORKSHEETS ENHANCES PROFICIENCY AND PREPARES STUDENTS FOR MORE COMPLEX GEOMETRIC PROBLEMS. BY CONSISTENTLY APPLYING THE FORMULAS AND SOLVING PROBLEMS, LEARNERS CAN BUILD A STRONG FOUNDATION IN GEOMETRY THAT WILL BENEFIT THEM IN THEIR EDUCATIONAL JOURNEY AND BEYOND.

FREQUENTLY ASKED QUESTIONS

WHAT IS THE FORMULA FOR CALCULATING THE AREA OF A PARALLELOGRAM?

THE AREA OF A PARALLELOGRAM CAN BE CALCULATED USING THE FORMULA: $\text{Area} = \text{Base} \times \text{Height}$.

HOW DO YOU FIND THE AREA OF A TRIANGLE?

THE AREA OF A TRIANGLE IS CALCULATED USING THE FORMULA: $\text{Area} = (\text{Base} \times \text{Height}) / 2$.

WHAT IS THE FORMULA FOR THE AREA OF A TRAPEZOID?

THE AREA OF A TRAPEZOID CAN BE FOUND USING THE FORMULA: $\text{Area} = (\text{Base}_1 + \text{Base}_2) \times \text{Height} / 2$.

020-066+075+076+ “ ”

0000000000000000 100551—000 200552—000 300553—000 400554—000 500555—0000 600556—000
700557—000 800558—0000 ...

manwa -

Feb 4, 2025 · manwa <https://manwa.site> <https://manwa.life> <https://manwa.biz> ...

Master the area of parallelograms

[Back to Home](#)