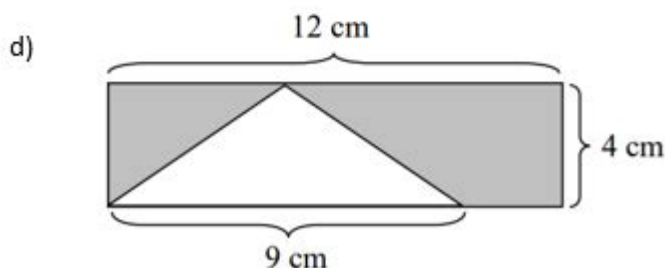
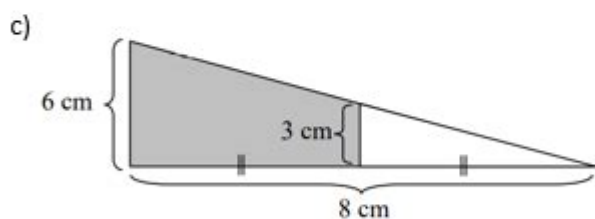
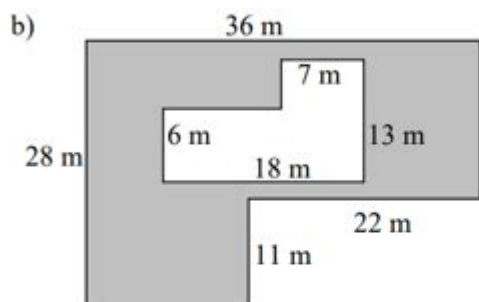



Area Of Shaded Region Worksheet



Area of shaded region worksheet is an essential educational tool designed to enhance students' understanding of geometry and the concept of area. These worksheets typically present various geometric figures, with some regions shaded to indicate the area that students need to calculate. This article will delve into the significance of these worksheets, the methodologies for finding the areas of shaded regions, common geometric shapes involved, and tips for effectively using these worksheets in a classroom setting.

Understanding the Concept of Area

Before we dive into the specifics of shaded regions, it is crucial to understand what area means in mathematics.

Definition of Area

Area is defined as the amount of space inside a two-dimensional shape. The unit of area is typically square units, such as square meters (m^2), square centimeters (cm^2), or square inches (in^2). The area can be calculated using specific formulas depending on the shape of the object.

Importance of Learning Area

Understanding area is fundamental to students for several reasons:

1. Real-World Application: Area calculations are essential in daily life, such as determining how much paint is needed to cover a wall or how much carpet is required to cover a floor.
2. Foundation for Advanced Topics: Mastery of area calculations lays the groundwork for more complex mathematical concepts such as volume and surface area in three-dimensional shapes.
3. Critical Thinking: Solving area problems enhances critical thinking and problem-solving skills, which are applicable in various academic and real-life scenarios.

Components of Area of Shaded Region Worksheets

Area of shaded region worksheets typically includes a variety of components designed to facilitate learning. Here are the main elements:

Geometric Shapes

These worksheets often feature various geometric shapes, including:

- Rectangles
- Squares
- Triangles
- Circles
- Polygons
- Composite figures (combinations of two or more shapes)

Each shape has a specific formula for calculating its area, which students must apply to find the area of the shaded region.

Visual Representation

The visual aspect of these worksheets is crucial. Students are presented with diagrams

that indicate which parts are shaded. The clarity of these diagrams helps in understanding which areas to exclude or include in their calculations.

Instructions and Questions

Typically, worksheets include clear instructions and questions prompting students to:

- Calculate the area of the shaded region.
- Compare the area of the shaded region to the total area.
- Solve word problems involving shaded areas.

Methodologies for Finding the Area of Shaded Regions

To calculate the area of shaded regions, students must often employ different strategies depending on the complexity of the figures involved. Here are some methodologies:

Direct Calculation

If the shaded region is a simple geometric shape, students can directly apply the area formula. For example:

- For a rectangle: $\text{Area} = \text{length} \times \text{width}$
- For a triangle: $\text{Area} = \frac{1}{2} \times \text{base} \times \text{height}$

Subtraction Method

In cases where the shaded region is part of a more complex figure, students may need to calculate the area of the entire figure and then subtract the area of the unshaded part. For example:

- Find the area of the entire circle.
- Calculate the area of the unshaded triangle within the circle.
- Subtract the area of the triangle from the area of the circle to find the shaded area.

Addition Method

Sometimes, the shaded area consists of multiple smaller shapes. In this case, students can calculate the area of each shape separately and then add them together to find the total shaded area.

Common Shapes Involved in Shaded Region Problems

In area of shaded region worksheets, several geometric shapes frequently appear. Understanding these shapes and their area formulas is vital for students.

Rectangles and Squares

- Rectangle: The area is calculated as $(\text{length} \times \text{width})$.
- Square: The area is calculated as (side^2) .

Triangles

- The area is calculated as $(\frac{1}{2} \times \text{base} \times \text{height})$.

Circles

- The area is calculated as $(\pi \times \text{radius}^2)$.

Composite Figures

Composite figures require students to break down the shape into known geometric figures, calculate their areas, and combine the results appropriately.

Tips for Using Area of Shaded Region Worksheets Effectively

To maximize the benefits of using area of shaded region worksheets, educators and students can follow these tips:

1. Start with Simple Shapes

Begin with basic shapes before moving on to more complex figures. This builds confidence and ensures that foundational concepts are understood.

2. Encourage Visual Learning

Use color-coded markers to differentiate between shaded and unshaded areas. Visual aids can enhance understanding and retention of concepts.

3. Incorporate Real-Life Applications

Relating problems to real-life scenarios can engage students more effectively. For example, discussing the area needed for a garden or a pool can make the learning experience more relevant.

4. Provide Step-by-Step Guidance

Break down problems into steps and guide students through the process. This ensures they understand each part of the calculation.

5. Group Work and Collaboration

Encourage students to work in pairs or small groups to solve problems. Collaboration can lead to deeper understanding as they discuss different approaches.

6. Regular Practice

Frequent practice with varied problems helps reinforce learning. Incorporate different levels of difficulty to challenge students progressively.

Conclusion

In conclusion, area of shaded region worksheets are invaluable resources for teaching geometry and enhancing students' understanding of area calculations. By utilizing various methods, engaging with different geometric shapes, and employing effective teaching strategies, educators can provide a comprehensive learning experience that prepares students for more advanced mathematical concepts. As students practice calculating the area of shaded regions, they not only improve their math skills but also gain the confidence to tackle more complex problems in the future.

Frequently Asked Questions

What is the purpose of an area of shaded region worksheet?

The purpose of an area of shaded region worksheet is to help students practice calculating the area of various shapes, particularly the shaded part of a figure, which may involve using different geometric formulas.

What types of shapes are commonly included in an area of shaded region worksheet?

Common shapes include circles, rectangles, triangles, and sometimes composite shapes that combine multiple figures.

How do you find the area of a shaded region that encompasses a circle and a triangle?

To find the area of the shaded region, calculate the area of the circle and the area of the triangle separately, then subtract the area of the triangle from the area of the circle if the triangle is inside the circle.

What formulas are typically used in an area of shaded region worksheet?

Typical formulas include $A = \pi r^2$ for circles, $A = \text{base} \times \text{height}$ for rectangles, and $A = \frac{1}{2} \times \text{base} \times \text{height}$ for triangles.

Are area of shaded region worksheets suitable for all grade levels?

Yes, area of shaded region worksheets can be tailored for various grade levels, from elementary to high school, depending on the complexity of the shapes and concepts involved.

Can area of shaded region worksheets incorporate real-world applications?

Yes, they can include real-world applications such as calculating the area of land, painting a wall, or designing a garden, helping students understand the practical use of geometry.

What skills do students develop by working on area of shaded region worksheets?

Students develop skills in problem-solving, critical thinking, and spatial reasoning, as well as their ability to apply geometric formulas effectively.

Where can teachers find area of shaded region worksheets?

Teachers can find area of shaded region worksheets online through educational websites, teaching resources platforms, or by creating their own customized worksheets.

Find other PDF article:

<https://soc.up.edu.ph/41-buzz/Book?docid=isR78-8724&title=microsoft-visio-training-course.pdf>

Area Of Shaded Region Worksheet

“area” “region” “zone” “district” □□□□□□_□□□□

area 60 years ago, half French people were still living in the rural area. region ...

□□□□□□□□□□□□□□□□□□□□

[illegible]

_

[illegible]

□□□□□□□□□□□□□□_□□□□

025 0510 0511 0512 0513 0514 ...

□ □ □ □ □ □ □ □ □ □ □ □ □ □ _ □ □ □ □

0571 0574 0577 0575 0572 0573 0579 0570
0576 0578 0580 ...

$$\begin{array}{|c|c|c|c|c|c|c|c|c|} \hline & & & & & & & & \\ \hline \end{array} - \begin{array}{|c|c|c|c|} \hline & & & \\ \hline \end{array}$$

020066+075+076+ “”
 ...

wland 万隆 - 城市

Sep 6, 2024 · wland Wland 1. **

□□□□□□□□" +86"□□□□" +086"□" +0086" □□□□

$$+0086 \quad 3 \quad 86 \quad 28 \dots$$

□□□□□□□□□□□□ - □□□□

□□□□□□□□□□□□□□□□ □10551—□□□ □20552—□□□ □30553—□□□ □40554—□□□ □50555—□□□□ □60556—□□□
□70557—□□□ □80558—□□□□ ...

manwa -

Feb 4, 2025 · manwa <https://manwa.site> <https://manwa.life> <https://manwa.biz> ...

“area”“region”“zone”“district”

area 60 years ago, half French people were still living in the ...

86 ...

Apr 27, 2024 · ...

025 0510 0511 ...

0571 0574 0577 0575 0572 0573 0579 ...

Enhance your math skills with our area of shaded region worksheet! Perfect for practice and mastering concepts. Discover how to solve shaded area problems today!

[Back to Home](#)