

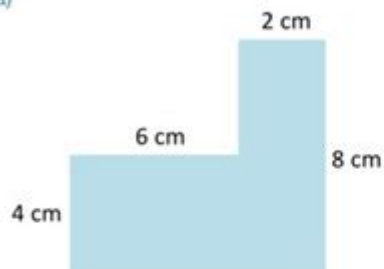
# Area Of Compound Rectangles Worksheet



## Area of Compound Shapes

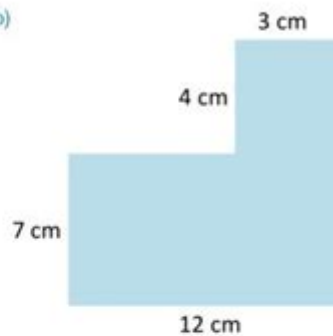
Calculate the areas of the following compound shapes

a)



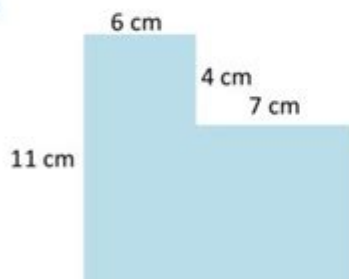
Area =

b)



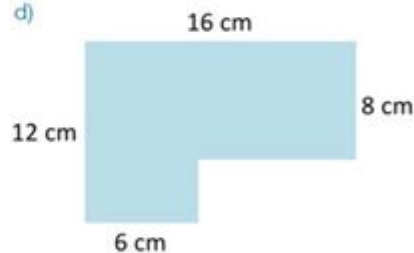
Area =

c)



Area =

d)



Area =



[www.mathswithmum.com](http://www.mathswithmum.com)

**AREA OF COMPOUND RECTANGLES WORKSHEET** IS AN ESSENTIAL LEARNING TOOL FOR STUDENTS AND EDUCATORS ALIKE, PARTICULARLY IN THE FIELD OF MATHEMATICS. UNDERSTANDING HOW TO CALCULATE THE AREA OF COMPOUND RECTANGLES NOT ONLY ENHANCES A STUDENT'S PROBLEM-SOLVING SKILLS BUT ALSO LAYS A STRONG FOUNDATION FOR MORE ADVANCED TOPICS IN GEOMETRY. IN THIS ARTICLE, WE WILL EXPLORE WHAT COMPOUND RECTANGLES ARE, HOW TO CALCULATE THEIR AREA, THE IMPORTANCE OF THIS CONCEPT IN REAL-WORLD APPLICATIONS, AND PROVIDE TIPS ON USING WORKSHEETS EFFECTIVELY TO MASTER THIS TOPIC.

## WHAT ARE COMPOUND RECTANGLES?

COMPOUND RECTANGLES, ALSO KNOWN AS COMPOSITE SHAPES, ARE GEOMETRIC FIGURES THAT CONSIST OF TWO OR MORE

RECTANGLES COMBINED TOGETHER. THE TOTAL AREA OF A COMPOUND RECTANGLE CAN BE DETERMINED BY CALCULATING THE AREA OF EACH INDIVIDUAL RECTANGLE AND SUMMING THEM UP. THIS CONCEPT IS CRUCIAL FOR STUDENTS AS IT INTRODUCES THEM TO THE IDEA OF BREAKING COMPLEX SHAPES INTO SIMPLER PARTS, MAKING IT EASIER TO SOLVE PROBLEMS.

## UNDERSTANDING RECTANGLES

BEFORE DIVING INTO COMPOUND RECTANGLES, IT'S VITAL TO UNDERSTAND THE PROPERTIES OF A RECTANGLE:

- DEFINITION: A RECTANGLE IS A FOUR-SIDED SHAPE (QUADRILATERAL) WITH OPPOSITE SIDES THAT ARE EQUAL IN LENGTH AND ALL ANGLES MEASURING 90 DEGREES.
- AREA FORMULA: THE AREA OF A RECTANGLE IS CALCULATED USING THE FORMULA:

$$\begin{aligned} & \backslash[ \\ & \backslash\text{TEXT}\{\text{AREA}\} = \backslash\text{TEXT}\{\text{LENGTH}\} \backslash\text{TIMES} \backslash\text{TEXT}\{\text{WIDTH}\} \\ & \backslash] \end{aligned}$$

- PERIMETER FORMULA: THE PERIMETER OF A RECTANGLE CAN BE CALCULATED AS:

$$\begin{aligned} & \backslash[ \\ & \backslash\text{TEXT}\{\text{PERIMETER}\} = 2 \backslash\text{TIMES} (\backslash\text{TEXT}\{\text{LENGTH}\} + \backslash\text{TEXT}\{\text{WIDTH}\}) \\ & \backslash] \end{aligned}$$

## CALCULATING THE AREA OF COMPOUND RECTANGLES

TO FIND THE AREA OF A COMPOUND RECTANGLE, FOLLOW THESE STEPS:

### STEP 1: IDENTIFY THE RECTANGLES

START BY IDENTIFYING THE INDIVIDUAL RECTANGLES THAT MAKE UP THE COMPOUND SHAPE. IT MAY HELP TO DRAW LINES TO SEPARATE THE RECTANGLES VISUALLY.

### STEP 2: MEASURE DIMENSIONS

MEASURE THE LENGTH AND WIDTH OF EACH RECTANGLE. IT'S IMPORTANT TO ENSURE ACCURATE MEASUREMENTS FOR PRECISE AREA CALCULATIONS.

### STEP 3: CALCULATE INDIVIDUAL AREAS

USE THE AREA FORMULA FOR RECTANGLES TO CALCULATE THE AREA OF EACH INDIVIDUAL RECTANGLE:

- FOR RECTANGLE 1:

$$\begin{aligned} & \backslash[ \\ & \backslash\text{TEXT}\{\text{AREA}\}_{\_1} = \backslash\text{TEXT}\{\text{LENGTH}\}_{\_1} \backslash\text{TIMES} \backslash\text{TEXT}\{\text{WIDTH}\}_{\_1} \\ & \backslash] \end{aligned}$$

- FOR RECTANGLE 2:

$$\text{Area}_2 = \text{Length}_2 \times \text{Width}_2$$

CONTINUE THIS PROCESS FOR ALL RECTANGLES IN THE COMPOUND SHAPE.

## STEP 4: SUM THE AREAS

FINALLY, SUM ALL THE INDIVIDUAL AREAS TO FIND THE TOTAL AREA OF THE COMPOUND RECTANGLE:

$$\text{Total Area} = \text{Area}_1 + \text{Area}_2 + \dots + \text{Area}_n$$

## EXAMPLE PROBLEM

TO ILLUSTRATE THE PROCESS, CONSIDER THE FOLLOWING EXAMPLE:

IMAGINE A COMPOUND RECTANGLE CONSISTING OF TWO RECTANGLES: RECTANGLE A WITH A LENGTH OF 5 CM AND A WIDTH OF 3 CM, AND RECTANGLE B WITH A LENGTH OF 4 CM AND A WIDTH OF 2 CM.

1. CALCULATE THE AREA OF RECTANGLE A:

$$\text{Area}_A = 5 \text{ cm} \times 3 \text{ cm} = 15 \text{ cm}^2$$

2. CALCULATE THE AREA OF RECTANGLE B:

$$\text{Area}_B = 4 \text{ cm} \times 2 \text{ cm} = 8 \text{ cm}^2$$

3. SUM THE AREAS:

$$\text{Total Area} = 15 \text{ cm}^2 + 8 \text{ cm}^2 = 23 \text{ cm}^2$$

THUS, THE TOTAL AREA OF THE COMPOUND RECTANGLE IS 23 cm<sup>2</sup>.

## IMPORTANCE OF AREA OF COMPOUND RECTANGLES WORKSHEETS

WORKSHEETS THAT FOCUS ON THE AREA OF COMPOUND RECTANGLES ARE INSTRUMENTAL IN REINFORCING STUDENTS' UNDERSTANDING AND SKILLS. HERE ARE SOME REASONS WHY THESE WORKSHEETS ARE BENEFICIAL:

- **PRACTICE AND REINFORCEMENT:** WORKSHEETS PROVIDE AMPLE OPPORTUNITY FOR STUDENTS TO PRACTICE THEIR SKILLS, REINFORCING THE CONCEPTS LEARNED IN THE CLASSROOM.
- **VARIETY OF PROBLEMS:** THEY OFTEN INCLUDE A DIVERSE RANGE OF PROBLEMS, FROM SIMPLE TO COMPLEX, ENABLING STUDENTS TO CHALLENGE THEMSELVES.
- **IMMEDIATE FEEDBACK:** TEACHERS CAN QUICKLY ASSESS STUDENT UNDERSTANDING AND PROVIDE FEEDBACK ON AREAS NEEDING IMPROVEMENT.
- **VISUAL LEARNING:** MANY WORKSHEETS INCORPORATE DIAGRAMS, WHICH HELP VISUAL LEARNERS GRASP THE CONCEPT MORE EFFECTIVELY.
- **PREPARATION FOR TESTS:** REGULAR PRACTICE WITH WORKSHEETS PREPARES STUDENTS FOR QUIZZES AND EXAMS, INCREASING THEIR CONFIDENCE.

# TIPS FOR USING AREA OF COMPOUND RECTANGLES WORKSHEETS

TO MAXIMIZE THE EFFECTIVENESS OF THESE WORKSHEETS, CONSIDER THE FOLLOWING TIPS:

## 1. START WITH SIMPLE PROBLEMS

BEGIN WITH STRAIGHTFORWARD PROBLEMS THAT INVOLVE BASIC CALCULATIONS TO BUILD CONFIDENCE BEFORE PROGRESSING TO MORE COMPLEX SHAPES.

## 2. ENCOURAGE VISUAL REPRESENTATION

ENCOURAGE STUDENTS TO DRAW THE COMPOUND RECTANGLES. VISUALIZING THE SHAPES CAN HELP IN IDENTIFYING THE INDIVIDUAL RECTANGLES AND UNDERSTANDING HOW TO APPROACH THE PROBLEM.

## 3. WORK IN GROUPS

PROMOTE COLLABORATIVE LEARNING BY ALLOWING STUDENTS TO WORK IN PAIRS OR SMALL GROUPS. THIS ENCOURAGES DISCUSSION, WHICH CAN LEAD TO A DEEPER UNDERSTANDING OF THE TOPIC.

## 4. REVIEW COMMON MISTAKES

AFTER COMPLETING A WORKSHEET, REVIEW COMMON ERRORS AS A CLASS. THIS HELPS STUDENTS LEARN FROM MISTAKES AND SOLIDIFIES THEIR UNDERSTANDING.

## 5. INCORPORATE REAL-WORLD EXAMPLES

CONNECT THE EXERCISES TO REAL-WORLD APPLICATIONS, SUCH AS CALCULATING THE AREA OF A GARDEN OR A ROOM. THIS RELEVANCE CAN MOTIVATE STUDENTS TO ENGAGE MORE WITH THE MATERIAL.

## CONCLUSION

IN CONCLUSION, THE **AREA OF COMPOUND RECTANGLES WORKSHEET** IS A VALUABLE EDUCATIONAL RESOURCE THAT ENHANCES MATHEMATICAL UNDERSTANDING WHILE PREPARING STUDENTS FOR MORE ADVANCED TOPICS. BY GRASPING THE PRINCIPLES OF COMPOUND RECTANGLES AND PRACTICING THROUGH WORKSHEETS, STUDENTS DEVELOP CRITICAL THINKING AND PROBLEM-SOLVING SKILLS THAT ARE APPLICABLE IN EVERYDAY LIFE. WITH THE RIGHT STRATEGIES AND CONSISTENT PRACTICE, MASTERING THE AREA OF COMPOUND RECTANGLES BECOMES AN ACHIEVABLE GOAL FOR ALL LEARNERS.

## FREQUENTLY ASKED QUESTIONS





+0086 3 86 28 ...

-  
10551—20552—30553—40554—50555—60556—70557—80558— ...

manwa -  
Feb 4, 2025 · manwa <https://manwa.site>  
<https://manwa.life> <https://manwa.biz> ...

Master the area of compound rectangles with our comprehensive worksheet! Perfect for students and educators. Discover how to solve complex problems easily.

[Back to Home](#)