

# Area Of Trapezoid Worksheet

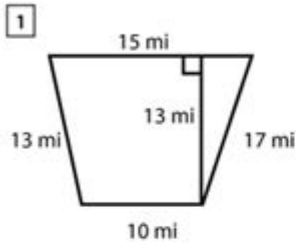
Name : \_\_\_\_\_

Score : \_\_\_\_\_ Date : \_\_\_\_\_

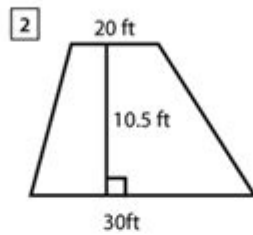


## Area of Trapezoid Worksheet

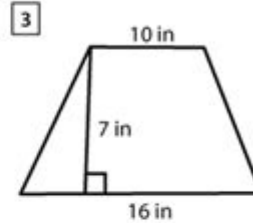
Find the area of each trapezoid.



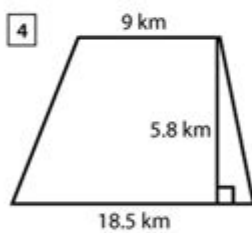
Area = \_\_\_\_\_



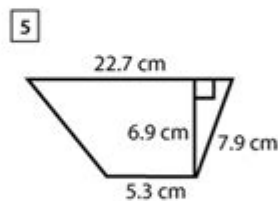
Area = \_\_\_\_\_



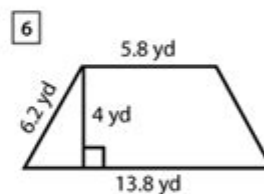
Area = \_\_\_\_\_



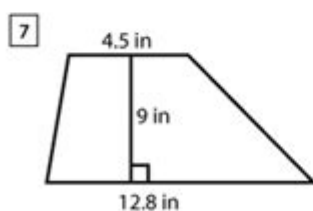
Area = \_\_\_\_\_



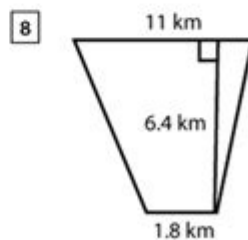
Area = \_\_\_\_\_



Area = \_\_\_\_\_



Area = \_\_\_\_\_



Area = \_\_\_\_\_

**Area of Trapezoid Worksheet** is an essential educational tool for students learning about the properties of trapezoids and how to calculate their area. The trapezoid, a unique quadrilateral with at least one pair of parallel sides, offers a rich context for exploring geometric principles. This article will delve into the definition of a trapezoid, the formula for calculating its area, various types of trapezoids, and how worksheets can facilitate learning. Additionally, we will provide examples and tips for teachers and students to maximize the effectiveness of these worksheets.

# Understanding the Trapezoid

A trapezoid is defined as a four-sided polygon (quadrilateral) that has at least one pair of parallel sides. The parallel sides are known as the bases, while the other two sides are referred to as the legs. Trapezoids can be categorized into different types:

## Types of Trapezoids

1. Isosceles Trapezoid: In this type, the legs are of equal length, and the angles adjacent to each base are equal. This symmetry gives isosceles trapezoids a unique aesthetic and geometric properties.
2. Right Trapezoid: This trapezoid has one pair of adjacent angles that are right angles (90 degrees). This special property makes calculations and applications more straightforward.
3. Scalene Trapezoid: A scalene trapezoid has no sides of equal length and no angles of equal measure. Each side and angle can differ significantly from one another.

## Formula for the Area of a Trapezoid

The area of a trapezoid can be calculated using a straightforward formula:

$$\text{Area} = \frac{(b_1 + b_2)}{2} \times h$$

Where:

- $b_1$  is the length of the first base,
- $b_2$  is the length of the second base,
- $h$  is the height (the perpendicular distance between the bases).

This formula essentially averages the lengths of the two bases and multiplies that average by the height, providing a measure of the trapezoid's area.

## Understanding the Components of the Formula

- Bases ( $b_1$  and  $b_2$ ): The two parallel sides of the trapezoid. Their lengths can vary, affecting the area significantly.
- Height ( $h$ ): This is the distance measured perpendicularly between the two bases. It is crucial to ensure that the height is perpendicular to the bases, as this affects the area calculation.

# Creating an Area of Trapezoid Worksheet

An effective worksheet on the area of trapezoids should incorporate various elements to engage students and enhance their understanding. Here are some key components to include:

## 1. Definitions and Illustrations

Start with a clear definition of trapezoids, accompanied by labeled diagrams. Illustrations should highlight the bases and height, providing visual learners with a reference point.

## 2. Practice Problems

Include a range of problems that vary in difficulty. Here are some examples:

- Basic Calculation:
  - Find the area of a trapezoid with bases of 8 cm and 5 cm, and a height of 4 cm.
- Word Problems:
  - A park has a trapezoidal flower bed with bases measuring 10 m and 12 m, and a height of 6 m. Calculate the area of the flower bed.
- Challenge Problems:
  - Given a trapezoid with one base measuring 15 m and the other base measuring 10 m, if the area is  $75 \text{ m}^2$ , find the height.

## 3. Step-by-Step Solutions

Provide detailed solutions for each problem to demonstrate the application of the area formula. This will help students understand the reasoning behind the calculations.

## 4. Real-World Applications

Incorporate real-world scenarios where calculating the area of trapezoids is relevant. This could include:

- Architecture: Designing trapezoidal structures or spaces.
- Landscaping: Planning garden areas or plots that are trapezoidal in shape.
- Manufacturing: Creating products that include trapezoidal components.

# Utilizing the Worksheet in Class

When implementing an area of trapezoid worksheet in the classroom, consider the following strategies:

## 1. Group Work

Encourage students to work in pairs or small groups to solve problems collaboratively. This fosters discussion and allows students to learn from one another.

## 2. Interactive Activities

Incorporate hands-on activities where students measure and calculate the area of real or model trapezoids. This can help them connect the concepts to tangible experiences.

## 3. Homework Assignments

Assign the worksheet as homework to reinforce what was learned in class. This allows students to practice independently and solidifies their understanding.

## 4. Assessment and Feedback

Use the completed worksheets to assess student understanding. Provide constructive feedback on both their calculations and their approach to problem-solving.

## Tips for Students

To excel in understanding and calculating the area of trapezoids, students should consider the following tips:

1. Memorize the Formula: Make sure to memorize the area formula and understand each component.
2. Draw Diagrams: When solving problems, sketching the trapezoid can help visualize the bases and height.
3. Check Units: Always include units in your calculations and ensure they are consistent.
4. Practice Regularly: The more problems you solve, the more comfortable you will become with the concept.

# Conclusion

In conclusion, an Area of Trapezoid Worksheet is a valuable resource for students learning geometry. By understanding the properties of trapezoids, applying the area formula, and engaging in practice problems, students can enhance their mathematical skills. These worksheets not only facilitate learning through structured practice but also encourage real-world applications that make geometry relevant and exciting. With the right approach, students can master the concept of trapezoids and their areas, laying a strong foundation for future mathematical endeavors.

## Frequently Asked Questions

### **What is a trapezoid and how is its area calculated?**

A trapezoid is a four-sided figure (quadrilateral) with at least one pair of parallel sides. The area of a trapezoid is calculated using the formula:  $\text{Area} = \frac{1}{2} (\text{base1} + \text{base2}) \text{ height}$ .

### **What types of problems can be found on an area of trapezoid worksheet?**

An area of trapezoid worksheet typically includes problems that require calculating the area using given dimensions, word problems involving real-life applications, and problems that ask for the height or bases when the area is provided.

### **Are there any common mistakes students make when calculating the area of a trapezoid?**

Common mistakes include forgetting to average the bases, using incorrect units, or miscalculating the height. It's essential to ensure all dimensions are correctly identified and that the formula is applied properly.

### **How can teachers effectively use area of trapezoid worksheets in the classroom?**

Teachers can use these worksheets as practice after introducing the concept, for homework assignments, or as part of a review session. Incorporating interactive elements like group problem-solving can enhance understanding.

### **What resources are available for finding area of trapezoid worksheets?**

Many educational websites provide free or paid worksheets for calculating the area of trapezoids. Websites like Teachers Pay Teachers, Education.com, and Math-Aids.com offer customizable worksheets.





[Back to Home](#)