

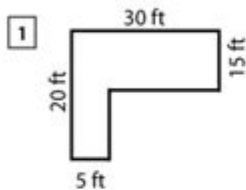
Area Of Composite Shapes Worksheet

Name : _____

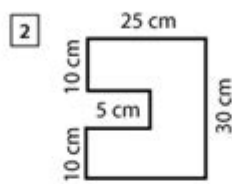
Score : _____ Date : _____



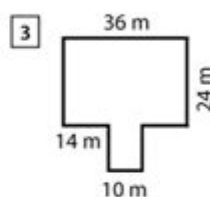
Area of Composite Rectangles



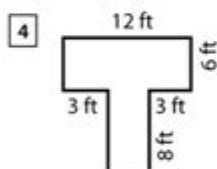
Area = _____



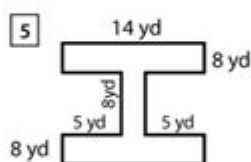
Area = _____



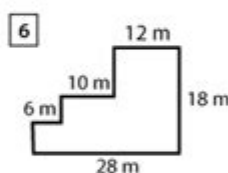
Area = _____



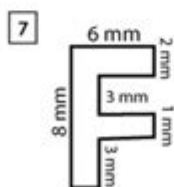
Area = _____



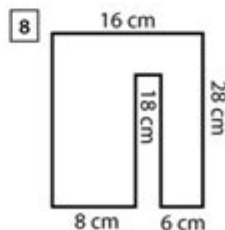
Area = _____



Area = _____



Area = _____



Area = _____

Area of composite shapes worksheet is an essential educational tool designed to help students understand and calculate the area of complex geometric figures formed by combining two or more simple shapes. As students progress in their study of geometry, they encounter various composite shapes, including rectangles, triangles, circles, and more. This article will explore the concept of composite shapes, the importance of worksheets, and effective methods for calculating the area of these figures.

Understanding Composite Shapes

Composite shapes are figures that can be divided into two or more simpler geometric shapes. These shapes can include:

- Rectangles
- Squares
- Triangles
- Circles
- Trapezoids

By breaking down composite shapes into their individual components, students can apply their knowledge of basic area formulas to find the total area of the figure.

Examples of Composite Shapes

To better understand composite shapes, let's look at a few examples:

1. Rectangle with a Semi-Circle on Top: This shape can be divided into a rectangle and a semicircle.
2. L-Shaped Figure: An L-shaped figure can be separated into two rectangles.
3. Triangle with a Rectangle at the Base: This composite shape consists of a triangle on top of a rectangle.

By identifying the individual shapes within these composite figures, students can use the corresponding area formulas to calculate the total area efficiently.

Importance of Area of Composite Shapes Worksheets

Worksheets focused on the area of composite shapes serve several educational purposes:

1. Reinforcement of Concepts: Worksheets reinforce the understanding of area calculations through practice.
2. Problem-Solving Skills: Completing worksheets enhances students' problem-solving abilities, as they learn to visualize and decompose complex shapes.

3. Preparation for Advanced Topics: Mastery of composite shapes lays the groundwork for more advanced mathematical concepts, such as volume and surface area calculations.

4. Assessment of Understanding: Teachers can use worksheets to assess students' understanding of area calculations and identify areas that need further instruction.

Components of an Effective Area of Composite Shapes Worksheet

An effective worksheet on the area of composite shapes should include:

- Clear Instructions: Students should understand what is expected of them.
- Varied Problems: A mix of problems with different levels of complexity keeps students engaged.
- Visual Aids: Diagrams of composite shapes help students visualize the problem.
- Space for Calculations: Providing adequate space for work encourages students to show their calculations.

Calculating the Area of Composite Shapes

To calculate the area of composite shapes, students can follow these steps:

1. **Identify the Simple Shapes:** Break the composite shape down into its simpler components.
2. **Calculate Individual Areas:** Use the appropriate area formulas for each simple shape. Common formulas include:
 - Rectangle: $\text{Area} = \text{length} \times \text{width}$
 - Triangle: $\text{Area} = \frac{1}{2} \times \text{base} \times \text{height}$
 - Circle: $\text{Area} = \pi \times \text{radius}^2$
 - Trapezoid: $\text{Area} = \frac{1}{2} \times (\text{base}_1 + \text{base}_2) \times \text{height}$
3. **Sum the Areas:** Add the areas of all the simple shapes together to find the total area of the composite shape.

Example Problem

Let's consider a practical example to illustrate the steps involved in calculating the area of a composite shape.

Problem: Find the area of a rectangle measuring 10 cm by 5 cm with a semicircle on one of its longer sides.

Step 1: Identify the Simple Shapes

- The composite shape consists of a rectangle and a semicircle.

Step 2: Calculate Individual Areas

- Rectangle Area:

$$A_{\text{rectangle}} = \text{length} \times \text{width} = 10 \text{ cm} \times 5 \text{ cm} = 50 \text{ cm}^2$$

- Semicircle Area:

$$A_{\text{semicircle}} = \frac{1}{2} \times \pi \times \text{radius}^2$$

The radius of the semicircle is half of the rectangle's width:

$$\text{radius} = \frac{5 \text{ cm}}{2} = 2.5 \text{ cm}$$

Thus,

$$A_{\text{semicircle}} = \frac{1}{2} \times \pi \times (2.5 \text{ cm})^2 \approx \frac{1}{2} \times 3.14 \times 6.25 \approx 9.82 \text{ cm}^2$$

Step 3: Sum the Areas

$$A_{\text{total}} = A_{\text{rectangle}} + A_{\text{semicircle}} \approx 50 \text{ cm}^2 + 9.82 \text{ cm}^2 \approx 59.82 \text{ cm}^2$$

Hence, the total area of the composite shape is approximately 59.82 cm².

Tips for Teachers and Students

For teachers and students engaging with area of composite shapes worksheets, consider the following tips:

- Start with Simple Shapes: Before tackling composite shapes, ensure students are comfortable calculating the area of simple shapes.
- Use Visuals: Encourage students to draw and label shapes as they work through problems.

- Encourage Group Work: Collaborative problem-solving can enhance understanding and retention of concepts.
- Provide Feedback: Offer constructive feedback on completed worksheets to help students learn from their mistakes.

Conclusion

The area of composite shapes worksheet is a vital educational resource that aids students in mastering the calculation of areas for complex geometric figures. By breaking down composite shapes into simpler components, students can apply their knowledge effectively and develop critical problem-solving skills. As they progress through worksheets and practice problems, they build a solid foundation in geometry that will serve them well in future mathematical endeavors. Emphasizing these skills in the classroom not only prepares students for advanced topics but also fosters a deeper understanding and appreciation of geometric concepts.

Frequently Asked Questions

What is a composite shape in geometry?

A composite shape is a figure that is made up of two or more basic geometric shapes, such as rectangles, triangles, circles, or other polygons, combined together.

How do you calculate the area of a composite shape?

To calculate the area of a composite shape, you can break it down into its individual basic shapes, calculate the area of each shape separately, and then sum those areas together.

What types of problems can be found on an area of composite shapes worksheet?

Typical problems include calculating the area of shapes like L-shaped figures, combining rectangles and circles, and finding areas involving overlapping shapes or missing sections.

Can I use formulas for basic shapes to find the area of composite shapes?

Yes, you can use the area formulas for the individual basic shapes (e.g., $A = \text{length} \times \text{width}$ for rectangles, $A = \pi r^2$ for circles) to find the areas needed to calculate the total area of the composite shape.

Are there any online resources for practicing area of composite shapes?

Yes, there are numerous educational websites and platforms offering worksheets and interactive exercises focused on the area of composite shapes, such as Khan Academy, Math-Aids, and Teachers Pay Teachers.

Find other PDF article:

<https://soc.up.edu.ph/07-post/Book?dataid=RhH52-2990&title=apocalyptic-literature-a-reader.pdf>

Area Of Composite Shapes Worksheet

“area” “region” “zone” “district” _____

area _____ 60 years ago, half French people were still living in the rural area. region _____ ...

_____ 86 _____ 1 _____ ...

Apr 27, 2024 · _____ 00 _____ ...

_____ 025 _____ 0510 _____ 0511 _____ 0512 _____ 0513 _____ 0514 _____ 0515 _____ ...

_____ 0571 _____ 0574 _____ 0577 _____ 0575 _____ 0572 _____ 0573 _____ 0579 _____ 0570 _____ 0576 _____ 0578 _____ 0580 _____ ...

_____ - _____

_____ 020 _____ 066+ _____ 075+ _____ 076+ _____ “ ” _____ ...

wland _____ - _____

Sep 6, 2024 · wland _____ Wland _____ 1. ** _____ ** _____ ...

_____ “ +86” _____ “ +086” _____ “ +0086” _____

_____ +0086 _____ 3 _____ 86 _____ 28 _____ ...

_____ - _____

_____ 1 _____ 0551— _____ 2 _____ 0552— _____ 3 _____ 0553— _____ 4 _____ 0554— _____ 5 _____ 0555— _____ 6 _____ 0556— _____

7□0557—□□□ 8□0558—□□□□□□ 9 ...

manwa□□□□□□□□ - □□□□

Feb 4, 2025 · manwa.com 日本語 manwa.com 日本語 <https://manwa.site> <https://manwa.life> <https://manwa.biz> <https://manwa.asia> ...

“area” “region” “zone” “district” 〇〇〇〇〇〇〇〇_〇〇〇〇

area 60 years ago, half French people were still living in the rural area. region ...

□ □ □ □ □ □ □ □ □ □ □ □ □ □ □ □

□ ...

□□□□□□□□□□□□□□□□□□□□

[illegible]

□ □ □ □ □ □ □ □ □ □ □ □ □ _ □ □ □ □

025 0510 0511 0512 0513
0514 ...

□□□□□□□□□□□□□□□□□□□□

0571 0574 0577 0575 0572 0573 0579 0570
0576 0578 0580 ...

□□□□□□□□ - □□□□

020066+075+076+ “”
 ...

wland -

Sep 6, 2024 · wland Wland 1. **

□□□□□□□□" +86"□□□" +086"□" +0086" □□□□

$\text{0x} + \text{0086}$ $\text{0x} 3$ $\text{0x} 86$

□ □ □ □ □ □ □ □ □ □	-	□ □ □ □
---------------------	---	---------

□□□□□□□□□□□□□□ 1□0551—□□□ 2□0552—□□□ 3□0553—□□□ 4□0554—□□□ 5□0555—□□□□ 6□0556—□□□
7□0557—□□□ 8□0558—□□□□ ...

manwa -

Feb 4, 2025 · [manwa](https://manwa.site) <https://manwa.life> <https://manwa.biz> ...

Master the area of composite shapes with our comprehensive worksheet! Perfect for students and teachers. Discover how to simplify complex calculations today!

[Back to Home](#)