

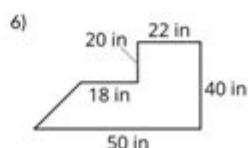
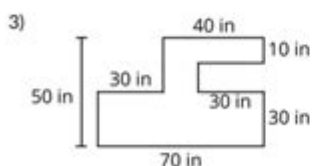
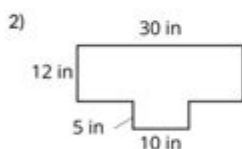
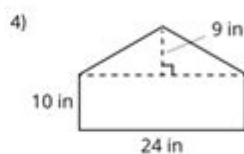
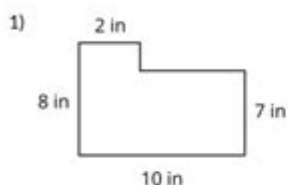
Area Of Composite Figures Worksheet

Area of Composite Figures

Practice Worksheet A

1 Practice Problems

Find the area of each composite figure.



Area of composite figures worksheet is an essential educational resource designed to enhance the understanding of geometry, particularly in calculating the areas of complex shapes formed by combining different geometric figures. These worksheets typically feature a variety of composite figures, allowing students to practice their skills in breaking down these shapes into simpler components, making it easier to determine their total area. In this article, we will explore the importance of learning about composite figures, the common types of composite shapes, and provide tips for creating effective worksheets.

Understanding Composite Figures

Composite figures, as the name suggests, are shapes that consist of two or more geometric figures. These figures can be a combination of two-dimensional shapes such as rectangles, triangles, circles, and trapezoids. Understanding how to calculate the area of these composite shapes is crucial for students as it not only helps in geometry but also lays the groundwork for more advanced mathematical concepts.

Why Are Worksheets Important?

Worksheets focused on the area of composite figures serve multiple educational purposes:

- **Practice Skills:** They provide students with the opportunity to apply their knowledge and practice calculating areas.
- **Visual Learning:** These worksheets often include diagrams that aid visual learners in understanding the spatial aspects of geometry.
- **Assessment:** Teachers can use these worksheets to assess student understanding and identify areas where additional instruction may be needed.
- **Engagement:** Interactive worksheets can make learning more engaging, encouraging students to explore geometry in a hands-on way.

Common Types of Composite Figures

To effectively calculate the area of composite figures, it is essential to understand the types of shapes that may be combined. Here are some common types of composite figures:

- **Rectangles and Squares:** These are the simplest shapes, often serving as the base for more complex figures.
- **Triangles:** Triangles can be combined with other shapes, and their area is calculated using the formula $A = \frac{1}{2} \text{ base height}$.
- **Circles:** The area of circles is calculated using the formula $A = \pi \text{ radius}^2$, and they can be combined with other figures in various ways.

- **Trapezoids:** These shapes have one pair of parallel sides and require a different formula: $A = 1/2 (\text{base1} + \text{base2}) \text{ height}$.
- **Irregular Shapes:** Some composite figures may not fit neatly into standard categories and require a more creative approach to break them down.

Steps to Calculate the Area of Composite Figures

Calculating the area of composite figures can be straightforward if you follow these steps:

1. **Identify the Shapes:** Look at the composite figure and identify the individual shapes that make it up.
2. **Calculate Individual Areas:** Use the appropriate formulas to calculate the area of each individual shape.
3. **Sum the Areas:** Add the areas of the individual shapes together to find the total area of the composite figure.
4. **Subtract any Overlaps:** If any shapes overlap, make sure to subtract the area of the overlapping section.

Example Problem

To provide a practical understanding, let's consider an example problem:

Problem: Calculate the area of a figure composed of a rectangle measuring 5 cm by 3 cm and a semicircle on top of the rectangle with a diameter of 3 cm.

1. Calculate the area of the rectangle:
- $\text{Area} = \text{length} \times \text{width} = 5 \text{ cm} \times 3 \text{ cm} = 15 \text{ cm}^2$
2. Calculate the radius of the semicircle:
- $\text{Radius} = \text{diameter} / 2 = 3 \text{ cm} / 2 = 1.5 \text{ cm}$
3. Calculate the area of the semicircle:
- $\text{Area} = (\pi \times \text{radius}^2) / 2 = (\pi \times (1.5 \text{ cm})^2) / 2 \approx (3.14 \times 2.25 \text{ cm}^2) / 2 \approx 3.53 \text{ cm}^2$

4. Total area of the composite figure:

- Total area = area of rectangle + area of semicircle = $15 \text{ cm}^2 + 3.53 \text{ cm}^2 \approx 18.53 \text{ cm}^2$

Creating Effective Worksheets

When designing an area of composite figures worksheet, consider the following tips:

- **Variety of Problems:** Include a range of problems that vary in difficulty to accommodate different skill levels.
- **Clear Instructions:** Provide clear and concise instructions for each problem to guide students in their calculations.
- **Visual Aids:** Incorporate diagrams and illustrations of composite figures to help students visualize the shapes.
- **Answer Key:** Include an answer key to allow students to check their work and understand any mistakes.
- **Real-World Applications:** Add problems that relate to real-world scenarios to demonstrate the practical uses of calculating areas.

Conclusion

In conclusion, an **area of composite figures worksheet** is a vital tool for students learning geometry. By breaking down complex shapes into simpler components, students can develop a deeper understanding of area calculation and enhance their problem-solving skills. The ability to work with composite figures not only prepares students for advanced mathematical concepts but also equips them with skills applicable in real-world situations. By utilizing well-structured worksheets and practicing regularly, students can master the area of composite figures and build a solid foundation in geometry.

Frequently Asked Questions

What is a composite figure in geometry?

A composite figure is a shape that is made up of two or more basic geometric figures, such as rectangles, triangles, circles, or trapezoids.

How do you find the area of a composite figure?

To find the area of a composite figure, you can break it down into its basic shapes, calculate the area of each shape individually, and then sum those areas.

What formulas are commonly used for calculating the area of basic shapes in composite figures?

Common formulas include: Area of a rectangle = length \times width, Area of a triangle = $\frac{1}{2} \times \text{base} \times \text{height}$, Area of a circle = $\pi \times \text{radius}^2$, and Area of a trapezoid = $\frac{1}{2} \times (\text{base1} + \text{base2}) \times \text{height}$.

Can you provide an example of a composite figure?

An example of a composite figure could be a rectangle with a semicircle attached to one of its shorter sides.

What should I do if the composite figure contains overlapping shapes?

If the composite figure contains overlapping shapes, you should calculate the area of each shape separately and then subtract the area of the overlapping region to avoid double counting.

What is the importance of learning to calculate the area of composite figures?

Calculating the area of composite figures is important as it enhances spatial reasoning, problem-solving skills, and is applicable in real-life situations such as architecture and landscaping.

Are there any online resources or worksheets available for practicing area of composite figures?

Yes, many educational websites offer free worksheets and interactive tools for practicing the area of composite figures, such as Kahn Academy, Math-Aids, and Education.com.

What are some common mistakes to avoid when calculating the area of composite figures?

Common mistakes include forgetting to convert measurements to the same unit, miscalculating the area of individual shapes, and not properly summing or subtracting areas in composite shapes.

How can I check my answers when solving area of

composite figures problems?

You can check your answers by reviewing each calculation step, comparing with solution keys available in worksheets, or using geometry software that provides area calculations.

What age group or grade level typically works with area of composite figures worksheets?

Area of composite figures worksheets are typically aimed at middle school students, usually in grades 6 to 8, as they start to learn about geometry and area calculations.

Find other PDF article:

<https://soc.up.edu.ph/20-pitch/pdf?docid=jEj90-6096&title=ess-201-exam-answers.pdf>

Area Of Composite Figures Worksheet

"area" "region" "zone" "**district**" _____

area[] 60 years ago, half French people were still living in the rural area. region[] ...

[illegible]

□□□□□□□□□□□□□□□□□□□□

Apr 27, 2024 · 00:00
...

[illegible]

025 0510 0511 0512 0513
0514 ...

0571 0574 0577 0575 0572 0573 0579 0570
0576 0578 0580 ...

□□□□□□□□ - □□□□

020066+075+076+ “”
 ...

wland -

Sep 6, 2024 · wland Wland 1. **

manwa +86" +086" +0086" _

+0086 3 86 28 ...

manwa -

10551—20552—30553—40554—50555—60556—70557—80558— ...

manwa -

Feb 4, 2025 · manwa <https://manwa.site> <https://manwa.life> <https://manwa.biz> ...

“area”“region”“zone”“district”_

area 60 years ago, half French people were still living in the rural area. region ...

_

86 1 ...

_

Apr 27, 2024 · 00 ...

_

02505100511051205130514 ...

_

0571 0574 0577 0575 0572 05730579 0570 0576 0578 0580 ...

-

020066+075+076+ “” ...

wland -

Sep 6, 2024 · wland Wland 1. ** ...

manwa +86" +086" +0086" _

+0086 3 86 28 ...

-

10551—20552—30553—40554—50555—60556—70557—80558— ...

manwa -

Feb 4, 2025 · manwa <https://manwa.site> <https://manwa.life> <https://manwa.biz> ...

Unlock the secrets of geometry with our area of composite figures worksheet! Perfect for practice and mastering concepts. Learn more and enhance your skills today!

[Back to Home](#)