
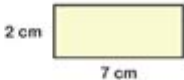
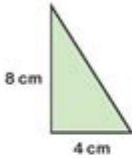
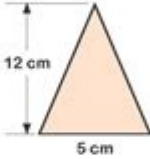
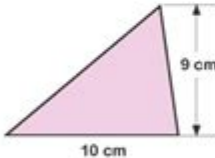
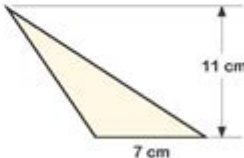
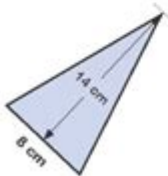
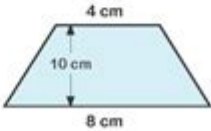


# Area Of Plane Shapes Worksheet

## Area of 2D Shapes

Work out the area of the 2D shapes.

NOT TO SCALE

1) 	2) 
3) 	4) 
5) 	6) 
7) 	8) 

## Area of Plane Shapes Worksheet

Understanding the area of plane shapes is a fundamental aspect of geometry that students encounter in their early education. Worksheets designed to teach this concept play a crucial role in helping learners grasp the principles of area calculation for various two-dimensional figures. This article will delve into the importance of these worksheets, the types of plane shapes involved, formulas for calculating area, and practical tips for creating effective worksheets that can enhance students' learning experiences.

# Importance of Learning Area of Plane Shapes

The area of plane shapes is not merely an academic requirement; it has real-world applications that are essential for everyday life. Here are several reasons why it's important for students to learn about area:

1. Practical Applications: Understanding area is vital for tasks such as measuring land, determining the amount of paint needed for a wall, or figuring out the size of a garden.
2. Foundation for Advanced Topics: Knowledge of area lays the groundwork for more complex mathematical concepts, including volume and surface area in three-dimensional shapes.
3. Problem-Solving Skills: Working on area problems helps develop critical thinking and problem-solving abilities, which are applicable in various fields and everyday situations.
4. Increased Engagement: Worksheets that incorporate real-life scenarios can make learning about area more engaging and relevant to students.

## Types of Plane Shapes

To effectively create an area of plane shapes worksheet, it's essential to understand the different types of shapes that students may encounter. Here are some common plane shapes:

### 1. Squares

- Definition: A square is a quadrilateral with all sides of equal length and all angles measuring 90 degrees.

- Area Formula: The area  $(A)$  of a square can be calculated using the formula:

$$A = s^2$$

where  $(s)$  is the length of one side.

### 2. Rectangles

- Definition: A rectangle is a quadrilateral with opposite sides equal and four right angles.

- Area Formula: The area  $(A)$  of a rectangle is given by:

$$A = l \times w$$

where  $(l)$  is the length and  $(w)$  is the width.

### 3. Triangles

- Definition: A triangle is a three-sided polygon.

- Area Formula: The area  $(A)$  of a triangle can be calculated using:

$$A = \frac{1}{2} \times b \times h$$

\]

where  $(b)$  is the base and  $(h)$  is the height.

## 4. Circles

- Definition: A circle is a round shape where all points are equidistant from the center.

- Area Formula: The area  $(A)$  of a circle is calculated using the formula:

\[

$$A = \pi r^2$$

\]

where  $(r)$  is the radius.

## 5. Parallelograms

- Definition: A parallelogram is a four-sided shape where opposite sides are parallel and equal in length.

- Area Formula: The area  $(A)$  of a parallelogram can be found using:

\[

$$A = b \times h$$

\]

where  $(b)$  is the base and  $(h)$  is the height.

## 6. Trapezoids

- Definition: A trapezoid is a four-sided figure with at least one pair of parallel sides.

- Area Formula: The area  $(A)$  of a trapezoid is given by:

\[

$$A = \frac{1}{2} \times (b_1 + b_2) \times h$$

\]

where  $(b_1)$  and  $(b_2)$  are the lengths of the parallel sides and  $(h)$  is the height.

# Creating an Area of Plane Shapes Worksheet

When designing an area of plane shapes worksheet, it's crucial to ensure that it effectively engages students and reinforces their understanding of the topic. Here are some strategies to consider:

## 1. Include a Variety of Shapes

To cater to different learning styles, include a range of shapes. This approach allows students to practice calculations with squares, rectangles, triangles, circles, parallelograms, and trapezoids.

## 2. Provide Clear Instructions

Ensure that the worksheet has clear, concise instructions. For example:

- Calculate the area of the following shapes.
- Use the formulas provided.
- Show your work.

### **3. Use Visual Aids**

Incorporate diagrams of each shape. Visual aids can help students better understand the dimensions they need to use when calculating area.

### **4. Incorporate Real-Life Applications**

Include word problems that relate to real-life scenarios. For example:

- "A rectangular garden measures 10 meters long and 5 meters wide. What is its area?"
- "If a circular pool has a radius of 3 meters, what is the area of the surface of the water?"

### **5. Provide Space for Work and Answers**

Design the worksheet with ample space for students to show their calculations and write their answers. This practice promotes good habits in problem-solving.

### **6. Include a Challenge Section**

To cater to advanced learners, consider adding a section with more complex problems, such as finding the area of composite shapes or solving problems involving units of measurement.

## **Assessment and Feedback**

After distributing the worksheets, it's essential to assess students' understanding of the area of plane shapes. Here are some assessment methods:

1. Review Answers: Go over the worksheet in class, discussing common mistakes and clarifying any misunderstandings.
2. Peer Review: Encourage students to swap worksheets and review each other's work. This can promote collaborative learning.
3. Follow-up Activities: Plan follow-up activities or quizzes to reinforce the concepts learned from the worksheet.

## **Conclusion**

The area of plane shapes worksheet serves as a vital educational tool that can greatly enhance students' understanding of geometry. By providing clear instructions, a variety of shapes, and real-world applications, educators can create engaging and effective worksheets that cater to various learning styles. As students practice calculating the areas of different shapes, they not only develop

mathematical skills but also apply these skills to everyday situations, making geometry a relevant and enjoyable subject.

## **Frequently Asked Questions**

### **What types of plane shapes are typically included in an area of plane shapes worksheet?**

An area of plane shapes worksheet typically includes shapes such as squares, rectangles, triangles, circles, parallelograms, and trapezoids.

### **How do you calculate the area of a rectangle?**

To calculate the area of a rectangle, multiply its length by its width. The formula is  $\text{Area} = \text{Length} \times \text{Width}$ .

### **What is the formula for finding the area of a triangle?**

The area of a triangle can be found using the formula  $\text{Area} = \frac{1}{2} \times \text{Base} \times \text{Height}$ .

### **Are there different methods to find the area of a circle?**

Yes, the area of a circle can be calculated using the formula  $\text{Area} = \pi \times r^2$ , where  $r$  is the radius of the circle.

### **Why are worksheets on the area of plane shapes important for students?**

Worksheets on the area of plane shapes are important as they help students practice and reinforce their understanding of geometric concepts and area calculations.

### **Can area of plane shapes worksheets include word problems?**

Yes, area of plane shapes worksheets can include word problems to help students apply their knowledge in real-life scenarios.

### **What skills do students develop while working on area of plane shapes worksheets?**

Students develop problem-solving skills, critical thinking, and a deeper understanding of geometry and measurement while working on these worksheets.

Find other PDF article:

<https://soc.up.edu.ph/63-zoom/files?dataid=eid67-4963&title=translate-from-english-to-georgian-language.pdf>

# Area Of Plane Shapes Worksheet

“area” “region” “zone” “district” □□□□□□ □□□□

area 60 years ago, half French people were still living in the rural area. region ...

[illegible]

$\square \dots$

□□□□□□□□□□□□□□ □□□□

[illegible]

□□□□□□□□□□□□□□□□□□

```

0250510051105120513
0514 ...

```

□□□□□□□□□□□□□□□□□□

```
00000000000000000000 0571 000 0574 0000 0577000 0575 0000 0572 0000 057300000579 000005700
0000576 0 00005780 0000580 ...
```

□□□□□□□□ - □□□□

020066+075+076+ " " ...

*wland*□□□□□□ - □□□□

Sep 6, 2024 · wland Wland 1. \*\* \*\* ...

□□□□□□□□“+86”□□□□“+086”□“+0086” □□□□

$+0086$  3 ... 86  
... 28 ...

□□□□□□□□□□ - □□□□

□□□□□□□□□□□□□□□□ 1□0551—□□□ 2□0552—□□□ 3□0553—□□□ 4□0554—□□□ 5□0555—□□□□ 6□0556—□□□  
7□0557—□□□□ 8□0558—□□□□ ...

*manwa*□□□□□□□□ - □□□□

Feb 4, 2025 · [manwa](https://manwa.site) [manwa.life](https://manwa.life) [manwa.biz](https://manwa.biz) ...

“area” “region” “zone” “district” □□□□□□ □□□□

area 60 years ago, half French people were still living in ...

86 ...

□□□□□□□□□□□□□□□□□□□□

Apr 27, 2024 ·  ...

[illegible]

0571 0574 0577 0575 0572 0573 ...

[Back to Home](#)