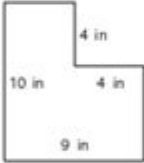


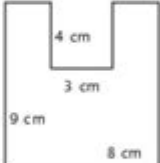
Area And Perimeter Of Composite Figures Worksheet

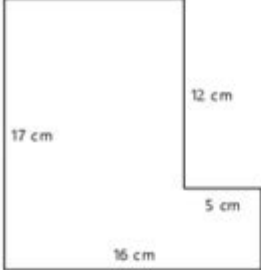
Name: _____

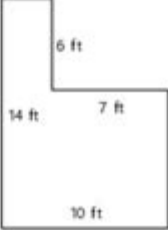
Area and Perimeter of Composite Shapes


Find the area and perimeter.

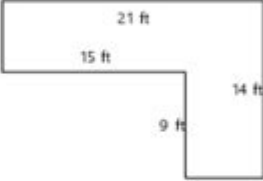
1) 

2) 

3) 

4) 

5) 

6) 

© copyright 2023 For Personal and Educational Use Only <https://k12mathworksheets.com>

Area and Perimeter of Composite Figures Worksheet

Understanding the area and perimeter of composite figures is an essential skill in geometry. Composite figures are shapes that are made up of two or more basic geometric shapes, such as rectangles, triangles, circles, and squares. To effectively calculate the area and perimeter of these figures, students must be familiar with the formulas for the area and perimeter of the individual shapes that compose the figure. This article will provide a comprehensive guide to worksheets designed for practicing these concepts, the formulas involved, and strategies for solving problems related to composite figures.

What are Composite Figures?

Composite figures can be described as shapes formed by combining two or more simple geometric shapes. For instance, a figure made up of both a rectangle and a semicircle is considered a composite figure. To find the area and perimeter of such figures, one must break them down into their constituent shapes.

Examples of Composite Figures

1. Rectangle attached to a Triangle: A common shape where a rectangle and a right triangle share one side.
2. Circle with a Rectangle: A figure that combines a circle on top of a rectangle.
3. L-Shaped Figures: Composed of two rectangles joined at a right angle.

Formulas for Area and Perimeter

Before tackling composite figures, it is crucial to know the basic formulas for area and perimeter of simple shapes.

Area Formulas

- Rectangle: $\text{Area} = \text{length} \times \text{width}$
- Square: $\text{Area} = \text{side} \times \text{side}$
- Triangle: $\text{Area} = (\text{base} \times \text{height}) / 2$
- Circle: $\text{Area} = \pi \times \text{radius}^2$
- Trapezoid: $\text{Area} = (\text{base1} + \text{base2}) / 2 \times \text{height}$

Perimeter Formulas

- Rectangle: $\text{Perimeter} = 2 \times (\text{length} + \text{width})$
- Square: $\text{Perimeter} = 4 \times \text{side}$
- Triangle: $\text{Perimeter} = \text{side1} + \text{side2} + \text{side3}$
- Circle: $\text{Circumference} = 2 \times \pi \times \text{radius}$
- Trapezoid: $\text{Perimeter} = \text{side1} + \text{side2} + \text{base1} + \text{base2}$

Steps to Calculate Area and Perimeter of Composite Figures

Calculating the area and perimeter of composite figures involves a few systematic steps:

1. Identify the Shapes: Determine which simple shapes make up the composite figure.
2. Calculate Individual Areas: Use the appropriate formulas to find the area of each simple shape.
3. Sum the Areas: Add the areas of the individual shapes to get the total area of the composite figure.
4. Calculate Individual Perimeters: Similarly, find the perimeter of each shape.
5. Combine the Perimeters: Be cautious when summing the perimeters; ensure you do not double-count any shared sides.

Example Problem: Area and Perimeter Calculation

Consider a composite figure made up of a rectangle with dimensions 5 cm by 4 cm and a triangle with a base of 4 cm and a height of 3 cm attached to one of the shorter sides of the rectangle.

Step 1: Identify the Shapes

- Rectangle: 5 cm × 4 cm
- Triangle: base = 4 cm, height = 3 cm

Step 2: Calculate Individual Areas

- Area of Rectangle = 5 cm × 4 cm = 20 cm²
- Area of Triangle = (4 cm × 3 cm) / 2 = 6 cm²

Step 3: Sum the Areas

$$\text{Total Area} = 20 \text{ cm}^2 + 6 \text{ cm}^2 = 26 \text{ cm}^2$$

Step 4: Calculate Individual Perimeters

- Perimeter of Rectangle = 2 × (5 cm + 4 cm) = 18 cm
- Perimeter of Triangle = 4 cm + 3 cm + 4.47 cm ≈ 11.47 cm (assuming right triangle)

Step 5: Combine the Perimeters

- The perimeter of the composite figure will be the perimeter of the rectangle plus the perimeter of the triangle minus the shared side (4 cm).

$$\text{Total Perimeter} = 18 \text{ cm} + 11.47 \text{ cm} - 4 \text{ cm} \approx 25.47 \text{ cm}$$

Creating a Worksheet for Practice

To enhance understanding and mastery of the area and perimeter of composite figures, educators can create worksheets. Here are some elements to include:

Worksheet Structure

1. Instructions: Clearly state what is required from the students (e.g., "Calculate the area and perimeter of the following composite figures").
2. Figures: Provide a series of composite figures with varying levels of complexity.
3. Space for Calculations: Include designated areas for students to show their work, reinforcing the importance of step-by-step calculations.
4. Challenge Problems: Incorporate more complex figures for advanced students, such as those that

require the use of the Pythagorean theorem for triangles.

5. Answer Key: Offer an answer key for self-assessment, which is crucial for independent learning.

Example Problems for the Worksheet

1. A rectangle measuring 8 cm by 5 cm with a semicircle with radius 4 cm attached to one of the shorter sides. Calculate the area and perimeter.
2. A composite figure made of a square (side = 6 cm) and a triangle (base = 6 cm, height = 4 cm) attached to it. Find the total area and perimeter.
3. An L-shaped figure made from two rectangles: one of dimensions 3 cm by 6 cm and the other 3 cm by 2 cm. Determine the area and perimeter.

Conclusion

The area and perimeter of composite figures are vital concepts in geometry that require students to apply their understanding of basic shapes. By breaking down complex figures into simpler parts, students can build their confidence and problem-solving skills. Worksheets designed to practice these concepts offer an effective way to reinforce learning and provide opportunities to explore various configurations of geometric shapes. Through consistent practice, students will become adept at calculating the area and perimeter of composite figures, preparing them for more advanced mathematical concepts in the future.

Frequently Asked Questions

What are composite figures in geometry?

Composite figures are shapes that are made up of two or more simpler geometric shapes, such as rectangles, triangles, and circles.

How do you find the area of a composite figure?

To find the area of a composite figure, calculate the area of each individual shape and then sum them up.

What is the formula for finding the perimeter of a composite figure?

The perimeter of a composite figure is found by adding the lengths of all the outer sides of the individual shapes that make up the figure.

Can you give an example of a composite figure?

An example of a composite figure is a shape formed by combining a rectangle and a semicircle on one of its shorter sides.

What tools are typically used to solve area and perimeter problems for composite figures?

Common tools include rulers or measuring tapes for measuring dimensions, as well as calculators for performing calculations.

Are there specific strategies for teaching area and perimeter of composite figures?

Yes, strategies include breaking down the composite figure into simpler shapes, using grid paper for visualization, and applying real-world examples.

How can technology assist in learning about composite figures?

Technology can assist through interactive software, online graphing tools, and educational apps that allow students to manipulate composite figures and visualize area and perimeter.

What common mistakes do students make when calculating area and perimeter of composite figures?

Common mistakes include forgetting to account for all parts of the figure, miscalculating the dimensions, or not correctly adding the areas and perimeters of the individual shapes.

Where can I find worksheets for practicing area and perimeter of composite figures?

Worksheets can be found on educational websites, math resource platforms, and in textbooks that focus on geometry and measurement.

Find other PDF article:

<https://soc.up.edu.ph/59-cover/files?docid=cXX45-3978&title=the-heart-is-a-lonely-hunter-carson-mc-cullers.pdf>

Area And Perimeter Of Composite Figures Worksheet

“area” “region” “zone” “district” □□□□□□ □□□□

area 60 years ago, half French people were still living in the rural area. region ...

[illegible]

[illegible]

025 0510 0511 0512 0513
0514 ...

0571 0574 0577 0575 0572 0573 0579 0570
0576 0578 0580 ...

020066+075+076+ “”
 ...

Sep 6, 2024 · wland Wland 1. ** ** ...

+0086 3 86 28 ...

□□□□□□□□□□□□□□ 1□0551—□□□ 2□0552—□□□ 3□0553—□□□ 4□0554—□□□ 5□0555—□□□□ 6□0556—□□□
7□0557—□□□ 8□0558—□□□□ ...

Feb 4, 2025 · manwa.com 日本語 | English | 中文 | 繁體中文 | العربية | हिन्दी | বাংলা | ગુજરાતી | తెలుగు | தமிழ் | བོད་སྐད་ | ལྷན་སྐད་ | မြန်မာစာ | ไทย | ភាសាខ្មែរ | বাংলা | ગુજરાતી | తెలుగు | தமிழ் | བོད་སྐད་ | ལྷན་སྐད་ | မြန်မာစာ | ไทย | ភាសាខ្មែរ
https://manwa.site | https://manwa.life | https://manwa.biz | ...

area 60 years ago, half French people were still living in the rural area. region ...

$\frac{1}{n}$...

[illegible][illegible]

0571 0574 0577 0575 0572 0573 0579 0570
0576 0578 0580 ...

020066+075+076+ “ ”
 ...

Sep 6, 2024 · wland[Wland1. **]** ...

+0086 3 86 28 ...

□□□□□□□□□□□□□□□□ 1□0551—□□□ 2□0552—□□□ 3□0553—□□□ 4□0554—□□□ 5□0555—□□□□ 6□0556—□□□
7□0557—□□□□ 8□0558—□□□□ ...

Feb 4, 2025 · [manwa](https://manwa.site) <https://manwa.life> <https://manwa.biz> ...

Unlock the secrets of geometry with our area and perimeter of composite figures worksheet. Perfect for practice! Learn more and enhance your skills today!

[Back to Home](#)