

Area Of Parallelogram Worksheet Kuta

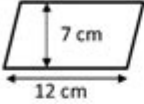
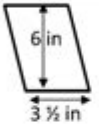
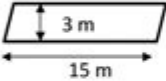
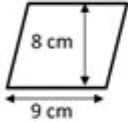
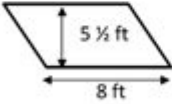
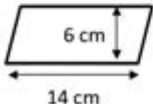
Name _____

Date _____



AREA OF A PARALLELOGRAM SHEET 1

Use the base and height measurement to find the area of these parallelograms.

	WORKING OUT	AREA
1) 		
2) 		
3) 		
4) 		
5) 		
6) 		



Area of parallelogram worksheet Kuta is an essential educational resource designed to help students understand and master the concepts surrounding the area of parallelograms. Kuta Software is renowned for its user-friendly worksheets that cater to different mathematical topics, and the area of parallelograms is no exception. This article delves into the significance of this worksheet, its components, and how it aids in the learning process.

Understanding the Parallelogram

A parallelogram is a four-sided figure (quadrilateral) with opposite sides that are both equal in length and parallel. The properties of a parallelogram include:

- Opposite angles are equal.
- Consecutive angles are supplementary (add up to 180 degrees).
- The diagonals bisect each other.
- Area can be calculated using the formula: $\text{Area} = \text{base} \times \text{height}$.

Knowing these properties helps students not only in finding the area but also in solving various geometry problems that involve parallelograms.

The Area of a Parallelogram

To compute the area of a parallelogram, one must understand the significance of the base and height. The formula for the area is straightforward:

Formula

$\text{Area (A)} = \text{base (b)} \times \text{height (h)}$

Here, the base refers to one of the sides of the parallelogram, while the height is the perpendicular distance from the base to the opposite side. It is crucial not to confuse height with the length of the side of the parallelogram.

Importance of Worksheets in Learning

Worksheets like the area of parallelogram worksheet Kuta serve several purposes in the educational process:

1. Reinforcement of Concepts

Worksheets offer students an opportunity to practice the concepts taught in class. The area of parallelogram worksheet Kuta provides numerous problems that reinforce the formula and the properties of parallelograms.

2. Varied Difficulty Levels

Kuta worksheets typically feature problems organized by difficulty. This allows students to gradually build their confidence and skills, starting from basic problems and moving to more complex scenarios.

3. Immediate Feedback

By working through the problems on the worksheet, students can identify areas of weakness and seek help before moving on to new concepts. Teachers can also assess student understanding and provide targeted feedback.

4. Enhancing Problem-Solving Skills

Worksheets encourage critical thinking and problem-solving skills. Students learn to apply the area formula in different contexts, which enhances their overall mathematical proficiency.

Components of the Area of Parallelogram Worksheet Kuta

The area of parallelogram worksheet Kuta is typically structured to include various components that cater to different learning styles. Here are some common elements:

1. Multiple Choice Questions

These questions help students quickly assess their understanding of the area of a parallelogram. For example:

- What is the area of a parallelogram with a base of 10 cm and a height of 5 cm?
 - a) 15 cm^2
 - b) 25 cm^2
 - c) 50 cm^2
 - d) 100 cm^2

2. Fill-in-the-Blank Problems

These problems require students to apply the formula directly. For instance:

- The area of a parallelogram is ___ cm^2 when the base is 8 cm and the height is 4 cm.

3. Word Problems

Word problems encourage students to think critically and apply the area formula in real-life contexts. An example could be:

- A farmer wants to fence off a rectangular area of land that has a base of 30 meters and a height of 20 meters. What is the area of the land?

4. Diagrams

Worksheets often include diagrams of parallelograms with different dimensions. Students must label the base and height and then calculate the area. This visual aid reinforces understanding.

Tips for Using the Worksheet Effectively

To maximize the benefits of the area of parallelogram worksheet Kuta, consider the following tips:

1. **Review the Concepts:** Before tackling the worksheet, ensure you have a solid grasp of the properties of parallelograms and how to calculate their area.
2. **Start with Easy Problems:** Begin with the simpler questions to build confidence before progressing to more difficult ones.
3. **Use Graph Paper:** When working with diagrams, graph paper can help maintain accuracy in measuring base and height.
4. **Check Your Work:** After completing the worksheet, review your answers and ensure you understand any mistakes made.
5. **Seek Help When Needed:** If you find certain problems particularly challenging, don't hesitate to ask a teacher or a classmate for assistance.

Conclusion

The area of parallelogram worksheet Kuta is a valuable tool in mathematics education. By providing a structured approach to learning about parallelograms and their properties, it helps students build foundational skills that are crucial for future mathematical studies. Understanding the area of a parallelogram is not just about memorizing formulas; it's about developing the ability to visualize and apply these concepts in various situations.

As students work through the problems, they are not only preparing for exams but also cultivating analytical skills that will benefit them across various disciplines. With consistent practice using worksheets like those from Kuta, learners can become proficient in calculating the area of parallelograms and gain confidence in their overall mathematical abilities.

Frequently Asked Questions

What is the formula to calculate the area of a parallelogram?

The area of a parallelogram can be calculated using the formula: $\text{Area} = \text{base} \times \text{height}$.

How can I find the height of a parallelogram if I know the area and the base?

You can find the height by rearranging the area formula: $\text{height} = \text{Area} / \text{base}$.

What is the significance of the base and height in the area calculation of a parallelogram?

The base is one side of the parallelogram, and the height is the perpendicular distance from the base to the opposite side, which is crucial for accurate area calculation.

Are the diagonals of a parallelogram equal in length?

No, the diagonals of a parallelogram are not necessarily equal in length; they bisect each other but can vary in length.

Can the area of a parallelogram be calculated if only the lengths of the sides are known?

No, you need either the base and height or the lengths of the diagonals and the sine of the angle between them to calculate the area.

What type of problems can I find in an 'Area of Parallelogram' worksheet from Kuta Software?

The worksheet may include problems that require calculating area given dimensions, word problems involving real-life scenarios, and multi-step problems involving the properties of parallelograms.

Is the area of a parallelogram always greater than zero?

Yes, as long as the base and height are both positive values, the area will always be greater than zero.

What is the relationship between the area of a parallelogram and the area of a rectangle?

The area of a parallelogram is equal to the area of a rectangle formed by its base and height, as both share the same base and height dimensions.

How can I verify my answers when solving a parallelogram area worksheet?

You can verify your answers by double-checking calculations, using different methods to calculate the area, or comparing with known values.

What online resources can help me practice area of parallelogram problems?

Resources like Kuta Software, Khan Academy, and various math websites offer practice worksheets and interactive problems related to the area of parallelograms.

Find other PDF article:

<https://soc.up.edu.ph/29-scan/files?dataid=TIIm21-2941&title=how-do-you-want-it-lyrics.pdf>

Area Of Parallelogram Worksheet Kuta

“area” “region” “zone” “district”

area 60 years ago, half French people were still living in the rural area. region ...

□ □ □ □ □ □ □ □ □ □ □ □ □ □ □ □ □ □ □ □

00000000 0000 0000 0000000000 0000008600000000000000000000000000000000 00000010000000000000
 00000000 ...

[illegible]

Apr 27, 2024 ·

00

...

[illegible]

```

0250510051105120513
05140515 ...

```

□ □ □ □ □ □ □ □ □ □ □ □ □ □ □ □ □ □

0571 0574 0577 0575 0572 0573 0579 0570
0576 0578 0580 ...

□□□□□□□□ - □□□□

020066+075+076+ “” ...

wland -
Sep 6, 2024 · wlandWland1. **

“ +86” “ +086” “ +0086”_
+0086 3 86
28 ...

-
10551— 20552— 30553— 40554— 50555— 60556—
70557— 80558— 9 ...

manwa -
Feb 4, 2025 · manwa https://manwa.site
https://manwa.life https://manwa.biz https://manwa.asia ...

“area” “region” “zone” “district”_
area 60 years ago, half French people were still living in the
rural area. region ...

_
86 1
...

_
Apr 27, 2024 · 00
...

_
0250510051105120513
0514 ...

_
0571 0574 0577 0575 0572 05730579 0570
0576 0578 0580 ...

-
020066+075+076+ “” ...

wland -
Sep 6, 2024 · wlandWland1. **

“ +86” “ +086” “ +0086”_
+0086 3 86
28 ...

-
10551— 20552— 30553— 40554— 50555— 60556—

70557— 80558— ...

manwa -

Feb 4, 2025 · manwa <https://manwa.site>
<https://manwa.life> <https://manwa.biz> ...

Unlock the secrets of calculating the area of a parallelogram with our Kuta worksheet! Perfect for students and teachers. Discover how to master this concept today!

[Back to Home](#)