

# Area Of Polygon Worksheet With Answers

Name : \_\_\_\_\_

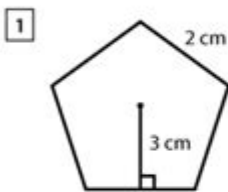
Score : \_\_\_\_\_ Date : \_\_\_\_\_



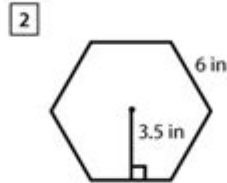
## Area of Regular Polygons Worksheet

Find the area of the given regular polygons.

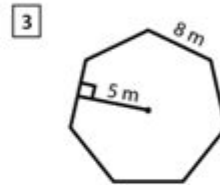
Use the formula. Area =  $\frac{1}{2} \times (\text{apothem} \times \text{perimeter})$



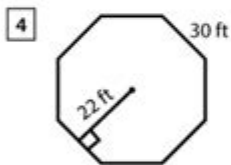
Area = \_\_\_\_\_



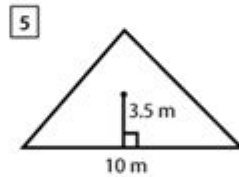
Area = \_\_\_\_\_



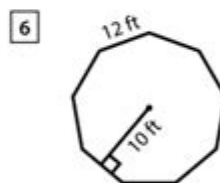
Area = \_\_\_\_\_



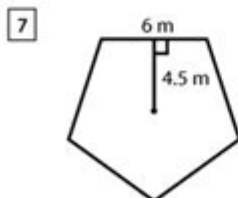
Area = \_\_\_\_\_



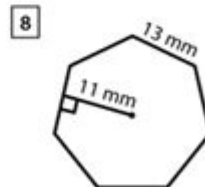
Area = \_\_\_\_\_



Area = \_\_\_\_\_



Area = \_\_\_\_\_



Area = \_\_\_\_\_

**Area of polygon worksheet with answers** is an essential resource for students and educators alike, as it provides a structured way to practice and understand the concepts of calculating the area of various polygons. Polygons are two-dimensional shapes with straight sides, and they can range from simple triangles to complex shapes with many sides. Understanding how to calculate the area of these shapes is fundamental in geometry and has practical applications in fields such as architecture, engineering, and design. This article will explore the different types of polygons, methods for calculating their areas, and provide a comprehensive worksheet with answers for practice.

# Understanding Polygons

Polygons are categorized based on the number of sides they have. The most common types of polygons include:

- **Triangles:** Three-sided polygons.
- **Quadrilaterals:** Four-sided polygons, including squares, rectangles, and trapezoids.
- **Pentagons:** Five-sided polygons.
- **Hexagons:** Six-sided polygons.
- **Heptagons:** Seven-sided polygons.
- **Octagons:** Eight-sided polygons.

Each type of polygon has specific formulas for calculating its area. Familiarity with these formulas allows students to tackle a variety of problems effectively.

## Formulas for Calculating the Area of Polygons

Understanding the formulas for calculating the area of different polygons is crucial. Here are the formulas for some common polygons:

### 1. Area of a Triangle

The area  $(A)$  of a triangle can be calculated using the formula:

$$A = \frac{1}{2} \times \text{base} \times \text{height}$$

Where the base is the length of the triangle's base, and the height is the perpendicular distance from the base to the opposite vertex.

### 2. Area of a Rectangle

The area  $(A)$  of a rectangle is given by:

$$A = \text{length} \times \text{width}$$

### 3. Area of a Square

For a square, where all sides are equal, the area  $(A)$  is calculated as:

$$A = \text{side}^2$$

### 4. Area of a Trapezoid

The area  $(A)$  of a trapezoid can be found using the formula:

$$A = \frac{1}{2} \times (\text{base}_1 + \text{base}_2) \times \text{height}$$

Where  $(\text{base}_1)$  and  $(\text{base}_2)$  are the lengths of the two parallel sides.

### 5. Area of a Circle

Although not a polygon, circles often come up in geometric problems. The area  $(A)$  of a circle is calculated as:

$$A = \pi \times \text{radius}^2$$

### 6. Area of a Regular Polygon

For regular polygons (where all sides and angles are equal), the area  $(A)$  can be calculated with the formula:

$$A = \frac{1}{4} \times n \times s^2 \times \cot\left(\frac{\pi}{n}\right)$$

Where  $(n)$  is the number of sides and  $(s)$  is the length of a side.

## Area of Polygon Worksheet

To reinforce learning, a worksheet can be helpful. Below is a sample worksheet featuring various polygons, followed by their answers.

## Worksheet Problems

1. Calculate the area of a triangle with a base of 10 cm and a height of 5 cm.
2. Find the area of a rectangle with a length of 8 m and a width of 3 m.
3. What is the area of a square with a side length of 4 inches?
4. Calculate the area of a trapezoid with bases of 6 cm and 10 cm, and a height of 4 cm.
5. A regular hexagon has a side length of 6 cm. Determine its area.

## Worksheet Answers

1. Area of Triangle:

$$( A = \frac{1}{2} \times 10 \times 5 = 25 \text{ , } \text{cm}^2 )$$

2. Area of Rectangle:

$$( A = 8 \times 3 = 24 \text{ , } \text{m}^2 )$$

3. Area of Square:

$$( A = 4^2 = 16 \text{ , } \text{in}^2 )$$

4. Area of Trapezoid:

$$( A = \frac{1}{2} \times (6 + 10) \times 4 = \frac{1}{2} \times 16 \times 4 = 32 \text{ , } \text{cm}^2 )$$

5. Area of Regular Hexagon:

$$( A = \frac{1}{4} \times 6 \times 6^2 \times \cot\left(\frac{\pi}{6}\right) )$$

$$( = \frac{1}{4} \times 6 \times 36 \times \frac{\sqrt{3}}{3} )$$

$$( = 18\sqrt{3} \approx 31.18 \text{ , } \text{cm}^2 )$$

## Benefits of Using Area of Polygon Worksheets

Worksheets that focus on the area of polygons offer several benefits:

- **Reinforcement of Concepts:** Worksheets provide practice that reinforces the formulas and methods learned in class.
- **Variety of Problems:** They often include a range of problems with varying difficulty levels, catering to different learning paces.
- **Self-Assessment:** Students can check their understanding and identify areas where they may need further study.
- **Preparation for Exams:** Regular practice with worksheets helps prepare students for assessments and standardized tests.

# Conclusion

In conclusion, a well-designed **area of polygon worksheet with answers** serves as a valuable tool for students to practice and enhance their understanding of geometric concepts. By mastering the formulas for calculating the area of various polygons, students not only improve their math skills but also gain confidence in their ability to tackle geometrical challenges. Whether used in the classroom or for self-study, these worksheets are an excellent resource for anyone looking to improve their knowledge of geometry.

## Frequently Asked Questions

### What is the formula for calculating the area of a triangle?

The area of a triangle can be calculated using the formula:  $\text{Area} = \frac{1}{2} \text{ base height}$ .

### How do you find the area of a rectangle?

The area of a rectangle is found using the formula:  $\text{Area} = \text{length width}$ .

### What is the area formula for a regular hexagon?

The area of a regular hexagon can be calculated using the formula:  $\text{Area} = \left(\frac{3\sqrt{3}}{2}\right) \text{ side}^2$ .

### How can I determine the area of a polygon if I know the coordinates of its vertices?

You can use the shoelace formula to find the area of a polygon given its vertices' coordinates.

### What is the area of a circle inscribed in a square with side length 's'?

The area of the inscribed circle is  $\text{Area} = \pi \left(\frac{s}{2}\right)^2$ .

### Are there worksheets available for practicing area calculations of different polygons?

Yes, many educational websites and math resources offer worksheets specifically for practicing area calculations of various polygons.

### What units should I use when calculating the area of polygons?

The area should be expressed in square units, such as square meters ( $\text{m}^2$ ), square centimeters ( $\text{cm}^2$ ), or square inches ( $\text{in}^2$ ), depending on the units used for the dimensions.

Find other PDF article:

<https://soc.up.edu.ph/64-frame/Book?docid=xjN64-5336&title=university-of-chicago-mathematics-project.pdf>

## Area Of Polygon Worksheet With Answers

“area” “region” “zone” “district” \_\_\_\_\_

area \_\_\_\_\_ 60 years ago, half French people were still living in the rural area. region \_\_\_\_\_ ...

\_\_\_\_\_

\_\_\_\_\_ 86 \_\_\_\_\_ 1 \_\_\_\_\_ ...

\_\_\_\_\_

Apr 27, 2024 · \_\_\_\_\_ 00 \_\_\_\_\_ ...

\_\_\_\_\_

\_\_\_\_\_ 025 \_\_\_\_\_ 0510 \_\_\_\_\_ 0511 \_\_\_\_\_ 0512 \_\_\_\_\_ 0513 \_\_\_\_\_ 0514 \_\_\_\_\_ ...

\_\_\_\_\_

\_\_\_\_\_ 0571 \_\_\_\_\_ 0574 \_\_\_\_\_ 0577 \_\_\_\_\_ 0575 \_\_\_\_\_ 0572 \_\_\_\_\_ 0573 \_\_\_\_\_ 0579 \_\_\_\_\_ 0570 \_\_\_\_\_ 0576 \_\_\_\_\_ 0578 \_\_\_\_\_ 0580 ...

\_\_\_\_\_ - \_\_\_\_\_

\_\_\_\_\_ 020 \_\_\_\_\_ 066+ \_\_\_\_\_ 075+ \_\_\_\_\_ 076+ \_\_\_\_\_ “ ” \_\_\_\_\_ ...

**wland** \_\_\_\_\_ - \_\_\_\_\_

Sep 6, 2024 · wland \_\_\_\_\_ Wland \_\_\_\_\_ 1. \*\* \_\_\_\_\_ \*\* \_\_\_\_\_ ...

\_\_\_\_\_ “ +86” \_\_\_\_\_ “ +086” \_\_\_\_\_ “ +0086” \_\_\_\_\_

\_\_\_\_\_ +0086 \_\_\_\_\_ 3 \_\_\_\_\_ 86 \_\_\_\_\_ 28 ...

\_\_\_\_\_ - \_\_\_\_\_

\_\_\_\_\_ 1 \_\_\_\_\_ 0551— \_\_\_\_\_ 2 \_\_\_\_\_ 0552— \_\_\_\_\_ 3 \_\_\_\_\_ 0553— \_\_\_\_\_ 4 \_\_\_\_\_ 0554— \_\_\_\_\_ 5 \_\_\_\_\_ 0555— \_\_\_\_\_ 6 \_\_\_\_\_ 0556— \_\_\_\_\_ 7 \_\_\_\_\_ 0557— \_\_\_\_\_ 8 \_\_\_\_\_ 0558— \_\_\_\_\_ ...

**manwa** \_\_\_\_\_ - \_\_\_\_\_

Feb 4, 2025 · \_\_\_\_\_ manwa \_\_\_\_\_ <https://manwa.site> \_\_\_\_\_ <https://manwa.life> \_\_\_\_\_ <https://manwa.biz> \_\_\_\_\_ ...

“area” “region” “zone” “district” \_\_\_\_\_

area \_\_\_\_\_ 60 years ago, half French people were still living in the

rural area. region[] []the Arctic regions[]

[illegible][illegible][illegible]

□□□□□□□□□□□□□□\_□□□□

025 0510 0511 0512 0513  
0514 0515 0516 0517

0571 0574 0577 0575 0572 0573 0579 0570  
0576 0578 0580 2090 ...

□□□□□□□□ - □□□□

020066+075+076+ “ ” 210006500020003400003 ...

**wland** -

Sep 6, 2024 · wland[Wland1. \*\*\*\* ...

□□□□□□□□" +86"□□□" +086"□" +0086" □□□□

[illegible]

□□□□□□□□□□ - □□□□

□□□□□□□□□□□□□□ 1□0551—□□□ 2□0552—□□□ 3□0553—□□□ 4□0554—□□□ 5□0555—□□□□ 6□0556—□□□  
7□0557—□□□ 8□0558—□□□□□□ 9□0559—□□□ 10□0550—□□□ 11□0561—□□□ 12□0562—□□□ 13□0563—□  
□□ 14□0564—□□□ 15□0566—□□□ □□□□ ...

*manwa*□□□□□□□□ - □□□□

Feb 4, 2025 · [manwa](https://manwa.site) <https://manwa.life> <https://manwa.biz> <https://manwa.asia> <https://manwa.fun> ...

Master the area of polygons with our comprehensive worksheet featuring answers. Perfect for students and teachers! Discover how to excel in geometry today!

[Back to Home](#)