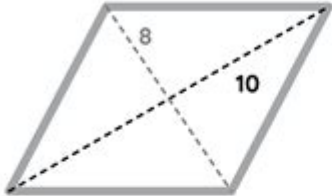
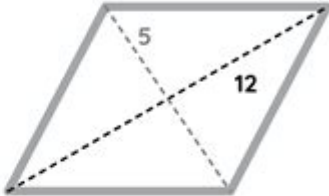
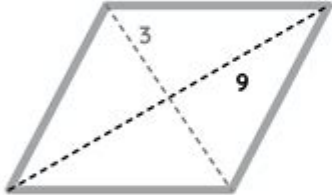
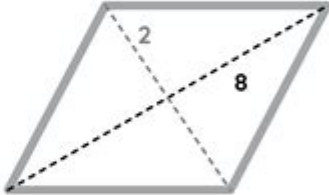
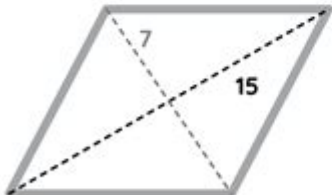
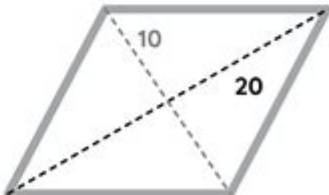


Area Of A Rhombus Worksheet

Area Of A Rhombus		SKOOLGO
		Name: _____
<p>➤ Calculate the area of each rhombus: <i>The shapes are not proportional to the measurements, it's just for illustrative purposes.</i></p>		
		
Area = <input type="text"/>	Area = <input type="text"/>	
		
Area = <input type="text"/>	Area = <input type="text"/>	
		
Area = <input type="text"/>	Area = <input type="text"/>	

Copyright © SKOOLGO. All Rights Reserved. More Free Worksheets for Kids available at skoolgo.com

Area of a rhombus worksheet is a valuable educational tool designed to help students understand the concept of the area of a rhombus and apply this knowledge through practice problems. A rhombus is a special type of quadrilateral characterized by its four equal sides and opposite angles that are equal. Understanding its properties and how to calculate its area is essential in geometry, and worksheets can effectively reinforce these concepts through exercises and examples.

Understanding the Rhombus

Before diving into the area of a rhombus worksheet, it is crucial to grasp the fundamental properties of a rhombus. Here are some key characteristics:

- **Equal Sides:** All four sides of a rhombus have the same length.
- **Diagonals:** The diagonals of a rhombus bisect each other at right angles and are not necessarily equal in length.
- **Angles:** Opposite angles are equal, and adjacent angles are supplementary (they add up to 180 degrees).
- **Symmetry:** A rhombus has two lines of symmetry along its diagonals.

These properties are essential as they lay the foundation for calculating the area.

Calculating the Area of a Rhombus

The area of a rhombus can be calculated using two primary formulas:

1. Using Base and Height

The first method involves the base and height of the rhombus. The formula is:

$$\text{Area} = \text{base} \times \text{height}$$

Where the base is the length of one side of the rhombus, and the height is the perpendicular distance from the base to the opposite side.

2. Using Diagonals

The second method uses the lengths of the diagonals. The formula is:

$$\text{Area} = \frac{1}{2} \times d_1 \times d_2$$

Where (d_1) and (d_2) are the lengths of the two diagonals of the rhombus. This formula is particularly useful when the diagonals are known but the height is not.

Creating an Area of a Rhombus Worksheet

An effective area of a rhombus worksheet should include a variety of problems that cater to different learning levels. Here's how to structure a worksheet:

1. Introduction Section

Start with a brief introduction explaining what a rhombus is and how to calculate its area. Include the formulas discussed above, along with a few examples to illustrate their application.

2. Practice Problems

Include a mix of problems, such as:

1. Calculate the area of a rhombus with a base of 10 cm and height of 8 cm.
2. Find the area of a rhombus if the lengths of the diagonals are 12 cm and 16 cm.
3. Determine the area of a rhombus where each side measures 5 cm and the height is 4 cm.
4. Given a rhombus with diagonals measuring 7 cm and 9 cm, calculate its area.

These problems will encourage students to practice both formulas.

3. Word Problems

Incorporate real-world applications to engage students further. For example:

- A rhombus-shaped garden has diagonals measuring 30 meters and 40 meters. What is the area of the garden?
- A rhombus-shaped kite has a base of 15 inches and a height of 20 inches. What is the area of the kite?

These word problems challenge students to visualize and apply their knowledge in practical scenarios.

4. Challenge Questions

For advanced students, include a section with challenging problems that require critical thinking. For instance:

- If the area of a rhombus is 48 cm^2 and one diagonal measures 8 cm, what is the length of the other diagonal?
- A rhombus has an area of 100 cm^2 , and the length of one diagonal is 20 cm. Find the length of the other diagonal.

These questions not only reinforce the formula but also encourage students to manipulate the equations to find missing values.

Tips for Using the Worksheet Effectively

To maximize the benefits of an area of a rhombus worksheet, consider the following tips:

- **Review Prior Knowledge:** Ensure students are comfortable with the properties of a rhombus and basic geometry concepts before attempting the worksheet.
- **Work in Pairs:** Encourage collaborative learning by having students work in pairs to solve the problems. This fosters discussion and deeper understanding.
- **Provide Immediate Feedback:** If possible, review answers with the students right after they complete the worksheet. This helps clarify misunderstandings and reinforces learning.
- **Incorporate Visual Aids:** Use diagrams or drawings of rhombuses to help students visualize the problems, especially when dealing with diagonals and height.

Conclusion

An area of a rhombus worksheet is a powerful educational resource that allows students to practice and solidify their understanding of how to calculate the area of rhombuses. By incorporating various types of problems, including direct calculations, word problems, and challenging scenarios, the worksheet can cater to different learning levels and encourage critical thinking. Through the use of effective teaching strategies and collaboration, students can gain confidence in their mathematical abilities, preparing them for more

advanced geometry concepts in the future. Ultimately, mastering the area of a rhombus is not only crucial for academic success but also enhances problem-solving skills that are valuable beyond the classroom.

Frequently Asked Questions

What is a rhombus?

A rhombus is a quadrilateral with all four sides of equal length and opposite angles that are equal.

How do you calculate the area of a rhombus?

The area of a rhombus can be calculated using the formula: $\text{Area} = (d_1 \times d_2) / 2$, where d_1 and d_2 are the lengths of the diagonals.

What is the significance of diagonals in a rhombus worksheet?

Diagonals of a rhombus bisect each other at right angles, and knowing their lengths is crucial for calculating the area.

Can the area of a rhombus be calculated using side length and height?

Yes, the area can also be calculated using the formula: $\text{Area} = \text{base} \times \text{height}$, where the base is the length of a side and height is the perpendicular distance from the base to the opposite side.

What kind of problems can you find in an area of a rhombus worksheet?

Problems may include finding the area given the lengths of the diagonals, side lengths, or height, as well as word problems involving real-life applications.

Are there any specific formulas needed for solving rhombus area problems?

The primary formulas needed are $\text{Area} = (d_1 \times d_2) / 2$ and $\text{Area} = \text{base} \times \text{height}$. Understanding how to apply these formulas is essential.

What is a common misconception about the area of a rhombus?

A common misconception is that the area can only be calculated using the diagonals; it can also be derived from the base and height.

How can a rhombus worksheet help students?

A rhombus worksheet helps students practice calculating area, reinforces understanding of properties of rhombuses, and improves problem-solving skills.

What tools might be needed to complete an area of a rhombus worksheet?

Students may need a ruler for measuring, a protractor for angles, and a calculator for computations.

Are there online resources available for rhombus area worksheets?

Yes, many educational websites offer downloadable worksheets, interactive quizzes, and instructional videos on calculating the area of a rhombus.

Find other PDF article:

<https://soc.up.edu.ph/33-gist/pdf?ID=vuZ29-4562&title=intel-5g-solution-5000.pdf>

Area Of A Rhombus Worksheet

“area” “region” “zone” “district” _____

area _____ 60 years ago, half French people were still living in the rural area. region _____ the Arctic regions _____

_____ 86 _____ 1 _____ 0 _____ 10 _____ ...

Apr 27, 2024 · _____ 00 _____ +86 _____ [] [00]

_____ 025 _____ 0510 _____ 0511 _____ 0512 _____ 0513 _____ 0514 _____ 0515 _____ 0516 _____ 0517 _____

_____ 0571 _____ 0574 _____ 0577 _____ 0575 _____ 0572 _____ 0573 _____ 0579 _____ 0570 _____ 0576 _____ 0578 _____ 0580 _____ 20 _____ 90 _____ ...

_____ - _____

_____ 020 _____ 066+ _____ 075+ _____ 076+ _____ “ ” _____

0000000000000000 100551—000 200552—000 300553—000 400554—000 500555—0000 600556—000
700557—000 800558—0000 ...

manwa0000000000 - 0000
Feb 4, 2025 · 000manwa000000000000000000000000 0000000000 https://manwa.site00000000
https://manwa.life 0 https://manwa.biz 0 ...

Unlock the secrets of geometry with our 'Area of a Rhombus Worksheet.' Perfect for students and teachers. Learn more to master this essential math concept!

[Back to Home](#)