

Area Of A Regular Polygon Worksheet

Name : _____

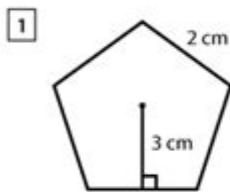
Score : _____ Date : _____



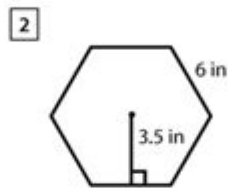
Area of Regular Polygons Worksheet

Find the area of the given regular polygons.

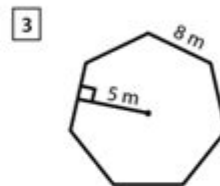
Use the formula. Area = $\frac{1}{2} \times (\text{apothem} \times \text{perimeter})$



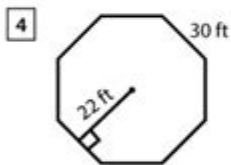
Area = _____



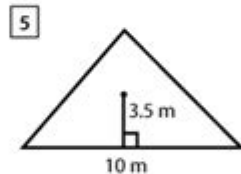
Area = _____



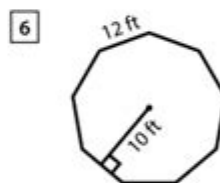
Area = _____



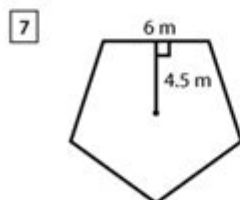
Area = _____



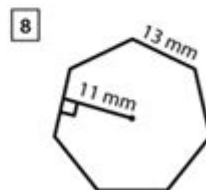
Area = _____



Area = _____



Area = _____



Area = _____

AREA OF A REGULAR POLYGON WORKSHEET

UNDERSTANDING THE AREA OF REGULAR POLYGONS IS AN ESSENTIAL CONCEPT IN GEOMETRY THAT HAS APPLICATIONS IN VARIOUS FIELDS, INCLUDING ARCHITECTURE, ENGINEERING, AND COMPUTER GRAPHICS. A REGULAR POLYGON IS DEFINED AS A POLYGON WITH ALL SIDES AND ANGLES EQUAL. EXAMPLES INCLUDE EQUILATERAL TRIANGLES, SQUARES, REGULAR PENTAGONS, HEXAGONS, AND OCTAGONS. THIS ARTICLE AIMS TO PROVIDE A COMPREHENSIVE OVERVIEW OF HOW TO CALCULATE THE AREA OF REGULAR POLYGONS, THE FORMULAS INVOLVED, AND HOW TO CREATE A WORKSHEET TO PRACTICE THESE CALCULATIONS.

WHAT IS A REGULAR POLYGON?

A REGULAR POLYGON HAS THE FOLLOWING CHARACTERISTICS:

- EQUAL SIDES: ALL SIDES OF THE POLYGON ARE OF THE SAME LENGTH.
- EQUAL ANGLES: ALL INTERIOR ANGLES ARE EQUAL.
- SYMMETRY: REGULAR POLYGONS ARE SYMMETRICAL, MEANING THEY CAN BE DIVIDED INTO EQUAL PARTS BY DRAWING LINES FROM THE CENTER TO THE VERTICES.

SOME STANDARD EXAMPLES OF REGULAR POLYGONS INCLUDE:

1. EQUILATERAL TRIANGLE
2. SQUARE
3. REGULAR PENTAGON
4. REGULAR HEXAGON
5. REGULAR OCTAGON

FORMULAS FOR AREA CALCULATION

CALCULATING THE AREA OF A REGULAR POLYGON INVOLVES SPECIFIC FORMULAS THAT DEPEND ON THE NUMBER OF SIDES, THE LENGTH OF THE SIDES, OR THE RADIUS OF THE CIRCUMSCRIBED CIRCLE (CIRCUMRADIUS). BELOW ARE THE FORMULAS FOR CALCULATING THE AREA OF VARIOUS REGULAR POLYGONS.

1. AREA OF AN EQUILATERAL TRIANGLE

FOR AN EQUILATERAL TRIANGLE WITH SIDE LENGTH (s) :

$$\text{Area} = \frac{\sqrt{3}}{4} s^2$$

2. AREA OF A SQUARE

FOR A SQUARE WITH SIDE LENGTH (s) :

$$\text{Area} = s^2$$

3. AREA OF A REGULAR PENTAGON

FOR A REGULAR PENTAGON WITH SIDE LENGTH (s) :

$$\text{Area} = \frac{1}{4} \sqrt{5(5 + 2\sqrt{5})} s^2$$

4. AREA OF A REGULAR HEXAGON

FOR A REGULAR HEXAGON WITH SIDE LENGTH (s) :

$$\text{Area} = \frac{3\sqrt{3}}{2} s^2$$

5. AREA OF A REGULAR OCTAGON

For a regular octagon with side length (s) :

$$\text{Area} = 2(1 + \sqrt{2}) s^2$$

6. GENERAL FORMULA FOR REGULAR POLYGONS

For a regular polygon with (n) sides and side length (s) :

$$\text{Area} = \frac{n s^2}{4 \tan\left(\frac{\pi}{n}\right)}$$

This formula provides a way to calculate the area of any regular polygon by knowing the number of sides and the side length.

CREATING AN AREA OF A REGULAR POLYGON WORKSHEET

Creating a worksheet on the area of regular polygons can be an engaging way to help students practice and understand the concepts. Below are some steps and examples of problems to include in your worksheet.

STEP 1: INTRODUCTION SECTION

Begin the worksheet with a brief introduction explaining what regular polygons are and the importance of knowing how to calculate their areas. Include the formulas mentioned above for reference.

STEP 2: PROBLEM SET

Include a variety of problems that require students to calculate the area of different regular polygons. Here are some examples:

1. EQUILATERAL TRIANGLE:

- Find the area of an equilateral triangle with a side length of 6 cm.

2. SQUARE:

- Calculate the area of a square with a side length of 5 m.

3. REGULAR PENTAGON:

- Determine the area of a regular pentagon with a side length of 4 inches.

4. REGULAR HEXAGON:

- COMPUTE THE AREA OF A REGULAR HEXAGON WITH A SIDE LENGTH OF 3 FT.

5. REGULAR OCTAGON:

- CALCULATE THE AREA OF A REGULAR OCTAGON WITH A SIDE LENGTH OF 2 M.

6. GENERAL POLYGON:

- A REGULAR POLYGON HAS 12 SIDES, AND EACH SIDE MEASURES 10 CM. WHAT IS THE AREA OF THE POLYGON?

STEP 3: SPACE FOR SOLUTIONS

PROVIDE AMPLE SPACE BELOW EACH PROBLEM FOR STUDENTS TO SHOW THEIR WORK AND CALCULATIONS. THIS ENCOURAGES THEM TO THINK CRITICALLY ABOUT THEIR PROCESS AND ALLOWS FOR EASY GRADING.

STEP 4: CHALLENGE PROBLEMS

TO DEEPEN UNDERSTANDING, INCLUDE A FEW CHALLENGE PROBLEMS THAT REQUIRE STUDENTS TO APPLY THEIR KNOWLEDGE IN DIFFERENT CONTEXTS, SUCH AS:

1. IF THE RADIUS OF A CIRCUMSCRIBED CIRCLE OF A REGULAR HEXAGON IS 5 CM, WHAT IS THE AREA OF THE HEXAGON?
2. A REGULAR POLYGON HAS AN AREA OF $30\sqrt{3}$ CM². IF EACH SIDE IS 6 CM, HOW MANY SIDES DOES THE POLYGON HAVE?

STEP 5: ANSWER KEY

AT THE END OF THE WORKSHEET, PROVIDE AN ANSWER KEY FOR SELF-ASSESSMENT. THIS HELPS STUDENTS CHECK THEIR WORK AND UNDERSTAND ANY MISTAKES THEY MAY HAVE MADE.

APPLICATIONS OF AREA CALCULATION

THE ABILITY TO CALCULATE THE AREA OF REGULAR POLYGONS HAS NUMEROUS APPLICATIONS IN REAL-LIFE SCENARIOS:

- ARCHITECTURE: ARCHITECTS MUST CALCULATE AREAS FOR FLOOR PLANS, ROOF DESIGNS, AND LANDSCAPING THAT OFTEN USE POLYGONAL SHAPES.
- ENGINEERING: ENGINEERS FREQUENTLY USE POLYGONS IN DESIGN AND MANUFACTURING PROCESSES, WHERE PRECISE AREA MEASUREMENTS CAN AFFECT MATERIAL USAGE AND COST.
- COMPUTER GRAPHICS: REGULAR POLYGONS ARE USED IN GRAPHIC DESIGN AND GAME DEVELOPMENT, WHERE AREA CALCULATIONS HELP IN RENDERING SHAPES ACCURATELY.

CONCLUSION

UNDERSTANDING THE AREA OF REGULAR POLYGONS IS FOUNDATIONAL IN GEOMETRY AND HAS PRACTICAL APPLICATIONS IN VARIOUS FIELDS. BY CREATING A WORKSHEET THAT INCLUDES DIVERSE PROBLEMS, STUDENTS CAN PRACTICE THEIR SKILLS AND GAIN CONFIDENCE IN THEIR ABILITIES TO CALCULATE AREAS ACCURATELY. MASTERY OF THESE CONCEPTS NOT ONLY AIDS IN ACADEMIC SUCCESS BUT ALSO PREPARES STUDENTS FOR REAL-WORLD APPLICATIONS OF GEOMETRY. WITH THE RIGHT RESOURCES AND PRACTICE, ANYONE CAN BECOME PROFICIENT IN CALCULATING THE AREA OF REGULAR POLYGONS.

FREQUENTLY ASKED QUESTIONS

WHAT IS THE FORMULA TO CALCULATE THE AREA OF A REGULAR POLYGON?

THE AREA A OF A REGULAR POLYGON CAN BE CALCULATED USING THE FORMULA $A = (1/2) \text{ PERIMETER APOTHEM}$ OR $A = (n s a) / 2$, WHERE n IS THE NUMBER OF SIDES, s IS THE LENGTH OF A SIDE, AND a IS THE APOTHEM.

HOW DO YOU FIND THE APOTHEM OF A REGULAR POLYGON?

THE APOTHEM CAN BE FOUND USING THE FORMULA $a = s / (2 \tan(\pi/n))$, WHERE s IS THE SIDE LENGTH AND n IS THE NUMBER OF SIDES.

WHAT IS A REGULAR POLYGON?

A REGULAR POLYGON IS A POLYGON WITH ALL SIDES AND ALL ANGLES EQUAL, SUCH AS AN EQUILATERAL TRIANGLE OR A SQUARE.

CAN THE AREA OF A REGULAR POLYGON BE CALCULATED IF ONLY THE SIDE LENGTH IS KNOWN?

YES, IF ONLY THE SIDE LENGTH IS KNOWN, YOU CAN USE THE FORMULA $A = (n s^2) / (4 \tan(\pi/n))$ TO CALCULATE THE AREA, WHERE n IS THE NUMBER OF SIDES.

WHAT IS THE SIGNIFICANCE OF THE NUMBER OF SIDES IN CALCULATING THE AREA OF A REGULAR POLYGON?

THE NUMBER OF SIDES AFFECTS BOTH THE PERIMETER AND THE APOTHEM, WHICH ARE CRUCIAL FOR CALCULATING THE AREA OF THE POLYGON.

HOW DO YOU DERIVE THE AREA FORMULA FOR A REGULAR POLYGON?

THE AREA FORMULA IS DERIVED BY DIVIDING THE POLYGON INTO n IDENTICAL ISOSCELES TRIANGLES, CALCULATING THE AREA OF ONE TRIANGLE, AND THEN MULTIPLYING BY n .

WHAT TOOLS CAN BE USED TO CREATE AN AREA OF A REGULAR POLYGON WORKSHEET?

TOOLS LIKE MICROSOFT EXCEL, GOOGLE SHEETS, OR SPECIALIZED MATH WORKSHEET GENERATORS CAN BE USED TO CREATE AREA OF A REGULAR POLYGON WORKSHEETS.

ARE THERE ONLINE RESOURCES AVAILABLE FOR AREA OF A REGULAR POLYGON WORKSHEETS?

YES, THERE ARE MANY EDUCATIONAL WEBSITES THAT OFFER FREE PRINTABLE WORKSHEETS, INCLUDING RESOURCES LIKE KUTA SOFTWARE, MATH-AIDS, AND EDUCATION.COM.

Find other PDF article:

<https://soc.up.edu.ph/43-block/Book?dataid=SUb99-0122&title=neutralization-study-guide-for-content-mastery.pdf>

Area Of A Regular Polygon Worksheet

“area”“region”“zone”“district”

area 60 years ago, half French people were still living in the rural area. region ...

86 1 ...

Apr 27, 2024 · 00 ...

025 0510 0511 0512 0513 0514 ...

0571 0574 0577 0575 0572 0573 0579 0570 0576 0578 0580 ...

020 066+ 075+ 076+ “ ” ...

wland Sep 6, 2024 · wland Wland 1. ** ...

+86” +086” +0086” 86 28 ...

1 0551— 2 0552— 3 0553— 4 0554— 5 0555— 6 0556— 7 0557— 8 0558— ...

manwa Feb 4, 2025 · manwa https://manwa.site https://manwa.life https://manwa.biz ...

“area”“region”“zone”“district”

area 60 years ago, half French people were still living in the rural area. region the Arctic regions

86 1 0 0 10 ...

[illegible]

025005100051100512005130005140051500516005170

0571 0574 0577 0575 0572 0573 0579 0570
0576 0578 0580 2090 ...

020066+075+076+ “”
210006500020003400003 ...

Sep 6, 2024 · wland Wland 1. ** ** ...

```

+0086 3
2800 ...

```

□□□□□□□□□□□□□□ 1□0551—□□□ 2□0552—□□□ 3□0553—□□□ 4□0554—□□□ 5□0555—□□□□ 6□0556—□□□
7□0557—□□□ 8□0558—□□□□□□ 9□0559—□□□ 10□0550—□□□ 11□0561—□□□ 12□0562—□□□ 13□0563—□
□□ 14□0564—□□□ 15□0566—□□□ □□□□ ...

Feb 4, 2025 · [manwa](https://manwa.site) <https://manwa.life> <https://manwa.biz> <https://manwa.asia> <https://manwa.fun> ...

Master the area of a regular polygon with our comprehensive worksheet! Perfect for students and educators. Discover how to calculate areas effectively.

[Back to Home](#)