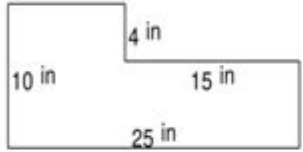
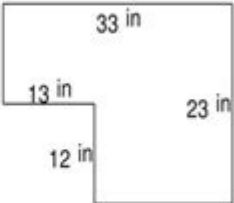



Area And Perimeter Of Irregular Shapes Worksheet

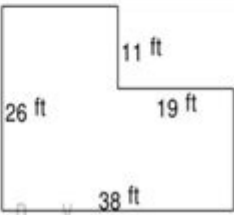
Geometry Worksheets

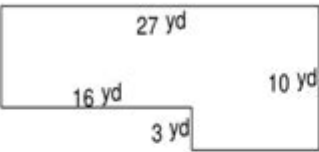
Find the Area and perimeter of irregular shapes


1. 

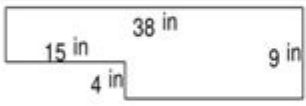
2. 

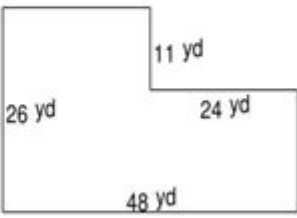
3. 


4. 

5. 

6. 

7. 

8. 



Area and perimeter of irregular shapes worksheet is an essential educational tool designed to enhance students' understanding of geometric concepts. It focuses on the calculations of area and perimeter for shapes that do not conform to standard geometric figures. These worksheets are particularly useful in helping students develop critical thinking and problem-solving skills as they learn to navigate the complexities of irregular shapes. By engaging with such materials, students not only reinforce their mathematical knowledge but also gain confidence in their ability to tackle real-world problems involving geometry.

Understanding Irregular Shapes

Irregular shapes can be defined as any shape that does not have equal sides or angles. Unlike regular shapes, such as squares, rectangles, and circles, irregular shapes can come in various forms and sizes, making them more challenging to analyze. Understanding the characteristics of irregular shapes is crucial for determining their area and perimeter.

Characteristics of Irregular Shapes

1. Unequal Sides: Irregular shapes can have sides of different lengths. For example, a pentagon with one side measuring 4 cm, another 6 cm, and others varying in length.
2. Non-uniform Angles: The angles in irregular shapes are not the same. For instance, a shape with four sides could have angles of 45°, 90°, 120°, and 105°.
3. Complexity: Irregular shapes often have curves or angles that make them more complex than regular shapes. This includes shapes like L-shapes, T-shapes, and other polygonal forms.

Calculating Area and Perimeter

Calculating the area and perimeter of irregular shapes requires a different approach compared to regular shapes. Here, we will explore methods to calculate both aspects effectively.

Calculating Perimeter

Perimeter is defined as the total distance around the outer edge of a shape. To calculate the perimeter of an irregular shape, follow these steps:

1. Identify Each Side: Measure the length of each side of the irregular shape.
2. Add the Lengths: Use the formula:
$$\text{Perimeter} = \text{Side}_1 + \text{Side}_2 + \text{Side}_3 + \dots + \text{Side}_n$$
3. Units: Ensure that all measurements are in the same unit (e.g., all in centimeters or all in inches).

Example: For an irregular quadrilateral with sides measuring 3 cm, 5 cm, 7 cm, and 9 cm, the perimeter would be:

$$\text{Perimeter} = 3 + 5 + 7 + 9 = 24 \text{ cm}$$

Calculating Area

Calculating the area of irregular shapes can be more complex. Here are several methods to

approach this calculation:

1. **Decomposition Method:** Break down the irregular shape into recognizable regular shapes (squares, rectangles, triangles). Calculate the area of each individual shape and then sum them up.
 - For example, if an irregular shape can be divided into a rectangle (4 cm x 3 cm) and a triangle (base 3 cm, height 2 cm):
 - Area of the rectangle = $4 \text{ cm} \times 3 \text{ cm} = 12 \text{ cm}^2$
 - Area of the triangle = $0.5 \times \text{base} \times \text{height} = 0.5 \times 3 \text{ cm} \times 2 \text{ cm} = 3 \text{ cm}^2$
 - Total Area = $12 \text{ cm}^2 + 3 \text{ cm}^2 = 15 \text{ cm}^2$
2. **Grid Method:** Overlay a grid on the irregular shape and count the full squares within the shape. For partial squares, estimate their contribution to the area.
 - Count the number of complete squares and estimate the area of partial squares to get an approximate area.
3. **Coordinate Geometry Method:** For more advanced students, using coordinates to define the vertices of the irregular shape can help in calculating the area using formulas derived from the coordinates.
 - The area can be calculated using the Shoelace formula, which is effective for polygons defined by their vertices.

Creating an Irregular Shapes Worksheet

Developing an effective area and perimeter of irregular shapes worksheet involves careful consideration of the types of problems included. Here are some tips for creating a comprehensive worksheet:

Types of Problems to Include

1. **Measurement Problems:** Provide shapes with given side lengths and ask students to calculate the perimeter.
2. **Area Calculation:** Include problems where students must decompose shapes into regular figures to find the area.
3. **Real-World Applications:** Create word problems that relate to real-world scenarios, such as finding the area of a plot of land or the perimeter of irregular garden shapes.
4. **Mixed Problems:** Combine perimeter and area calculations in single problems to challenge students and test their understanding.

Example Problems

1. **Problem 1:** Calculate the perimeter of an irregular pentagon with sides measuring 5 cm, 8 cm, 6 cm, 4 cm, and 7 cm.
2. **Problem 2:** An irregular shape is formed by a rectangle measuring 6 cm by 4 cm and a triangle with a base of 4 cm and a height of 3 cm. Calculate the total area of the shape.

3. Problem 3: A garden has an irregular shape with the following sides: 10 m, 12 m, 8 m, and 15 m. Calculate the perimeter of the garden.

4. Problem 4: A piece of land is shaped like an L. The long side of the L is 10 m by 4 m, and the short side is 5 m by 3 m. Find the area of the land.

Benefits of Using Irregular Shapes Worksheets

Utilizing worksheets focused on the area and perimeter of irregular shapes offers numerous educational benefits:

1. Enhanced Understanding: Students gain a deeper understanding of geometry by working with complex shapes.
2. Critical Thinking: The problem-solving nature of these worksheets encourages critical thinking and the ability to analyze and break down shapes.
3. Preparation for Advanced Topics: Mastery of irregular shapes sets a strong foundation for more advanced mathematical concepts, such as calculus and trigonometry.
4. Engagement: Varied problems keep students engaged and motivated to learn.

Conclusion

In conclusion, an area and perimeter of irregular shapes worksheet serves as an invaluable resource in the mathematics curriculum. It not only assists students in mastering the calculations of area and perimeter but also fosters critical thinking and problem-solving skills. By understanding the characteristics of irregular shapes and employing various methods for their calculations, students can build a strong foundation in geometry that will benefit them in future mathematical endeavors. Through practical exercises and real-world applications, these worksheets can make learning geometry an enjoyable and enriching experience.

Frequently Asked Questions

What is the difference between area and perimeter for irregular shapes?

Area refers to the amount of space inside an irregular shape, while perimeter is the total length of the shape's boundary.

How do you calculate the area of an irregular shape?

To calculate the area of an irregular shape, you can divide it into regular shapes, find the area of each, and then sum them up.

What tools can be used to measure the perimeter of an irregular shape?

You can use a ruler, measuring tape, or even a piece of string to measure the sides of an irregular shape to calculate the perimeter.

Are there specific formulas for finding the area of irregular polygons?

There aren't universal formulas for all irregular polygons, but methods like the Shoelace formula can be applied for certain cases.

What role do grid paper and graphing play in finding the area of irregular shapes?

Grid paper can help by allowing you to count squares to estimate the area, while graphing can provide a visual representation for calculations.

Can technology assist in calculating area and perimeter of irregular shapes?

Yes, software and apps can help automate calculations and provide tools for measuring irregular shapes accurately.

What are some common mistakes to avoid when calculating area and perimeter of irregular shapes?

Common mistakes include miscounting sides, not accurately measuring lengths, and forgetting to sum all parts of divided shapes.

How can solving worksheets on area and perimeter help students?

Worksheets provide practice for understanding concepts, improve problem-solving skills, and reinforce the application of formulas.

Where can I find worksheets on area and perimeter of irregular shapes?

Worksheets can be found on educational websites, in math textbooks, or can be created using online worksheet generators.

Find other PDF article:

<https://soc.up.edu.ph/06-link/files?ID=AHb56-1825&title=anne-rice-christ-the-lord-out-of-egypt.pdf>

Area And Perimeter Of Irregular Shapes Worksheet

“area” “region” “zone” “district” □□□□□□ □□□□

area 60 years ago, half French people were still living in the rural area. region ...

[illegible][illegible]

□□□□□□□□□□□□□□ □□□□

Apr 27, 2024 · 00:00
...

□□□□□□□□□□□□□□□□□□□□

025 0510 0511 0512 0513
0514 ...

□□□□□□□□□□□□□□□□□□□□

```
00000000000000000000 0571 000 0574 0000 0577000 00575 0000 0572 0000 057300000579 00000570
0000576 0 0000578 0000580 ...
```

□□□□□□□□ - □□□□

020066+075+076+ " " ...

wland -

Sep 6, 2024 · wland Wland 1. ** ...

□□□□□□□□ " +86" □□□□ " +086" □ " +0086" □□□□

+0086 3 86 28 ...

-

□□□□□□□□□□□□□□□□ 1□0551—□□□ 2□0552—□□□ 3□0553—□□□ 4□0554—□□□ 5□0555—□□□□ 6□0556—□□□
7□0557—□□□□ 8□0558—□□□□ ...

manwa□□□□□□□□ - □□□□

Feb 4, 2025 · [manwa](https://manwa.site) <https://manwa.life> <https://manwa.biz> ...

“area” “region” “zone” “district” □□□□□□ □□□□

area 60 years ago, half French people were still living in the rural area. region ...

[illegible][illegible]

[illegible]

025 0510 0511 0512 0513 0514 ...

0571 0574 0577 0575 0572 0573 0579 0570
0576 0578 0580 ...

0200066+075+076+ “”
 ...

+0086 3...86
28 ...

□□□□□□□□□□□□□□ 1□0551—□□□ 2□0552—□□□ 3□0553—□□□ 4□0554—□□□ 5□0555—□□□□ 6□0556—□□□
7□0557—□□□ 8□0558—□□□□ ...

Feb 4, 2025 · manwa.com - 100% free! <https://manwa.site>
<https://manwa.life> | <https://manwa.biz> | ...

Enhance your math skills with our area and perimeter of irregular shapes worksheet! Perfect for practice and understanding. Learn more and boost your geometry knowledge today!

[Back to Home](#)