

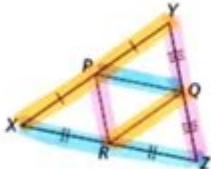
# Angle Relationships And Triangles Worksheet Answers

51

## Midsegments in Triangles

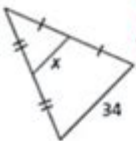
---

Identify the three pairs of parallel segments in the diagram.

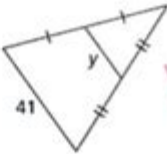


$\overline{PR} \parallel \overline{YZ}$      $\overline{RQ} \parallel \overline{XY}$   
 $\overline{PQ} \parallel \overline{XZ}$

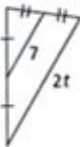
Find the value of the variable in each diagram.



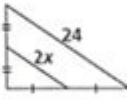
$x = 17$



$y = 20.5$



$2(7) = 2t$   
 $t = 7$



$2(2x) = 24$   
 $4x = 24$   
 $x = 6$

Midsegment Theorem-

1. parallel to the 3rd side
2. midsegment is  $\frac{1}{2}$  the length of the 3rd side

MRS. E  
TEACHES  
MATH

Angle relationships and triangles worksheet answers are essential components of geometry that help students understand the properties and relationships of angles and triangles. Geometry is a branch of mathematics concerned with the properties and relationships of points, lines, angles, surfaces, and solids. Understanding angle relationships and triangles is crucial for solving many geometric problems, and worksheets often serve as a valuable tool for practice and assessment. This article will explore the

various angle relationships, types of triangles, and provide insight into how to effectively tackle worksheet problems related to these concepts.

## Understanding Angles and Their Relationships

Angles are formed when two rays share a common endpoint, called the vertex. The measure of an angle is typically expressed in degrees. There are several types of angles, each with specific characteristics:

- Acute Angle: An angle measuring less than 90 degrees.
- Right Angle: An angle measuring exactly 90 degrees.
- Obtuse Angle: An angle measuring greater than 90 degrees but less than 180 degrees.
- Straight Angle: An angle measuring exactly 180 degrees.
- Reflex Angle: An angle measuring greater than 180 degrees but less than 360 degrees.

When working with angles, it is crucial to understand their relationships, which can be classified into several categories:

## Complementary Angles

Complementary angles are two angles whose measures add up to 90 degrees. For example, if one angle measures 30 degrees, its complementary angle measures 60 degrees.

- Example: If  $A + B = 90^\circ$ , then  $A$  and  $B$  are complementary.

## Supplementary Angles

Supplementary angles are two angles whose measures add up to 180 degrees. For instance, if one angle measures 110 degrees, the supplementary angle measures 70 degrees.

- Example: If  $C + D = 180^\circ$ , then  $C$  and  $D$  are supplementary.

## Vertical Angles

Vertical angles are formed when two lines intersect, creating pairs of opposite angles that are congruent (equal in measure). If angle E and angle F are vertical angles, then  $E = F$ .

## Adjacent Angles

Adjacent angles are two angles that share a common side and a common vertex but do not overlap. In the case of angles E and G, if they are adjacent, they can be expressed as:

- Example:  $E + G = 90^\circ$  or  $E + G = 180^\circ$ , depending on whether they are complementary or supplementary.

## Exploring Triangles

Triangles are polygonal shapes with three sides and three angles. The sum of the interior angles of any triangle is always 180 degrees. This fundamental property allows for various classifications of triangles based on their angles and sides.

## Types of Triangles Based on Angles

- Acute Triangle: All three angles are acute (less than 90 degrees).
- Right Triangle: One angle is a right angle (exactly 90 degrees).
- Obtuse Triangle: One angle is obtuse (greater than 90 degrees).

## Types of Triangles Based on Sides

- Equilateral Triangle: All three sides are equal in length, and all angles measure 60 degrees.
- Isosceles Triangle: Two sides are of equal length, and the angles opposite those sides are equal.
- Scalene Triangle: All three sides are of different lengths, and all angles are of different measures.

## Solving Angle Relationships and Triangle Problems

To solve problems related to angle relationships and triangles, one must apply various geometric principles and theorems. Here are some steps to approach these problems effectively:

### Step 1: Identify the Given Information

Carefully read the problem to determine what information is provided. Look for angle measures, side lengths, or other relevant data.

### Step 2: Apply Angle Relationships

Utilize known relationships between angles. For example, if two angles are complementary, you can

set up an equation to solve for the unknown angle.

- Example: If angle A is  $(40^\circ)$ , then angle B can be found using:

$[$

$$B = 90^\circ - A = 90^\circ - 40^\circ = 50^\circ$$

$]$

### Step 3: Use Triangle Properties

When working with triangles, apply the triangle sum theorem, which states that the sum of the interior angles must equal 180 degrees.

- Example: In triangle ABC, if angle A is  $(50^\circ)$  and angle B is  $(60^\circ)$ , then angle C can be calculated as:

$[$

$$C = 180^\circ - (A + B) = 180^\circ - (50^\circ + 60^\circ) = 70^\circ$$

$]$

### Step 4: Utilize Other Theorems and Postulates

In addition to angle relationships, use the Pythagorean theorem for right triangles and properties of congruence for isosceles triangles. For a right triangle, the Pythagorean theorem states:

-  $(a^2 + b^2 = c^2)$ , where  $(c)$  is the hypotenuse.

### Practice Problems

To reinforce the concepts of angle relationships and triangles, here are some practice problems:

1. If angle X and angle Y are supplementary and angle X measures  $(75^\circ)$ , what is the measure of angle Y?
2. In triangle PQR, if angle P measures  $(40^\circ)$  and angle Q measures  $(70^\circ)$ , what is the measure of angle R?
3. Triangle ABC is an isosceles triangle with angle A measuring  $(80^\circ)$ . What are the measures of angles B and C?
4. If angle A and angle B are complementary and angle A measures  $(32^\circ)$ , what is the measure of angle B?
5. In a right triangle, if one leg measures 6 units and the other leg measures 8 units, what is the length of the hypotenuse?

## Conclusion

Understanding angle relationships and triangles is fundamental to mastering geometry. Worksheets that focus on these topics provide valuable opportunities for practice and assessment, allowing students to develop their problem-solving skills. By comprehending the various types of angles, triangles, and their relationships, students will be better equipped to tackle complex geometric problems. Regular practice, along with the application of theorems and properties, will enhance their mathematical abilities and confidence in geometry.

## Frequently Asked Questions

## **What are the main types of angle relationships found in triangles?**

The main types of angle relationships in triangles include complementary angles, supplementary angles, vertical angles, and corresponding angles.

## **How do you find the missing angle in a triangle?**

To find the missing angle in a triangle, use the fact that the sum of the angles in a triangle is always 180 degrees. Subtract the sum of the known angles from 180.

## **What is the relationship between angles in an isosceles triangle?**

In an isosceles triangle, the angles opposite the equal sides are also equal.

## **How can I determine if two angles are complementary when solving triangle problems?**

Two angles are complementary if their measures add up to 90 degrees. You can check this by adding the measures together in your worksheet problems.

## **What is the significance of vertical angles in triangle angle relationships?**

Vertical angles are formed when two lines intersect. They are always equal, which can be useful in solving triangle problems involving intersecting lines.

## **What role do exterior angles play in triangles?**

The measure of an exterior angle of a triangle is equal to the sum of the measures of the two opposite interior angles.

## **How do you solve for a triangle's angles using angle relationships?**

To solve for angles, apply angle relationships such as the triangle sum theorem, exterior angle theorem, and properties of special triangles (like isosceles and equilateral).

## What is the Triangle Sum Theorem?

The Triangle Sum Theorem states that the sum of the interior angles of a triangle is always 180 degrees.

## What types of triangles have specific angle relationships?

Equilateral triangles have three equal angles of 60 degrees; isosceles triangles have two equal angles, while scalene triangles have all angles of different measures.

## Why is it important to understand angle relationships in triangles?

Understanding angle relationships is crucial for solving geometric problems, proving theorems, and applying concepts in real-world situations such as architecture and engineering.

Find other PDF article:

<https://soc.up.edu.ph/09-draft/files?ID=DR105-3084&title=bird-2-scooter-wiring-diagram.pdf>

## [Angle Relationships And Triangles Worksheet Answers](#)

### WWE 2K26 Info, Release Date, Platforms, Modes, Features

WWE 2K26 has been officially announced by 2K as the next installment in the long-running series of WWE professional wrestling video games, and the successor to WWE 2K25.

### *WWE 2K26 | Idea Wiki | Fandom*

WWE 2K26 is a professional wrestling sports video game developed by Visual Concepts and published by 2K. It is the twenty-sixth overall installment of the video game series based on ...

### WWE 2K26 Development And WWE 2K Mobile Release Date ...

May 16, 2025 · WWE 2K26 is a go. On Friday, Take-Two Interactive revealed during their quarterly earnings call the calendar for upcoming releases which included both WWE 2K26 and WWE 2K ...

### **BURN IT DOWN | WWE 2K26 has been officially announced by 2K ...**

1 day ago · 128 likes, 4 comments - burnitdownnyt on July 28, 2025: "WWE 2K26 has been officially announced by 2K as the next installment in the long-running series of WWE wrestling video ...

### *WWE 2K26 Is Officially In Development With A Release Date Window*

May 16, 2025 · Hot off the success of WWE 2K25, it should also be no surprise that WWE 2K26 is officially in development. Earlier this morning, during Take-Two's Earnings Call, the development ...



## **WWE 2K25 | Official WWE Wrestling Game**

WWE 2K25 delivers all the authenticity and action that players love, with new mechanics, more Superstars, and game-changing upgrades.

## **Women's Evolution PLE Could Signal An Equally Big Comeback for WWE 2K26**

Jul 9, 2025 · Although it took nearly seven years before the second WWE Evolution could happen, many are looking forward to seeing the women of WWE and NXT get their flowers at the event.

## **2K Games confirme la sortie de WWE 2K26 - Catch-Newz**

May 16, 2025 · WWE 2K26 est bien dans les projets de 2K Games. En effet, lors du bilan financier de Take Two, ils ont présenté leurs projets à venir pour l'année fiscale de 2026, incluant GTA 6, ...

## **One MITB Moment Lays the Perfect Groundwork for a WWE 2K26 ...**

Although it has not had a proper reveal yet, WWE 2K26 was confirmed in 2K's financial report in May alongside WWE 2K Mobile. Fans can likely expect a concrete reveal and news around ...

## *WWE 2K26 Should Tread Where Triple H and WWE Are Afraid to ...*

Jun 10, 2025 · Reports suggest an interesting turn of events around Ron 'R-Truth' Killings' release and return, which should inspire WWE 2K26 features.

## *F93175 (FFT3175) Frontier Flight Tracking and History - FlightAware*

Flight status, tracking, and historical data for Frontier 3175 (F93175/FFT3175) including scheduled, estimated, and actual departure and arrival times.

## Flight history for Frontier Airlines flight F93175 - Flightradar24

F93175 (Frontier Airlines) - Live flight status, scheduled flights, flight arrival and departure times, flight tracks and playback, flight route and airport

## **F93175 Flight Status Frontier Airlines: Detroit to Dallas (FFT3175)**

Jul 21, 2025 · Track F93175 from Detroit to Dallas: Frontier Airlines flight status, schedule, delay compensation, and real-time updates.

## **F93175 - F9 3175 Flight Tracker - FlightStats**

F93175 Flight Tracker - Track the real-time flight status of F9 3175 live using the FlightStats Global Flight Tracker. See if your flight has been delayed or cancelled and track the live ...

## **F93175 Flight Status / Frontier Airlines FFT3175 / F9 3175 Flight ...**

F93175 is a Frontier Airlines flight from Detroit to Dallas Fort Worth. This flight departs from Detroit Airport on 04/11/2025 at 10:55 at gate D25 in terminal N. The arrival at Dallas Fort ...

## Flight F93175 / FFT3175 - Frontier Airlines - AirNav Radar Flight ...

Flight F93175 / FFT3175 - Frontier Airlines - AirNav Database - Live Flight Tracker, Status, History, Route, Replay, Status, Airports Arrivals Departures

## **F93175 estado del vuelo / Frontier Airlines - Aviability.com**

Frontier Airlines F93175 estado del vuelo: Metropolitan Wayne County (DTW) - Fort Worth (DFW); Llegada En 1 día ; Metropolitan Wayne County (DTW) - Fort Worth (DFW); Llegada ...

## **F93175 Frontier Airlines Estado de vuelo Hoy y Historial 2024**

Consulta el F93175, vuelo Detroit Dallas hoy, con el flight tracker proporcionado por Trip.com, y obtén información sobre los horarios de llegada y salida de vuelos, retrasos en el aeropuerto e ...

*F93175 Flight Tracker-Detroit to Dallas-Fort Worth ... - PlaneMapper*

Flight F93175 from Detroit to Dallas-Fort Worth is operated by Frontier Airlines. Scheduled time of departure from Detroit Metro Wayne Co is 20:11 EDT and scheduled time of arrival in Dallas ...

**Frontier Airlines F93175 (FFT3175) from Detroit to Dallas - Flightera**

Dec 14, 2024 · Frontier Airlines FLIGHT F93175 from Detroit to Dallas. On-time Performance, delay statistics and flight information for F93175

Unlock the secrets of angle relationships with our triangles worksheet answers! Enhance your understanding and skills today. Learn more for expert insights!

[Back to Home](#)