

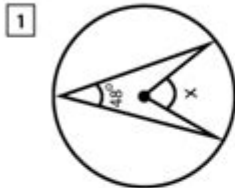
# Angles Inside And Outside Circles Worksheet

Name : \_\_\_\_\_

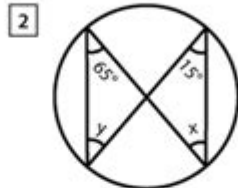
Score : \_\_\_\_\_ Date : \_\_\_\_\_



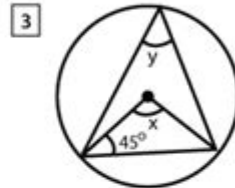
## Interior Angles in Circles



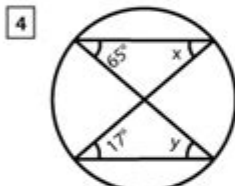
x = \_\_\_\_\_



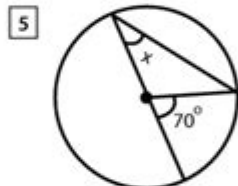
x = \_\_\_\_\_, y = \_\_\_\_\_



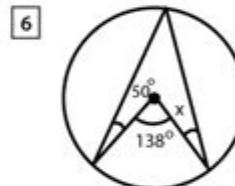
x = \_\_\_\_\_, y = \_\_\_\_\_



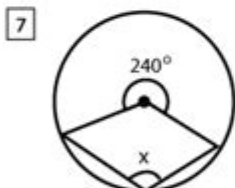
x = \_\_\_\_\_, y = \_\_\_\_\_



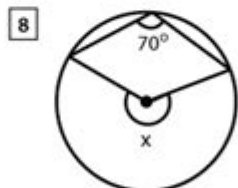
x = \_\_\_\_\_



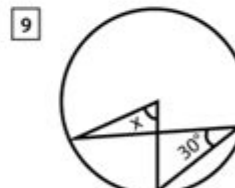
x = \_\_\_\_\_



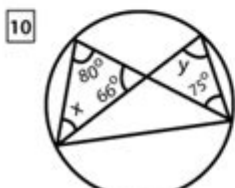
x = \_\_\_\_\_



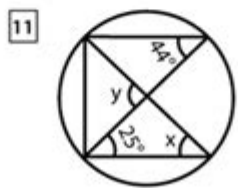
x = \_\_\_\_\_



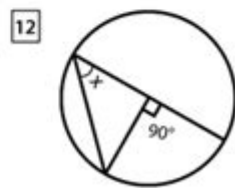
x = \_\_\_\_\_



x = \_\_\_\_\_, y = \_\_\_\_\_



x = \_\_\_\_\_, y = \_\_\_\_\_



x = \_\_\_\_\_

Angles inside and outside circles worksheet are essential tools in understanding the properties and relationships of angles formed by lines and circles. Geometry, a vital branch of mathematics, often presents challenges, especially when dealing with circles and angles. This article delves into the various types of angles associated with circles, the significance of worksheets in learning, and provides examples and exercises to enhance comprehension. By the end of this article, readers will have a comprehensive understanding of the angles formed inside and outside circles, making them more proficient in solving related problems.

# Understanding Angles in Circles

When studying geometry, angles related to circles can be classified into several types. It is crucial to understand these classifications as they form the foundation for more complex geometric concepts.

## Types of Angles

### 1. Central Angles:

- A central angle is formed by two radii of a circle with its vertex at the center of the circle.
- The measure of a central angle is equal to the measure of the arc it subtends.

### 2. Inscribed Angles:

- An inscribed angle is formed by two chords in a circle which meet at a point on the circle.
- The measure of an inscribed angle is half the measure of the arc it intercepts.

### 3. Angles Formed by Tangents and Chords:

- When a tangent and a chord intersect at a point on the circle, they form an angle.
- The measure of this angle is equal to half the measure of the intercepted arc.

### 4. Angles Outside the Circle:

- When two tangents, two secants, or a tangent and a secant intersect outside the circle, they create angles.
- The measure of the angle formed outside the circle is equal to half the difference of the measures of the intercepted arcs.

## The Importance of Worksheets in Learning Geometry

Worksheets play a crucial role in the learning process, especially in mathematics. They provide structured practice and reinforce theoretical concepts through application. Here's why an angles inside and outside circles worksheet is beneficial:

## Benefits of Using Worksheets

- Reinforcement of Concepts: Worksheets allow students to apply what they've

learned in class, helping reinforce their understanding of angles in circles.

- Self-Paced Learning: Students can work through the worksheets at their own speed, allowing them to take the time they need to grasp complex ideas.
- Immediate Feedback: Many worksheets come with answer keys, enabling students to check their work and understand mistakes immediately.
- Variety of Problems: Worksheets often include a range of problems, from basic to advanced, catering to various skill levels.
- Preparation for Exams: Regular practice with worksheets can aid in preparing for tests, building confidence in solving angle-related problems.

## Types of Problems Found in Angles Inside and Outside Circles Worksheets

To effectively utilize an angles inside and outside circles worksheet, it's essential to be familiar with the types of problems typically encountered. Below are common problem types along with brief explanations.

### Problem Categories

#### 1. Finding Angle Measures:

- Problems may ask students to determine the measure of a central or inscribed angle, given certain arc lengths.

#### 2. Calculating Arc Lengths:

- These problems require students to calculate the length of an arc based on the angle measures provided.

#### 3. Identifying Relationships:

- Some questions may provide multiple angles and ask students to identify relationships between them, such as complementary or supplementary angles.

#### 4. Using Tangents and Chords:

- Problems may involve calculating angles formed by tangents and chords, requiring knowledge of the properties of these angles.

#### 5. Angles Outside the Circle:

- Questions may focus on finding angles formed by secants and tangents outside the circle, utilizing the difference of arc measures.

## Sample Problems and Solutions

Here are some sample problems that can be included in an angles inside and outside circles worksheet, along with detailed solutions.

## Sample Problem 1: Central Angle

Problem: In a circle with a radius of 10 cm, a central angle measures 60 degrees. Find the length of the arc subtended by this angle.

Solution:

1. Use the formula for arc length:  $(L = r \theta)$ , where  $(r)$  is the radius and  $(\theta)$  is the angle in radians.
2. Convert degrees to radians:  $(60^\circ = \frac{60 \times \pi}{180} = \frac{\pi}{3})$  radians.
3. Substitute values into the formula:  
$$L = 10 \times \frac{\pi}{3} = \frac{10\pi}{3} \text{ cm} \approx 10.47 \text{ cm}$$

## Sample Problem 2: Inscribed Angle

Problem: An inscribed angle intercepts an arc measuring 80 degrees. Find the measure of the inscribed angle.

Solution:

1. Use the inscribed angle theorem:  $(\text{Inscribed Angle} = \frac{1}{2} \times \text{Intercepted Arc})$ .
2. Substitute the given arc measure:  
$$\text{Inscribed Angle} = \frac{1}{2} \times 80 = 40^\circ$$

## Sample Problem 3: Angles Outside the Circle

Problem: Two secants intersect outside a circle, forming an angle of 40 degrees. The intercepted arcs measure 100 degrees and 40 degrees. Find the angle formed by the secants.

Solution:

1. Use the formula for angles outside the circle:  
$$\text{Angle} = \frac{1}{2} \times (\text{Arc 1} - \text{Arc 2})$$
2. Substitute the values:  
$$\text{Angle} = \frac{1}{2} \times (100 - 40) = \frac{1}{2} \times 60 = 30^\circ$$

# Creating Your Own Angles Inside and Outside Circles Worksheet

Designing your own angles inside and outside circles worksheet can be a beneficial exercise that reinforces your understanding of these concepts. Here are some steps to create an effective worksheet:

## Steps to Create an Effective Worksheet

1. **Identify Key Concepts:** Start by listing the essential concepts you want to cover, such as central angles, inscribed angles, and angles formed by tangents.
2. **Develop a Variety of Problems:** Create problems that range in difficulty, ensuring you include different types of angles and situations.
3. **Incorporate Diagrams:** Visual aids are crucial in geometry. Include diagrams that illustrate the problems, allowing students to visualize the angles and arcs.
4. **Provide an Answer Key:** Include an answer key for self-assessment. This will help learners check their work and understand their mistakes.
5. **Encourage Exploration:** Add open-ended questions encouraging students to explore relationships between angles further, fostering critical thinking.

## Conclusion

An angles inside and outside circles worksheet is a powerful resource for students learning about geometric angles. By understanding the different types of angles, utilizing worksheets for practice, and tackling a variety of problems, students can significantly enhance their geometry skills. Whether used for classroom instruction or personal study, these worksheets offer a structured approach to mastering the complexities of angles related to circles. With persistence and practice, students will gain confidence in their ability to solve problems involving angles, making geometry a more accessible and enjoyable subject.

## Frequently Asked Questions

**What are the key concepts covered in an angles**

## **inside and outside circles worksheet?**

The worksheet typically covers concepts such as central angles, inscribed angles, angles formed by tangents and chords, and the relationship between angles and arcs in circles.

### **How do you calculate the measure of an inscribed angle in a circle?**

The measure of an inscribed angle is half the measure of the intercepted arc. If the arc measures 80 degrees, the inscribed angle will be 40 degrees.

### **What is the difference between a central angle and an inscribed angle?**

A central angle is formed at the center of the circle and spans an arc, while an inscribed angle is formed by two chords that meet on the circle's circumference and also spans the same arc.

### **How can you use a worksheet on angles inside and outside circles to prepare for geometry exams?**

By practicing problems on the worksheet, students can reinforce their understanding of theorems related to circle angles, improve problem-solving skills, and familiarize themselves with various types of angle relationships.

### **What is the formula for calculating the angle formed by two intersecting tangents outside a circle?**

The angle formed by two intersecting tangents outside a circle is equal to half the difference of the measures of the intercepted arcs. If one arc measures 100 degrees and the other measures 40 degrees, the angle is  $(100 - 40)/2 = 30$  degrees.

Find other PDF article:

<https://soc.up.edu.ph/55-pitch/files?docid=PCC62-1446&title=starry-night-analysis-elements-of-art.pdf>

## **Angles Inside And Outside Circles Worksheet**

*¿Qué es un ángel? | Preguntas sobre la Biblia - JW.ORG*

*¿Tienen los ángeles poderes sobrehumanos? ¿Dónde viven? ¿Tenemos un ángel de la guarda? ...*

**The Archangel Michael—Who Is He? - JW.ORG**



Enhance your geometry skills with our angles inside and outside circles worksheet. Discover how to master angle calculations and improve your understanding today!

[Back to Home](#)