

Answer Key Domain And Range Graph Worksheet Answers

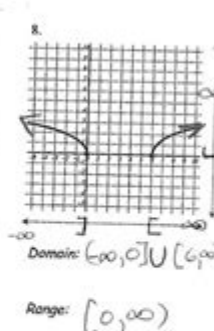
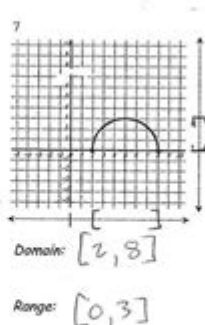
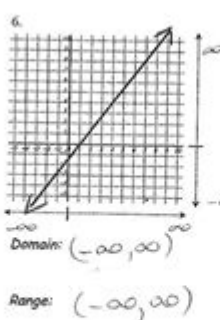
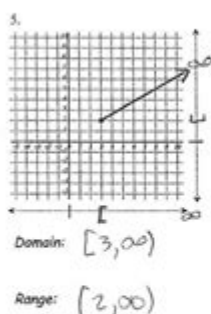
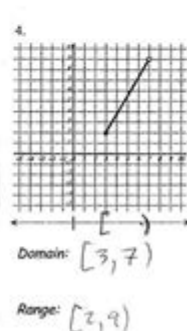
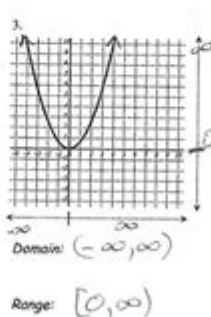
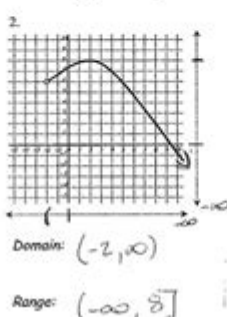
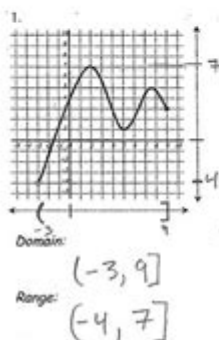
Graph Domain & Range

name Key

For the function shown on each graph:

1. indicate the domain on the number line along the bottom and the range on the number line along the right side. -remember to use open or closed circles of excluded or included endpoints.
2. below each graph, write the domain and range both as intervals and as inequalities.

Part I



Answer key domain and range graph worksheet answers are essential tools for students and educators alike, providing clarity and insight into the fundamental concepts of functions in mathematics. Understanding the domain and range of functions is crucial for solving problems and graphing equations effectively. In this article, we will explore what domain and range are, how to determine them from graphs, and how to effectively use worksheets to practice these concepts. Additionally, we will provide tips on finding answer keys for domain and range graph worksheets, ensuring that students can verify their understanding.

Understanding Domain and Range

What is Domain?

The domain of a function refers to all the possible input values (typically x-values) that can be used in a function. In simpler terms, it represents all the values that the independent variable can take.

What is Range?

The range of a function is the set of all possible output values (typically y-values) that the function can produce. It reflects all the values that the dependent variable can take as a result of the input from the domain.

Why are Domain and Range Important?

Understanding domain and range is crucial for several reasons:

- **Graphing Functions:** Knowing the domain and range helps in accurately plotting a graph.
- **Real-World Applications:** Many real-world scenarios can be modeled using functions; understanding the limits of these functions is vital.
- **Problem Solving:** Identifying domain and range aids in solving equations and inequalities effectively.

How to Determine Domain and Range from Graphs

Determining the domain and range from a graph involves analyzing the visual representation of the function. Here are the steps to follow:

Finding the Domain

1. Examine the x-axis: Look for the extent of the graph on the x-axis. This gives you the possible x-values.
2. Identify any restrictions: Check for any breaks, holes, or asymptotes in the graph that might limit the x-values.
3. Express the domain: Write the domain in interval notation (e.g., $(-\infty, 3]$ or $[2, 5)$) as needed.

Finding the Range

1. Examine the y-axis: Look for the extent of the graph on the y-axis to determine the possible y-values.
2. Check for restrictions: Identify any horizontal asymptotes or gaps in the graph that might limit the y-values.
3. Express the range: Write the range in interval notation (e.g., $[0, \infty)$ or $(-1, 4)$).

Using Worksheets for Practice

Worksheets are invaluable resources for practicing domain and range concepts. They typically include various types of functions represented graphically, and students can work through these problems to reinforce their understanding.

Types of Worksheets

There are several types of domain and range graph worksheets available to students:

- **Basic Graph Worksheets:** These worksheets feature simple linear functions, making it easier for beginners to grasp the concepts of domain and range.
- **Advanced Graph Worksheets:** These include quadratic, exponential, and trigonometric functions, challenging students to think critically about more complex functions.
- **Mixed Function Worksheets:** These worksheets combine various types of functions, enhancing problem-solving skills and adaptability.

Finding Answer Key Domain and Range Graph Worksheet Answers

Once students complete their worksheets, they may need to verify their answers. Here are some tips to find reliable answer keys:

Online Resources

1. Educational Websites: Many educational platforms provide worksheets along with answer keys. Websites like Khan Academy, Mathway, and others are great starting points.
2. Teacher Resources: Educators often share their worksheets and answer keys on educational forums or websites designed for teachers.
3. Math Textbooks: Many textbooks include answer keys at the back, helping students check their work.

Creating Your Own Answer Key

For those who may not find an answer key readily available, creating one can be a beneficial learning exercise. Here's how:

1. Work through the problems: Solve the worksheet yourself, showing all work to ensure understanding.
2. Document Answers: Write down the domain and range for each function clearly.
3. Review with Peers or Educators: Discuss your findings with classmates or teachers to confirm accuracy.

Common Mistakes to Avoid

When working on domain and range problems, students often make common errors. Being aware of these can help improve accuracy:

- **Ignoring Restrictions:** Failing to account for breaks or asymptotes can lead to incorrect answers.
- **Misinterpreting Graphs:** Misreading the graph can lead to errors in determining the extent of the function.
- **Incorrect Interval Notation:** Notation errors can misrepresent the domain and range.

Conclusion

In conclusion, understanding the concept of **answer key domain and range graph worksheet answers** is fundamental for any student studying mathematics. By mastering how to determine the domain and range, students will enhance their graphing skills and problem-solving abilities. Utilizing worksheets for practice, finding reliable answer keys, and avoiding common mistakes will further solidify their understanding of this essential mathematical concept. As students continue to practice and engage with these materials, they will build a strong foundation for their future studies in mathematics.

Frequently Asked Questions

What is the purpose of an answer key for a domain and range graph worksheet?

The answer key provides correct answers for students to verify their understanding of identifying the domain and range from given graphs.

How can I determine the domain of a graph?

The domain of a graph represents all possible x-values for which the graph is defined; you can find it by observing the leftmost and rightmost points on the graph.

What is the range of a function in a graph?

The range of a function is the set of all possible y-values that the function can produce, determined by looking at the lowest and highest points of the graph.

Are there specific types of graphs that make identifying domain and range easier?

Yes, linear, quadratic, and piecewise functions often have more straightforward domains and ranges compared to more complex functions like trigonometric or exponential graphs.

Why is it important to understand domain and range in mathematics?

Understanding domain and range is crucial for analyzing functions, solving equations, and applying concepts in calculus and real-world scenarios.

What tools can be used to create a domain and range graph worksheet?

Tools like graphing calculators, online graphing software, and mathematics educational platforms can help create worksheets focused on domain and range.

Can a graph have an infinite domain or range?

Yes, certain graphs, such as linear functions, can have an infinite domain and range, typically represented as $(-\infty, \infty)$.

How can I check my answers on a domain and range worksheet?

You can check your answers by comparing them with the provided answer key, or using graphing software to visualize the function and confirm your findings.

What are common mistakes to avoid when identifying domain and range from graphs?

Common mistakes include overlooking asymptotes, misreading the graph boundaries, or not considering open and closed intervals properly.

Find other PDF article:

<https://soc.up.edu.ph/27-proof/Book?ID=FQt51-4702&title=hesi-fundamentals-practice-test-free.pdf>

Answer Key Domain And Range Graph Worksheet

Answers

Answers - The Most Trusted Place for Answering Life's Questions

Answers is the place to go to get the answers you need and to ask the questions you want

$$\square\square - \square\square\square\square\square\square\square\square$$

2011 1 ...

□□ - □□

[illegible]

-

2011 1 ...

FAQ & Q&A

FAQ Q&A FAQ FAQ Q&A question and answer
FAQ Q&A ...

All Topics - Answers

Answers is the place to go to get the answers you need and to ask the questions you want

□□ - □□

120cm ()

□□□□ - □□□□□□□□□□

AI

□□□□□□□□□□□□□□□□ - □□

☐ Win10 ☐ Win11

Steam CAPTCHA ...

APTCHA 1 ...

Answers - The Most Trusted Place for Answering Life's Questions

Answers is the place to go to get the answers you need and to ask the questions you want

□□ - □□□□□□□□

2011 1

□□ - □□

.....

...

FAQ -

..... 2011 1
... ..

FAQ Q&A_.....

FAQQ&A FAQ Q&A question and answer.....
..... FAQ Q&A

All Topics - Answers

Answers is the place to go to get the answers you need and to ask the questions you want

FAQ -

.....120cm [.....]
... ..

..... -

.....AI.....

..... -

.....Win10Win11.....
... ..

Steam..... CAPTCHA

.....APTCHA
1 ...

Unlock the secrets of your math homework with our answer key for the domain and range graph worksheet answers. Discover how to master these concepts today!

[Back to Home](#)