

30 60 90 Special Right Triangles Worksheet

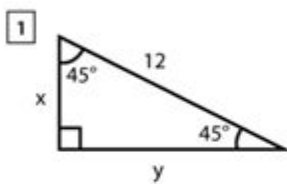
Name : _____

Score : _____ Date : _____

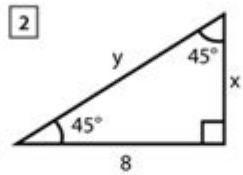


Special Right Triangle - 45°- 45°- 90° Worksheet

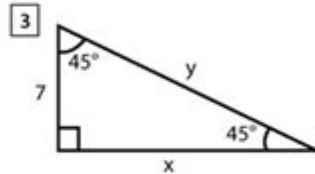
Find the value of x and y in each given triangles



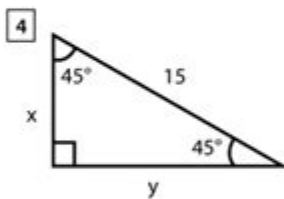
x = _____, y = _____



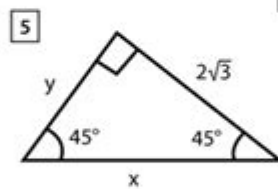
x = _____, y = _____



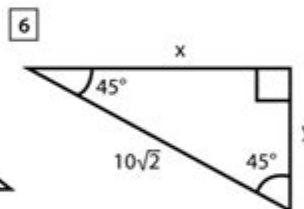
x = _____, y = _____



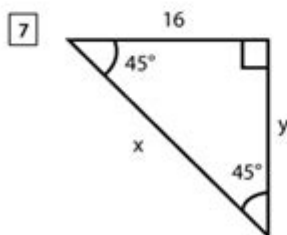
x = _____, y = _____



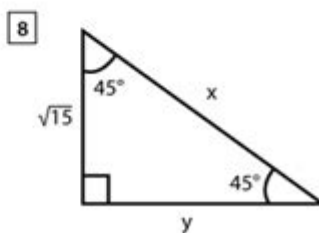
x = _____, y = _____



x = _____, y = _____



x = _____, y = _____



x = _____, y = _____

30 60 90 special right triangles worksheet serves as a vital educational tool for students learning about the properties and applications of this specific type of triangle. Understanding 30-60-90 triangles is essential in geometry, trigonometry, and various real-world applications. This article will explore the characteristics of 30-60-90 triangles, their mathematical properties, and the significance of worksheets in mastering this topic.

Understanding 30-60-90 Triangles

A 30-60-90 triangle is a special type of right triangle that has angles

measuring 30 degrees, 60 degrees, and 90 degrees. These triangles are significant in geometry due to their unique properties and the relationships between their sides.

Properties of 30-60-90 Triangles

1. Angle Measures:

- The angles of a 30-60-90 triangle are fixed at 30°, 60°, and 90°.

2. Side Ratios:

- The sides of a 30-60-90 triangle have a specific ratio:
- The side opposite the 30° angle is the shortest and is often denoted as x .
- The side opposite the 60° angle is $x\sqrt{3}$.
- The side opposite the 90° angle (the hypotenuse) is $2x$.

3. Geometric Representation:

- When a 30-60-90 triangle is drawn, the relationship between the sides can be easily visualized, helping students grasp the concepts of trigonometry and the Pythagorean theorem.

Mathematical Applications

Understanding the properties of 30-60-90 triangles has numerous applications in mathematics and beyond. Here are some key areas where these triangles are particularly useful:

1. Trigonometry

The relationships between the angles and sides of 30-60-90 triangles allow students to apply trigonometric functions effectively. The sine, cosine, and tangent can be directly derived from these ratios:

- Sine:

- $\sin(30^\circ) = \frac{1}{2}$
- $\sin(60^\circ) = \frac{\sqrt{3}}{2}$

- Cosine:

- $\cos(30^\circ) = \frac{\sqrt{3}}{2}$
- $\cos(60^\circ) = \frac{1}{2}$

- Tangent:

- $\tan(30^\circ) = \frac{1}{\sqrt{3}}$
- $\tan(60^\circ) = \sqrt{3}$

2. Real-World Applications

30-60-90 triangles are not just theoretical constructs; they have numerous real-world applications, including:

- Architecture and Engineering: Used in designing roofs, ramps, and other

structures.

- Physics: In resolving vector components, especially in problems involving angles.
- Surveying: For determining heights and distances indirectly.

Creating a 30-60-90 Special Right Triangles Worksheet

Worksheets are an integral part of the learning process, providing students with opportunities to practice and apply concepts. A well-structured worksheet focused on 30-60-90 triangles can include a variety of exercises.

Components of the Worksheet

1. Introduction Section:

- Briefly explain the properties of 30-60-90 triangles.
- Include diagrams to illustrate the triangle and its properties.

2. Practice Problems:

- Finding Side Lengths:

- Given the shortest side (x) , calculate the lengths of the other two sides.

- Example: If $(x = 4)$, find the lengths of the other sides.

- Angle Measures:

- Problems where students identify the angles given one side length.

- Example: If the hypotenuse is 10, find the length of the side opposite to the 60° angle.

3. Word Problems:

- Real-life scenarios requiring the use of 30-60-90 triangles.

- Example: A ladder leaning against a wall forms a 30-60-90 triangle. If the base of the ladder is 5 feet away from the wall, how tall is the wall?

4. Challenge Problems:

- More complex problems that integrate knowledge of 30-60-90 triangles with other geometric concepts.

- Example: Calculate the area of a triangle formed by a 30-60-90 triangle when the height is known.

Worksheet Layout and Design

Designing an effective worksheet involves considering both aesthetics and functionality:

- Clear Instructions: Make sure each section has clear, concise instructions.
- Visual Aids: Use diagrams and illustrations to enhance understanding.
- Variety of Exercises: Include multiple types of problems to cater to different learning styles.
- Space for Calculations: Provide ample space for students to show their work.

Benefits of Using Worksheets

Worksheets that focus on 30-60-90 special right triangles offer numerous benefits for students:

1. **Reinforcement of Concepts:** Regular practice helps solidify understanding and retention of the material.
2. **Self-Paced Learning:** Students can work through worksheets at their own pace, allowing for individualized learning.
3. **Immediate Feedback:** By completing worksheets, students can quickly assess their understanding and identify areas needing improvement.
4. **Preparation for Exams:** Worksheets can serve as preparatory tools for quizzes and tests, providing students with a wide range of practice problems.
5. **Increased Confidence:** Mastering problems involving 30-60-90 triangles builds confidence in students' mathematical abilities.

Conclusion

The 30 60 90 special right triangles worksheet is an essential resource for students aiming to master the properties and applications of these unique triangles. By providing a structured approach to learning, worksheets can help students develop a deeper understanding of geometry and trigonometry. Through practice, students can enhance their problem-solving skills, build confidence, and prepare effectively for future mathematical challenges. As students engage with these exercises, they gain not only knowledge but also the ability to apply their understanding in real-world situations, making the study of 30-60-90 triangles both practical and relevant.

Frequently Asked Questions

What are 30-60-90 special right triangles?

30-60-90 triangles are right triangles with angles measuring 30 degrees, 60 degrees, and 90 degrees. They have specific side length ratios of $1 : \sqrt{3} : 2$.

What is the ratio of the sides in a 30-60-90 triangle?

The sides of a 30-60-90 triangle are in the ratio $1 : \sqrt{3} : 2$, where '1' is opposite the 30-degree angle, ' $\sqrt{3}$ ' is opposite the 60-degree angle, and '2' is the hypotenuse.

How can I find the length of the sides in a 30-60-90 triangle if I know one side?

If you know the length of the shorter leg (opposite the 30-degree angle), multiply it by $\sqrt{3}$ to find the longer leg, and multiply it by 2 to find the hypotenuse.

What is the area formula for a 30-60-90 triangle?

The area of a 30-60-90 triangle can be calculated using the formula: Area = (1/2) base height, where the base is the shorter leg and the height is the longer leg.

Why are 30-60-90 triangles important in geometry?

30-60-90 triangles are important because they allow for easy calculations of side lengths and are commonly used in various applications, including trigonometry and real-world problems.

What are some common applications of 30-60-90 triangles?

Common applications include architecture, engineering, and construction, where angles and side lengths need to be calculated accurately.

How do you solve problems involving 30-60-90 triangles?

To solve problems, identify the known side lengths or angles, use the side ratios to find missing lengths, and apply the Pythagorean theorem if necessary.

What type of problems can be found on a 30-60-90 special right triangles worksheet?

Worksheets may include problems on finding side lengths, calculating areas, angle measures, and word problems that apply the properties of 30-60-90 triangles.

Can a 30-60-90 triangle be used to find the height of a building?

Yes, by using the properties of 30-60-90 triangles, one can create a right triangle to calculate the height of a building if you have a measurement of the distance from the observer to the base.

Find other PDF article:

<https://soc.up.edu/ph/25-style/Book?docid=Wow62-5139&title=google-analytics-data-science.pdf>

[30 60 90 Special Right Triangles Worksheet](#)

30° 60° 45° cos tan sin ...

$\sin 30^\circ = \cos 60^\circ = \frac{1}{2}$ $\sin 60^\circ = \cos 30^\circ = \frac{\sqrt{3}}{2}$ $\sin 45^\circ = \cos 45^\circ = \frac{\sqrt{2}}{2}$ $\tan 45^\circ = 1$ $\tan 30^\circ = \frac{1}{\sqrt{3}}$ $\tan 60^\circ = \sqrt{3}$ $\sin 30^\circ = \frac{1}{2}$ $\sin 45^\circ = \frac{\sqrt{2}}{2}$ $\sin 60^\circ = \frac{\sqrt{3}}{2}$ $\cos 30^\circ = \frac{\sqrt{3}}{2}$ $\cos 45^\circ = \frac{\sqrt{2}}{2}$ $\cos 60^\circ = \frac{1}{2}$ $\tan 30^\circ = \frac{1}{\sqrt{3}}$ $\tan 45^\circ = 1$ $\tan 60^\circ = \sqrt{3}$...

ftp -

