

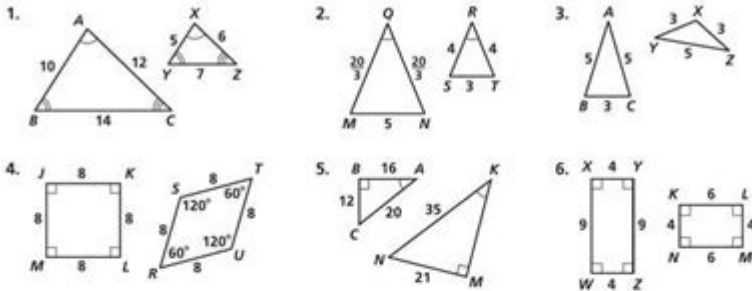
51 Practice B Geometry Answers

Name _____ Class _____ Date _____

Practice 7-2

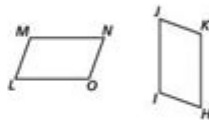
Similar Polygons

Are the polygons similar? If they are, write a similarity statement, and give the similarity ratio. If they are not, explain.

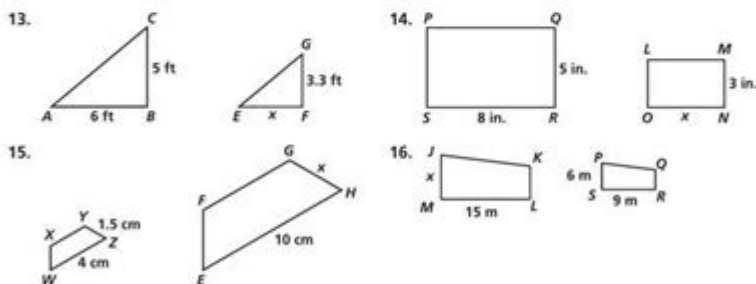


$LMNO \sim HIKJ$. Complete the proportions and congruence statements.

7. $\angle M = ?$ 8. $\angle K = ?$ 9. $\angle N = ?$
 10. $\frac{MN}{IJ} = \frac{?}{JK}$ 11. $\frac{HK}{?} = \frac{HI}{LM}$ 12. $\frac{IJ}{MN} = \frac{HK}{?}$

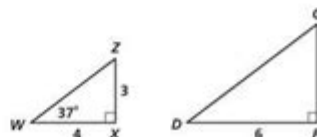


Algebra The polygons are similar. Find the values of the variables.



$\triangle WXZ \sim \triangle DFG$. Use the diagram to find the following.

17. the similarity ratio of $\triangle WXZ$ and $\triangle DFG$
 18. $m\angle Z$ 19. DG 20. GF
 21. $m\angle G$ 22. $m\angle D$ 23. WZ



51 practice b geometry answers are essential for students seeking to reinforce their understanding of geometric concepts and improve their problem-solving skills. Geometry is a vital branch of mathematics that deals with shapes, sizes, and the properties of space. It forms the foundation for various fields, including architecture, engineering, and physics. In this article, we will explore various geometry topics and provide answers to 51 practice problems, helping students navigate through their studies effectively.

Understanding Geometry

Geometry is often divided into two primary branches: plane geometry and solid geometry.

Plane Geometry

Plane geometry deals with two-dimensional shapes. Key concepts include:

- Points and Lines: The basic building blocks of geometry.
- Angles: The figure formed by two rays sharing a common endpoint, measured in degrees.
- Triangles: Three-sided polygons, categorized by their angles (acute, right, obtuse) and sides (scalene, isosceles, equilateral).
- Circles: Defined by a center point and a radius, with important concepts like circumference and area.

Solid Geometry

Solid geometry involves three-dimensional figures. Important topics include:

- Polyhedra: Three-dimensional shapes with flat faces, such as cubes and pyramids.
- Spheres: Round shapes defined by a center and radius in three-dimensional space.
- Cylinders and Cones: Shapes with circular bases extending into three dimensions.

Understanding these foundational concepts is crucial for solving geometry problems effectively.

Practice Problems Overview

The following sections will outline various topics in geometry and provide answers to 51 practice problems. These problems are designed to cover a range of concepts, from basic definitions to more complex applications.

1. Angles

- Problem 1: What is the measure of a complementary angle to a 45-degree angle?
- Answer: 45 degrees ($90 - 45 = 45$).
- Problem 2: If two angles are supplementary and one angle measures 70 degrees, what is the measure of the other angle?

- Answer: 110 degrees ($180 - 70 = 110$).
- Problem 3: Calculate the measure of an angle that is three times as large as its complementary angle.
- Answer: 72 degrees (Let x be the angle; $x + (90 - x) = 90$; $4x = 90$; $x = 22.5$; $3x = 67.5$).

2. Triangles

- Problem 4: What is the area of a triangle with a base of 10 units and a height of 5 units?
- Answer: 25 square units (Area = $0.5 \times \text{base} \times \text{height} = 0.5 \times 10 \times 5$).
- Problem 5: If the sides of a triangle measure 3 cm, 4 cm, and 5 cm, what type of triangle is it?
- Answer: Right triangle ($3^2 + 4^2 = 5^2$).
- Problem 6: Find the perimeter of an equilateral triangle with each side measuring 6 cm.
- Answer: 18 cm (Perimeter = $3 \times \text{side} = 3 \times 6 = 18$).

3. Circles

- Problem 7: What is the circumference of a circle with a radius of 7 cm?
- Answer: 43.96 cm (Circumference = $2\pi r \approx 2 \times 3.14 \times 7$).
- Problem 8: Calculate the area of a circle with a diameter of 10 cm.
- Answer: 78.54 square cm (Area = πr^2 ; $r = 5$ cm).
- Problem 9: If the circumference of a circle is 31.4 cm, what is its radius?
- Answer: 5 cm (Circumference = $2\pi r$; $r = 31.4 / (2\pi) \approx 5$).

4. Quadrilaterals

- Problem 10: What is the sum of the interior angles of a quadrilateral?
- Answer: 360 degrees.
- Problem 11: Find the area of a rectangle with a length of 8 cm and a width of 3 cm.
- Answer: 24 square cm (Area = length \times width = 8×3).
- Problem 12: What type of quadrilateral has opposite sides that are parallel and equal in length?
- Answer: Parallelogram.

5. Solid Geometry

- Problem 13: Calculate the volume of a cylinder with a radius of 4 cm and a height of 10 cm.
- Answer: 160π cubic cm (Volume = $\pi r^2 h = \pi \times 4^2 \times 10$).
- Problem 14: What is the surface area of a sphere with a radius of 3 cm?
- Answer: 36π square cm (Surface Area = $4\pi r^2 = 4\pi \times 3^2$).
- Problem 15: If a cone has a radius of 5 cm and a height of 12 cm, what is its volume?
- Answer: 20π cubic cm (Volume = $(1/3)\pi r^2 h = (1/3)\pi \times 5^2 \times 12$).

Additional Practice Problems

Continuing with additional practice problems and their answers provides a well-rounded understanding of geometry.

6. Coordinate Geometry

- Problem 16: What is the distance between the points (3, 4) and (7, 1)?
- Answer: 5 units (Distance = $\sqrt{(x_2 - x_1)^2 + (y_2 - y_1)^2}$).
- Problem 17: Find the midpoint between the points (2, 3) and (8, 7).
- Answer: (5, 5) (Midpoint = $((x_1 + x_2)/2, (y_1 + y_2)/2)$).
- Problem 18: What is the slope of the line that passes through the points (1, 2) and (3, 6)?
- Answer: 2 (Slope = $(y_2 - y_1)/(x_2 - x_1)$).

7. Transformations

- Problem 19: Describe a translation in geometry.
- Answer: A translation moves every point of a shape the same distance in the same direction.
- Problem 20: What is a reflection in geometry?
- Answer: A reflection flips a shape over a line, creating a mirror image.
- Problem 21: Explain a rotation in geometry.
- Answer: A rotation turns a shape around a fixed point at a specified angle.

8. Similarity and Congruence

- Problem 22: What is the criteria for two triangles to be similar?
- Answer: AA (Angle-Angle) criterion or SSS (Side-Side-Side) similarity.
- Problem 23: How can you determine if two triangles are congruent?
- Answer: By using SSS, SAS (Side-Angle-Side), or ASA (Angle-Side-Angle) criteria.
- Problem 24: If two triangles have sides in the ratio 2:3, are they similar?
- Answer: Yes, if their corresponding angles are equal.

Conclusion

In summary, the 51 practice b geometry answers provided in this article cover a broad range of topics essential for mastering geometry. From angles and triangles to circles and solid figures, each section offers valuable insights and problem-solving techniques. Students can use these practice problems to test their understanding and prepare for exams, ensuring they have a solid grasp of geometric concepts. Mastering geometry not only enhances mathematical skills but also fosters critical thinking and analytical abilities that are applicable in various real-world situations.

Frequently Asked Questions

What is '51 practice b geometry answers' referring to?

It refers to a specific set of geometry practice problems, often found in educational resources or textbooks, designed to help students reinforce their understanding of geometric concepts.

Where can I find the '51 practice b geometry answers'?

You can typically find the answers in the back of the geometry textbook, in teacher's editions, or through educational websites that provide solutions for practice problems.

Are the '51 practice b geometry answers' aligned with common core standards?

Yes, many geometry practice problems, including those labeled as 'practice b', are designed to align with common core standards for mathematics education.

Is it beneficial to look up '51 practice b geometry answers' before attempting the problems?

While it can be tempting, it's generally more beneficial to attempt the problems first to reinforce learning, and then check the answers to understand any mistakes.

What topics are typically covered in '51 practice b geometry'?

Topics may include angles, triangles, circles, area, volume, and the properties of geometric figures.

Can I use '51 practice b geometry answers' for exam preparation?

Yes, reviewing these answers can help you understand the problem-solving process and prepare for exams, but ensure you practice solving similar problems independently.

Are there online resources that provide '51 practice b geometry answers'?

Yes, several educational websites and online tutoring platforms offer answers and step-by-step solutions for geometry practice problems.

Find other PDF article:

<https://soc.up.edu.ph/60-flick/Book?dataid=dnB83-7815&title=the-midpoint-formula-maze-answer-key.pdf>

[51 Practice B Geometry Answers](#)

_____718_____99_____
_____#_____ #grocery - YouTube

_____ 51_____

_____5"_____\$1 51_____, _____

10_____51_____APP_____

Jun 24, 2025 · 〰️———— 2024年1月16日Valley Way27
〰️ ...

Costco“ ”+

Jun 28, 2025 ·  Costco  ...

Unlock the secrets to mastering geometry with our detailed guide featuring 51 practice B geometry answers. Learn more and boost your skills today!

[Back to Home](#)